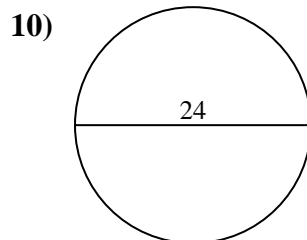
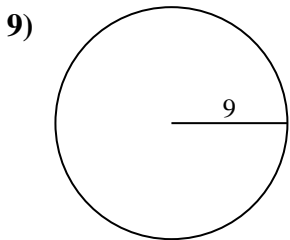
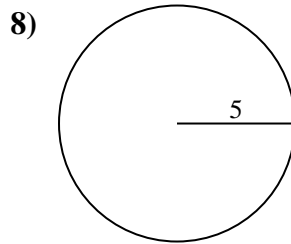
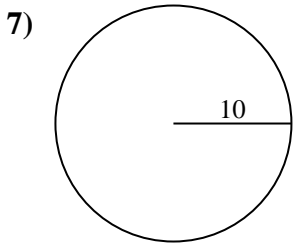
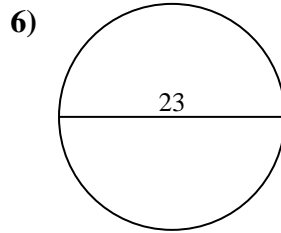
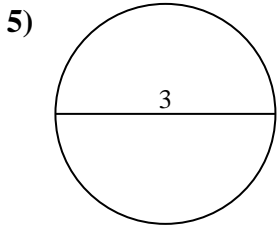
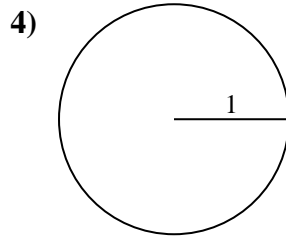
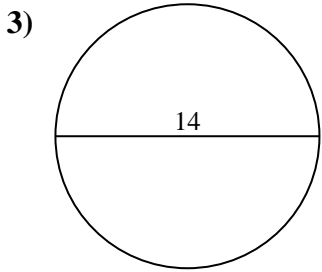
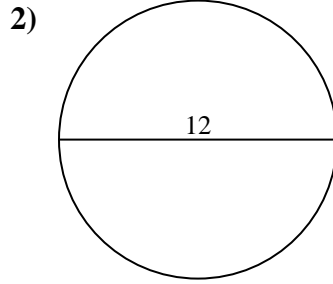
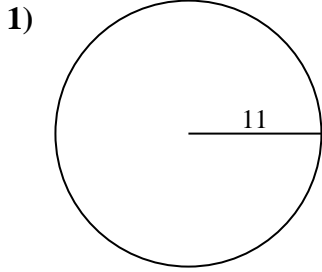




Find the area of each circle. Circles are not to scale.

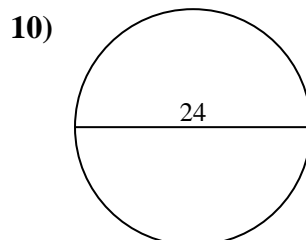
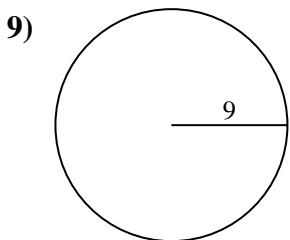
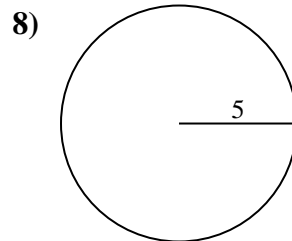
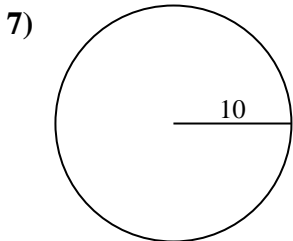
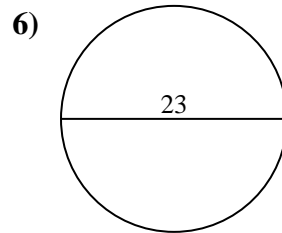
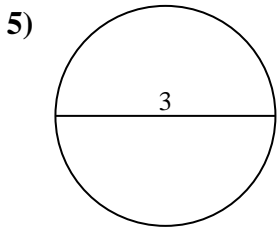
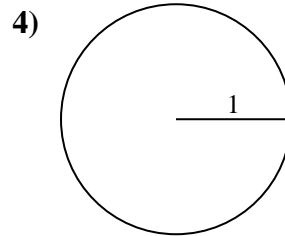
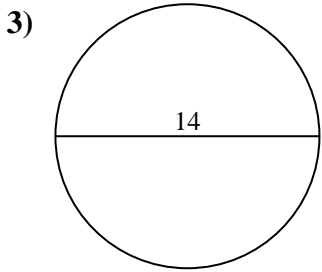
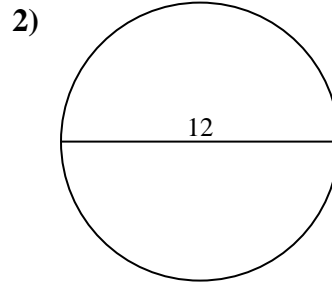
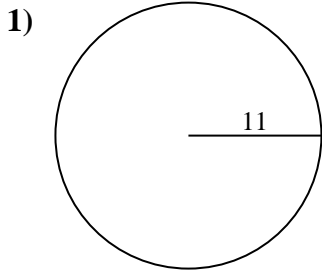


Answers

- 1. _____
- 2. _____
- 3. _____
- 4. _____
- 5. _____
- 6. _____
- 7. _____
- 8. _____
- 9. _____
- 10. _____



Find the area of each circle. Circles are not to scale.

**Answers**

1. **380.13 cm²**
2. **113.1 cm²**
3. **153.94 cm²**
4. **3.14 cm²**
5. **7.07 cm²**
6. **415.48 cm²**
7. **314.16 cm²**
8. **78.54 cm²**
9. **254.47 cm²**
10. **452.39 cm²**



Find the area of each circle. Circles are not to scale.

415.48 cm²

153.94 cm²

3.14 cm²

78.54 cm²

314.16 cm²

7.07 cm²

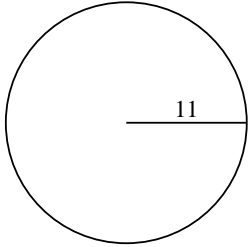
380.13 cm²

113.1 cm²

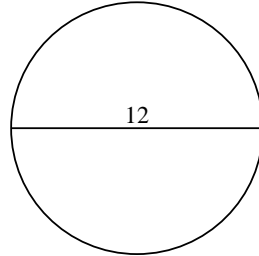
452.39 cm²

254.47 cm²

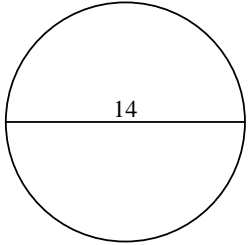
1)



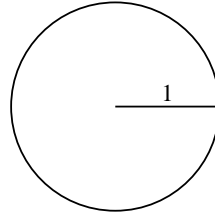
2)



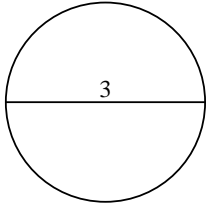
3)



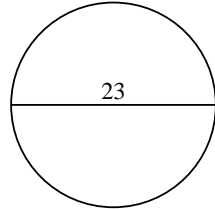
4)



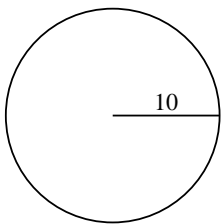
5)



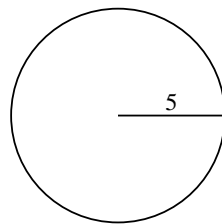
6)



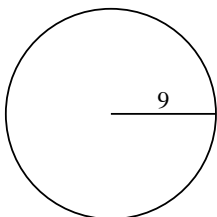
7)



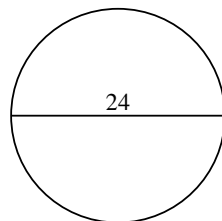
8)



9)



10)



Answers

1. _____

2. _____

3. _____

4. _____

5. _____

6. _____

7. _____

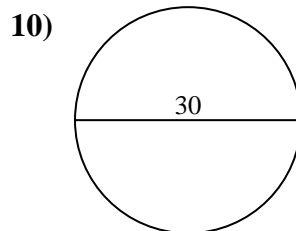
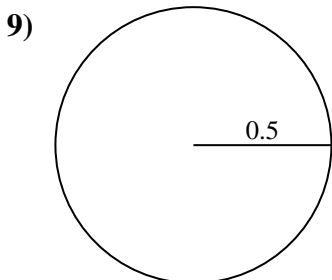
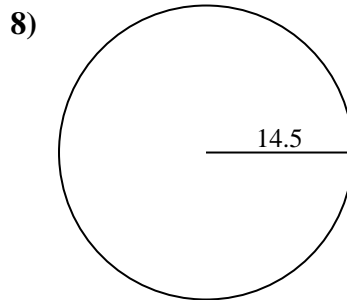
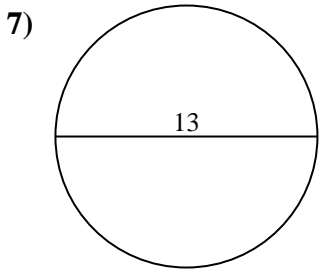
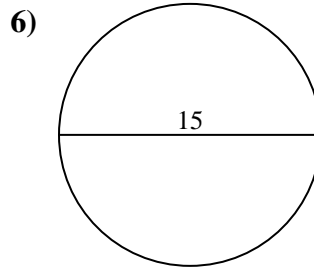
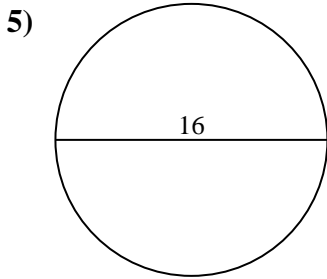
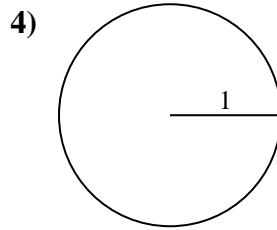
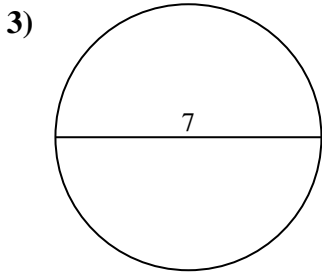
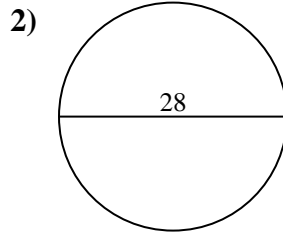
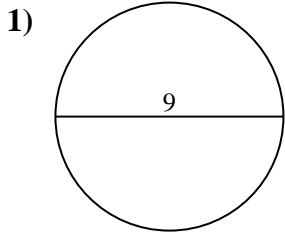
8. _____

9. _____

10. _____



Find the area of each circle. Circles are not to scale.

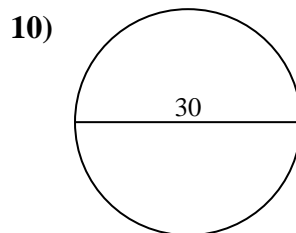
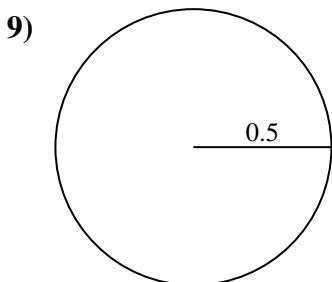
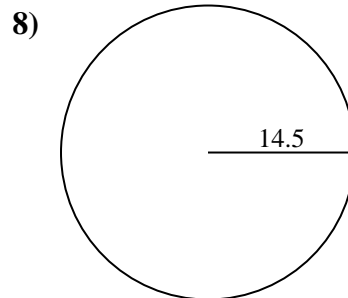
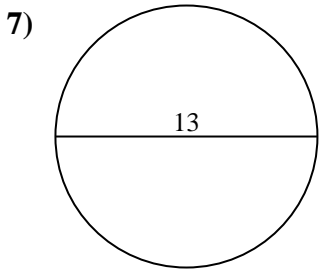
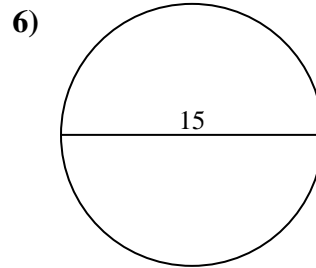
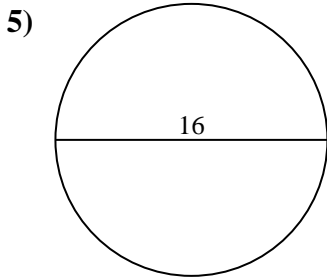
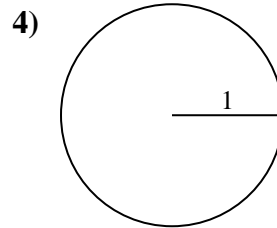
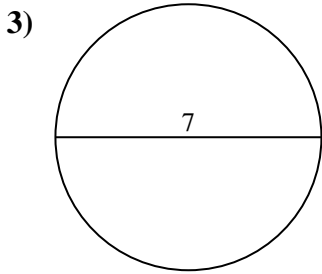
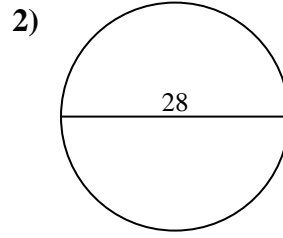
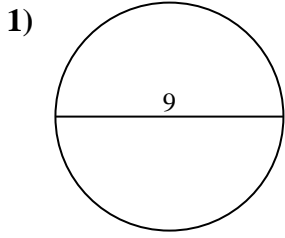


Answers

- 1. _____
- 2. _____
- 3. _____
- 4. _____
- 5. _____
- 6. _____
- 7. _____
- 8. _____
- 9. _____
- 10. _____



Find the area of each circle. Circles are not to scale.

**Answers**

1. 63.62 cm²
2. 615.75 cm²
3. 38.48 cm²
4. 3.14 cm²
5. 201.06 cm²
6. 176.71 cm²
7. 132.73 cm²
8. 660.52 cm²
9. 0.79 cm²
10. 706.86 cm²



Find the area of each circle. Circles are not to scale.

38.48 cm²

660.52 cm²

615.75 cm²

132.73 cm²

3.14 cm²

706.86 cm²

0.79 cm²

201.06 cm²

176.71 cm²

63.62 cm²

Answers

1. _____

2. _____

3. _____

4. _____

5. _____

6. _____

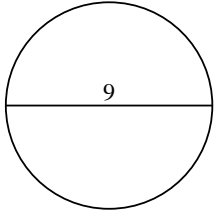
7. _____

8. _____

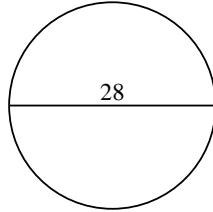
9. _____

10. _____

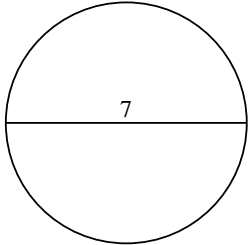
1)



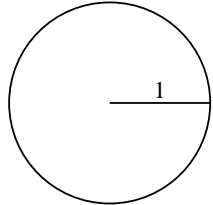
2)



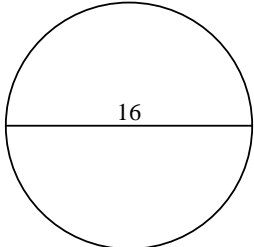
3)



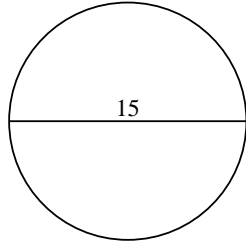
4)



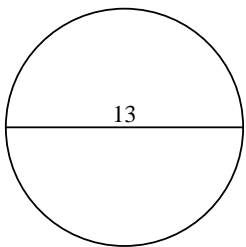
5)



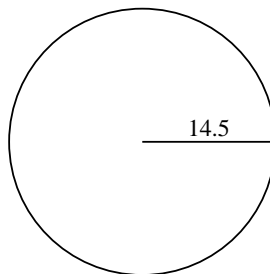
6)



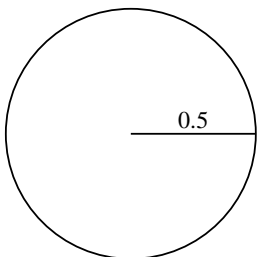
7)



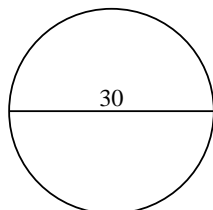
8)



9)

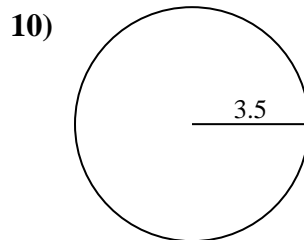
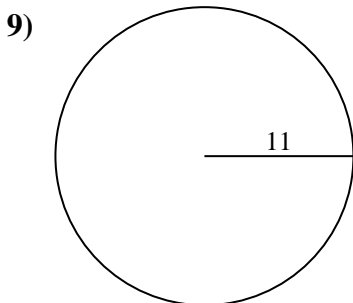
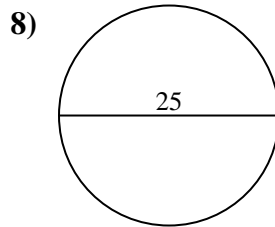
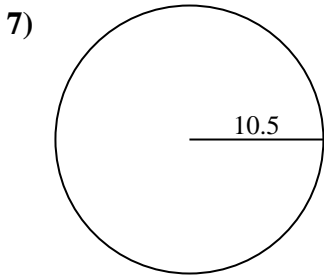
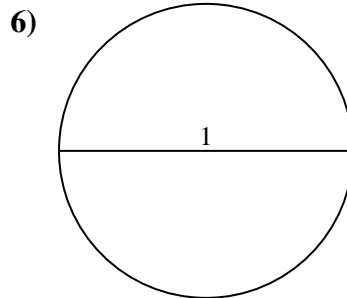
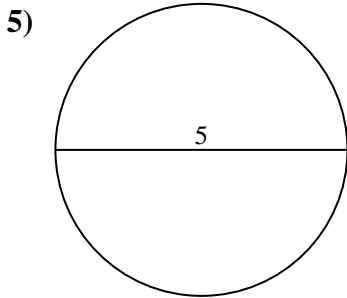
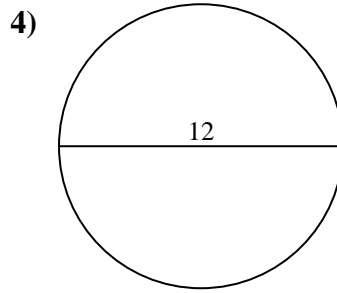
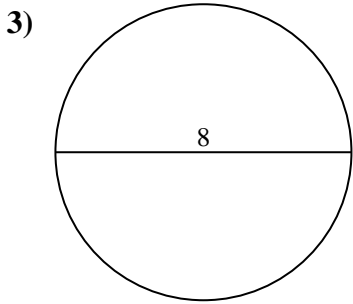
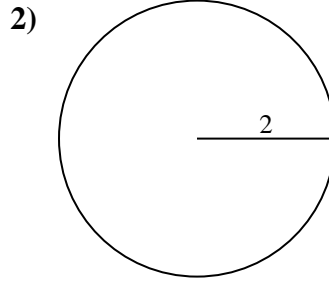
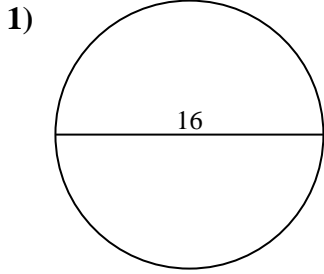


10)





Find the area of each circle. Circles are not to scale.

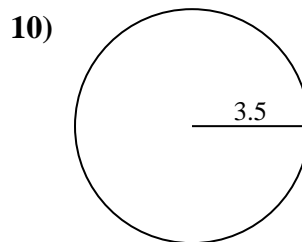
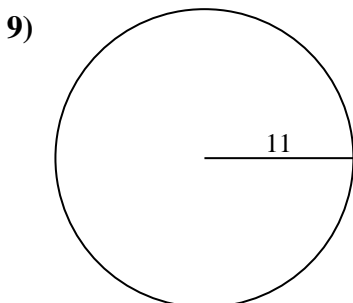
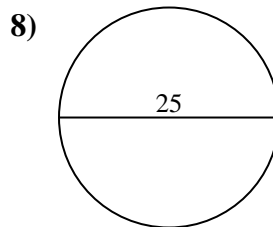
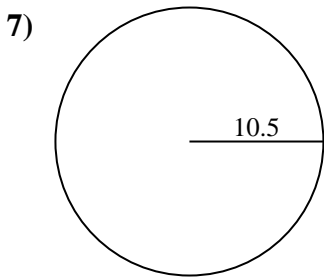
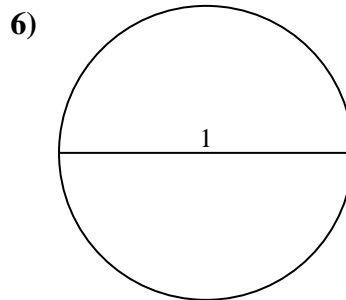
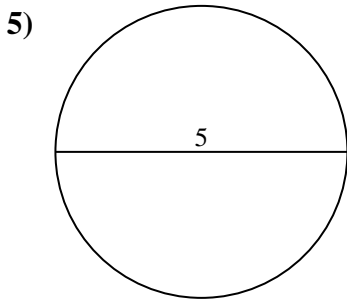
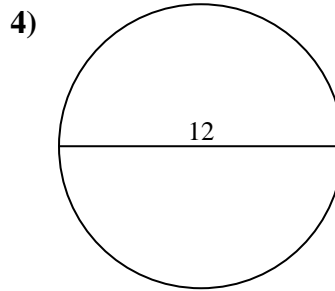
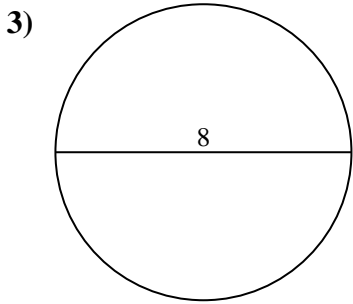
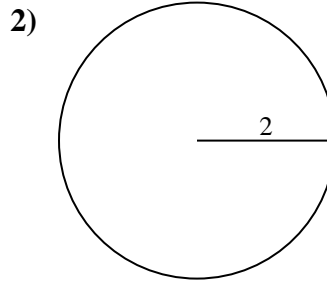
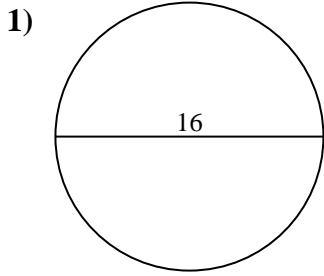


Answers

- 1. _____
- 2. _____
- 3. _____
- 4. _____
- 5. _____
- 6. _____
- 7. _____
- 8. _____
- 9. _____
- 10. _____



Find the area of each circle. Circles are not to scale.

**Answers**

1. 201.06 cm²
2. 12.57 cm²
3. 50.27 cm²
4. 113.1 cm²
5. 19.63 cm²
6. 0.79 cm²
7. 346.36 cm²
8. 490.87 cm²
9. 380.13 cm²
10. 38.48 cm²



Find the area of each circle. Circles are not to scale.

113.1 cm²

50.27 cm²

490.87 cm²

19.63 cm²

38.48 cm²

12.57 cm²

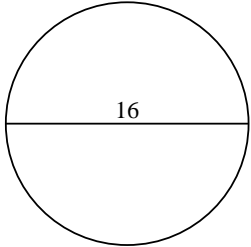
201.06 cm²

380.13 cm²

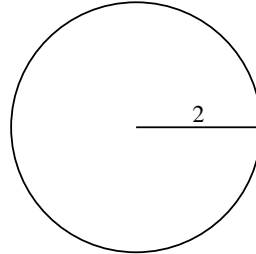
346.36 cm²

0.79 cm²

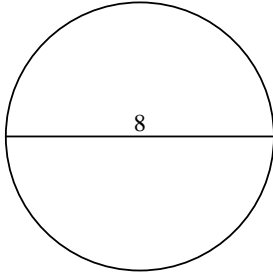
1)



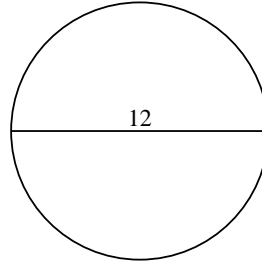
2)



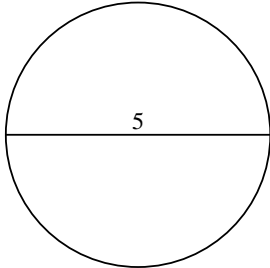
3)



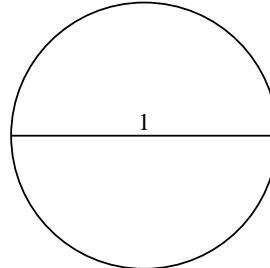
4)



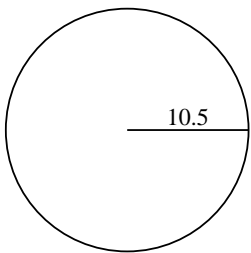
5)



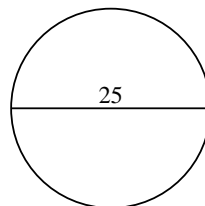
6)



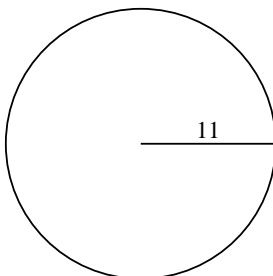
7)



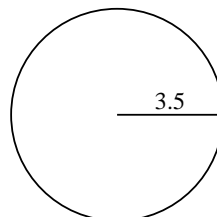
8)



9)



10)



Answers

1. _____

2. _____

3. _____

4. _____

5. _____

6. _____

7. _____

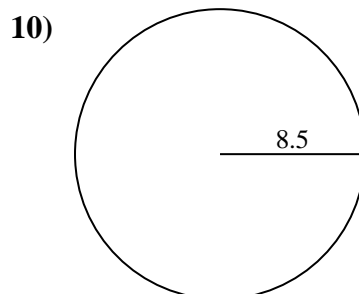
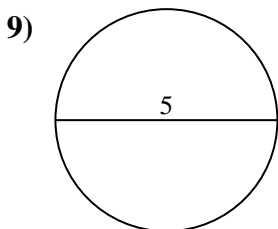
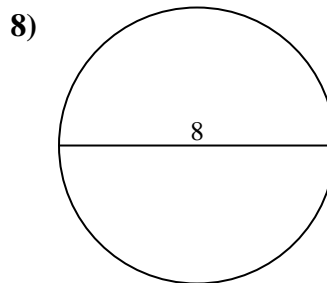
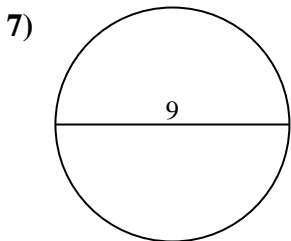
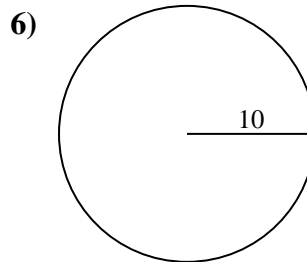
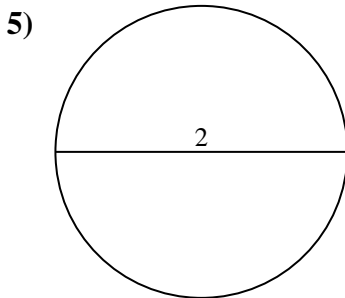
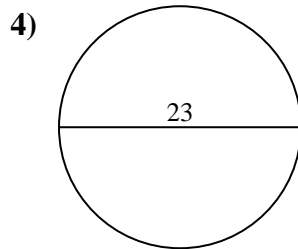
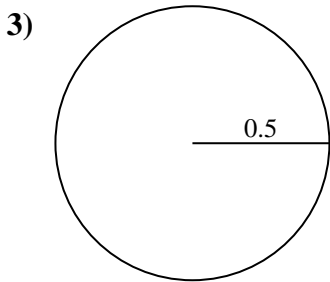
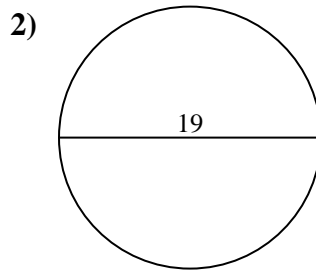
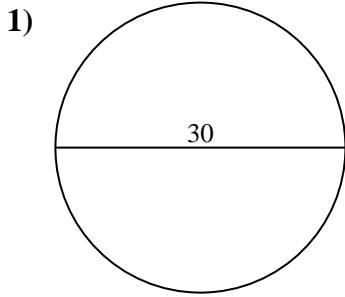
8. _____

9. _____

10. _____



Find the area of each circle. Circles are not to scale.

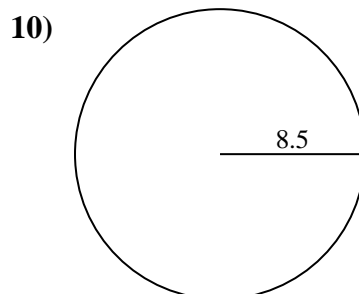
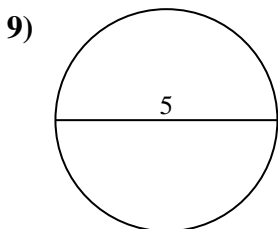
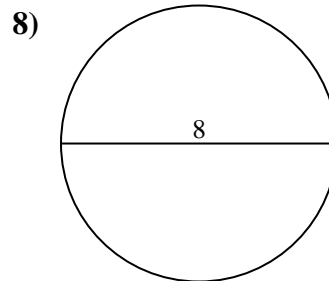
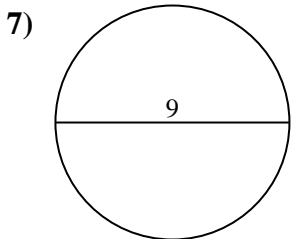
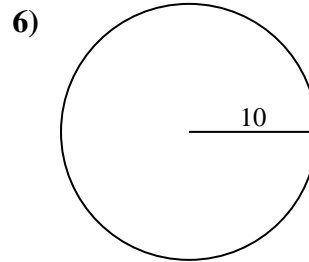
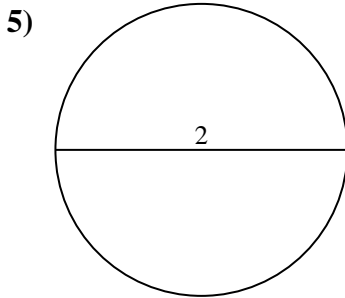
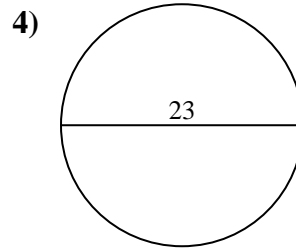
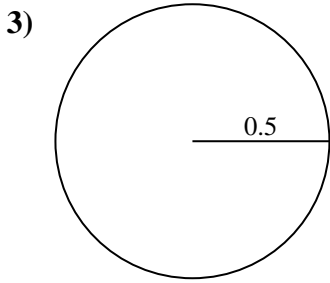
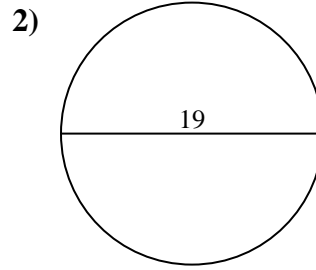
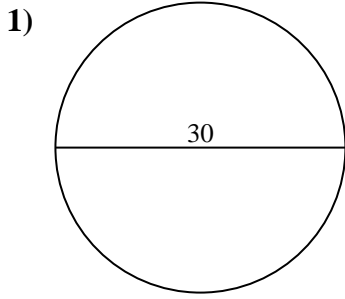


Answers

- 1. _____
- 2. _____
- 3. _____
- 4. _____
- 5. _____
- 6. _____
- 7. _____
- 8. _____
- 9. _____
- 10. _____



Find the area of each circle. Circles are not to scale.

**Answers**

1. **706.86 cm²**
2. **283.53 cm²**
3. **0.79 cm²**
4. **415.48 cm²**
5. **3.14 cm²**
6. **314.16 cm²**
7. **63.62 cm²**
8. **50.27 cm²**
9. **19.63 cm²**
10. **226.98 cm²**

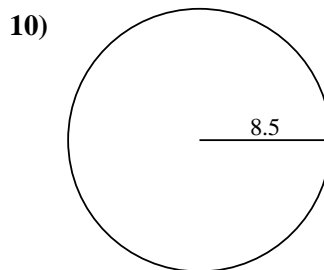
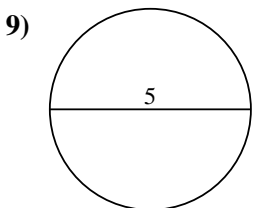
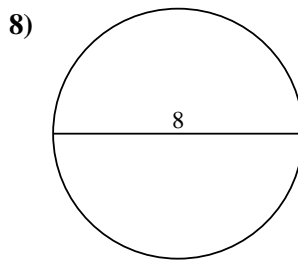
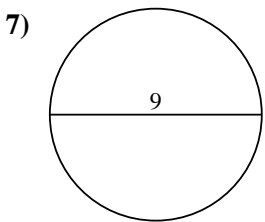
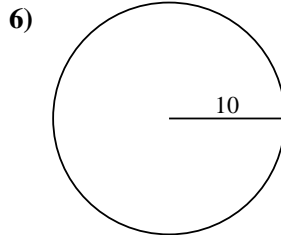
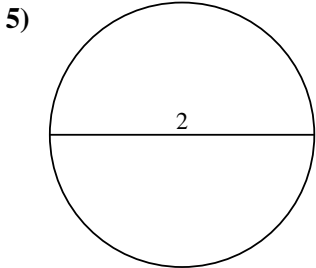
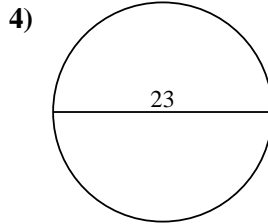
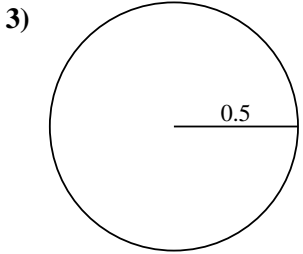
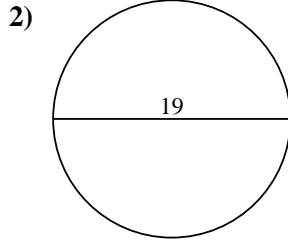
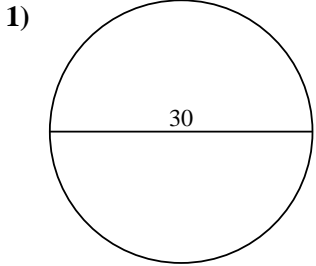


Find the area of each circle. Circles are not to scale.

Answers

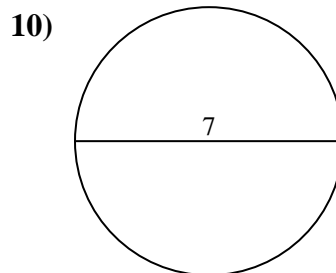
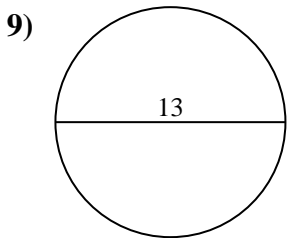
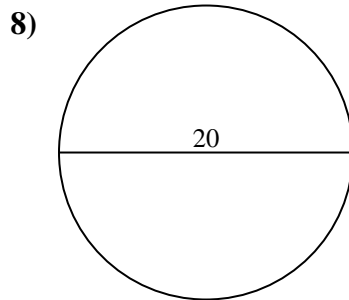
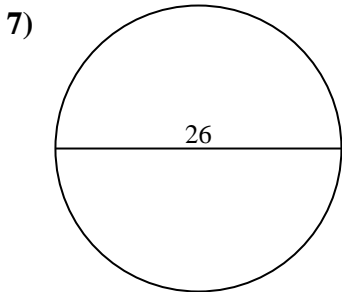
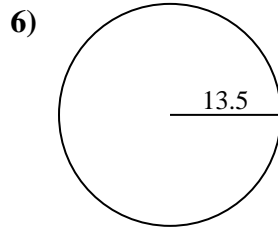
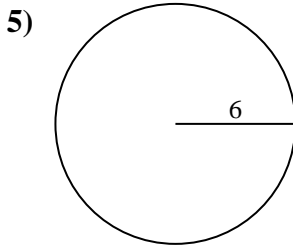
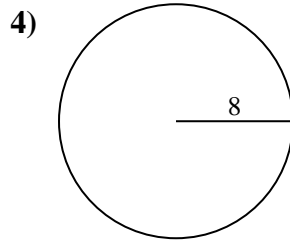
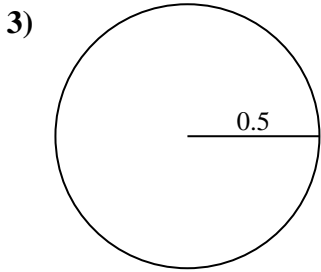
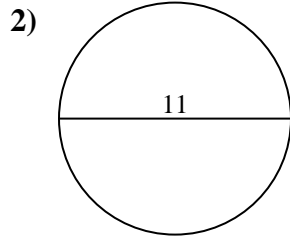
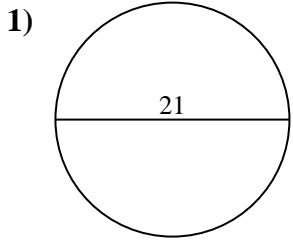
3.14 cm ²	63.62 cm ²	283.53 cm ²	226.98 cm ²	50.27 cm ²
314.16 cm ²	706.86 cm ²	0.79 cm ²	415.48 cm ²	19.63 cm ²

1. _____
2. _____
3. _____
4. _____
5. _____
6. _____
7. _____
8. _____
9. _____
10. _____





Find the area of each circle. Circles are not to scale.

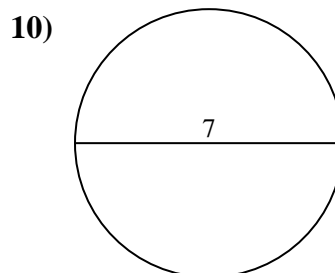
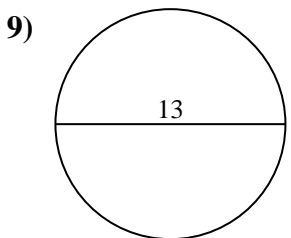
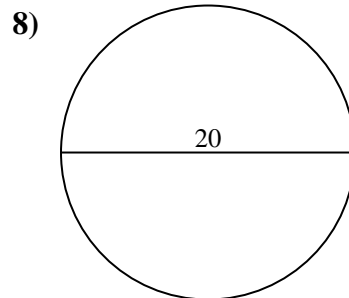
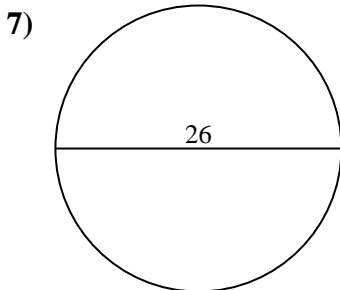
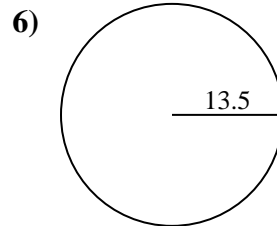
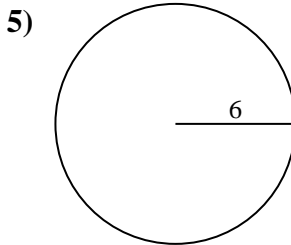
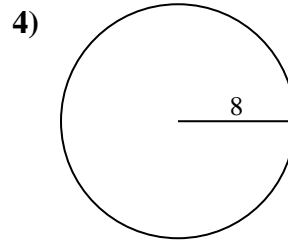
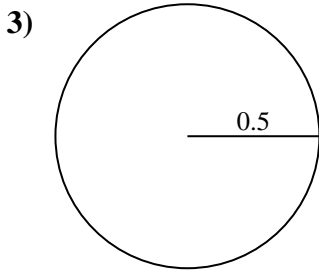
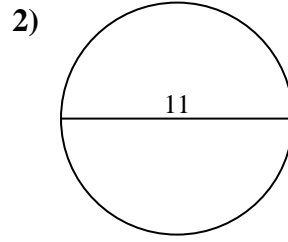
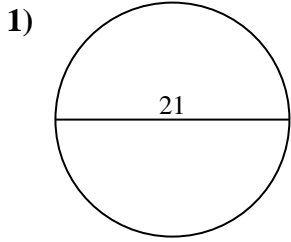


Answers

- 1. _____
- 2. _____
- 3. _____
- 4. _____
- 5. _____
- 6. _____
- 7. _____
- 8. _____
- 9. _____
- 10. _____



Find the area of each circle. Circles are not to scale.

Answers

1. 346.36 cm²
2. 95.03 cm²
3. 0.79 cm²
4. 201.06 cm²
5. 113.1 cm²
6. 572.56 cm²
7. 530.93 cm²
8. 314.16 cm²
9. 132.73 cm²
10. 38.48 cm²



Find the area of each circle. Circles are not to scale.

Answers

95.03 cm²

0.79 cm²

346.36 cm²

132.73 cm²

38.48 cm²

201.06 cm²

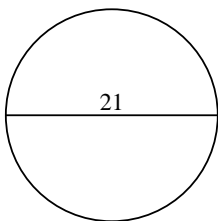
572.56 cm²

113.1 cm²

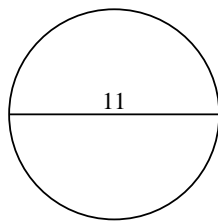
314.16 cm²

530.93 cm²

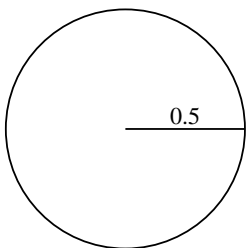
1)



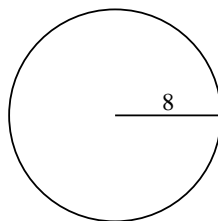
2)



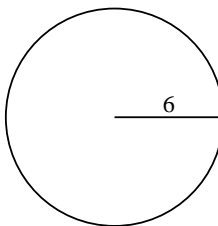
3)



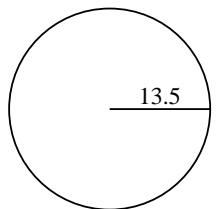
4)



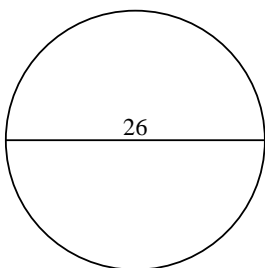
5)



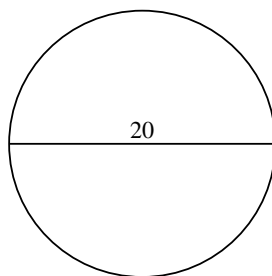
6)



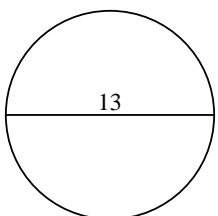
7)



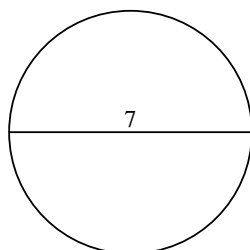
8)



9)



10)



1. _____

2. _____

3. _____

4. _____

5. _____

6. _____

7. _____

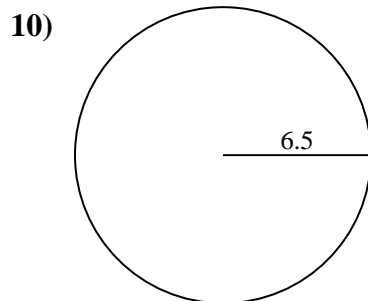
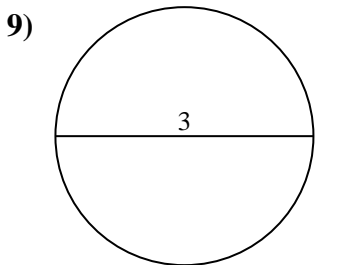
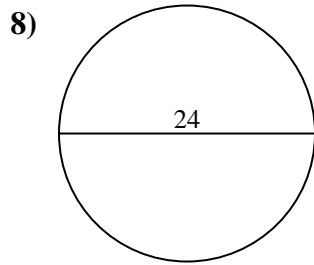
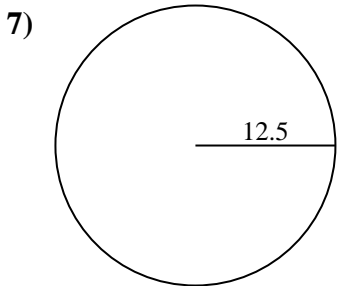
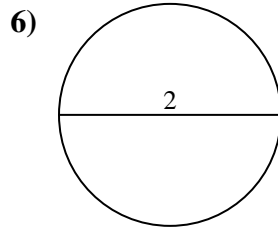
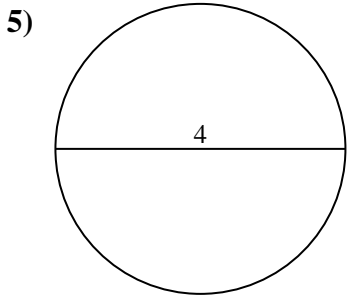
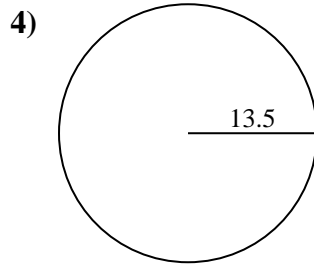
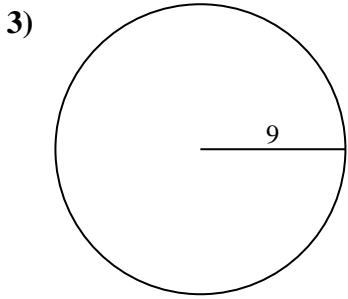
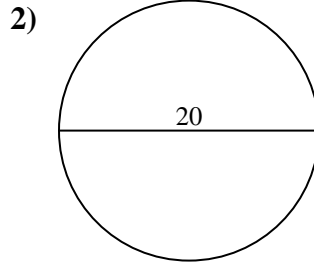
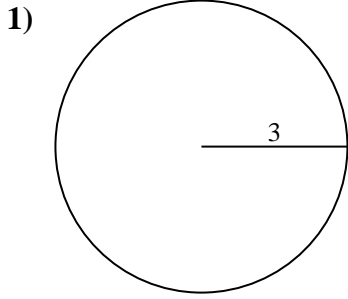
8. _____

9. _____

10. _____



Find the area of each circle. Circles are not to scale.

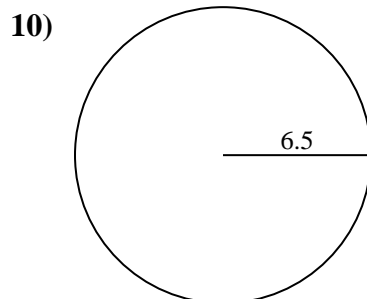
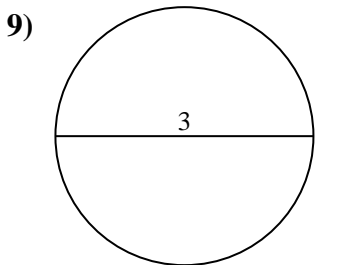
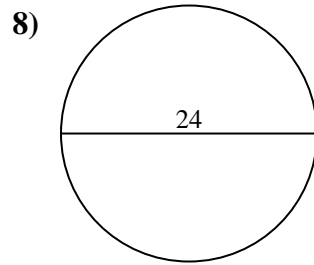
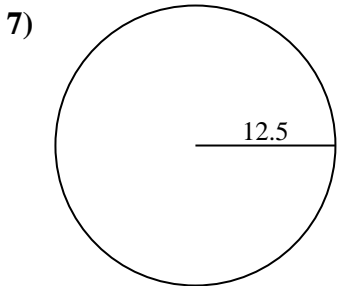
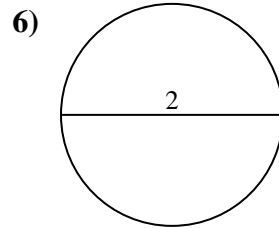
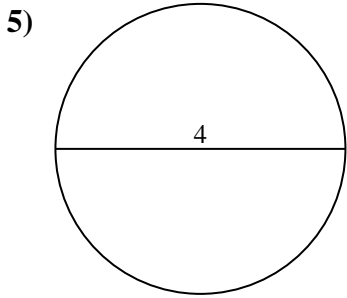
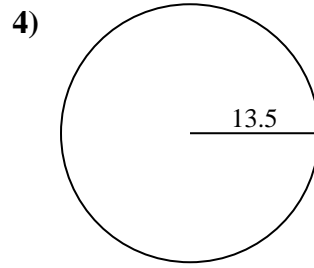
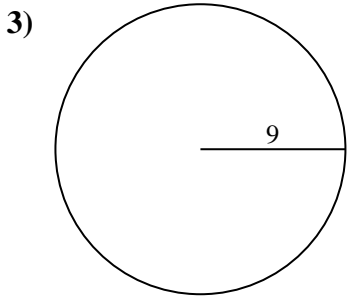
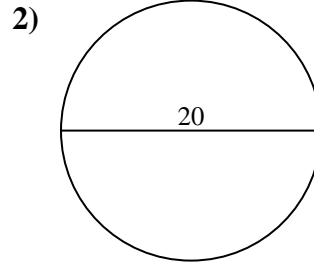
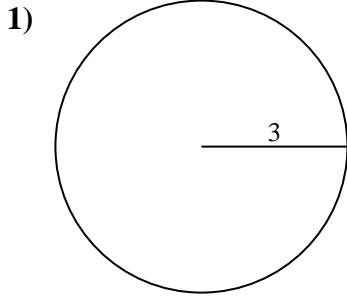


Answers

- 1. _____
- 2. _____
- 3. _____
- 4. _____
- 5. _____
- 6. _____
- 7. _____
- 8. _____
- 9. _____
- 10. _____



Find the area of each circle. Circles are not to scale.

Answers

1. 28.27 cm²
2. 314.16 cm²
3. 254.47 cm²
4. 572.56 cm²
5. 12.57 cm²
6. 3.14 cm²
7. 490.87 cm²
8. 452.39 cm²
9. 7.07 cm²
10. 132.73 cm²



Find the area of each circle. Circles are not to scale.

254.47 cm²

314.16 cm²

12.57 cm²

28.27 cm²

132.73 cm²

7.07 cm²

452.39 cm²

490.87 cm²

3.14 cm²

572.56 cm²

Answers

1. _____

2. _____

3. _____

4. _____

5. _____

6. _____

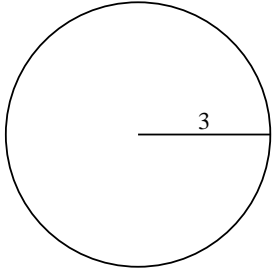
7. _____

8. _____

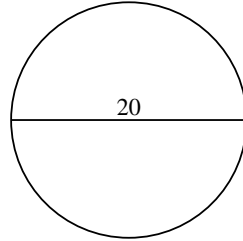
9. _____

10. _____

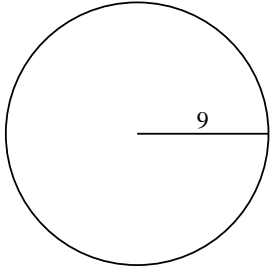
1)



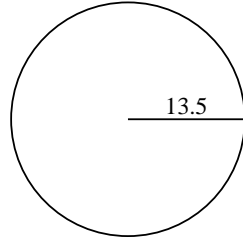
2)



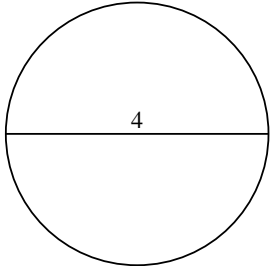
3)



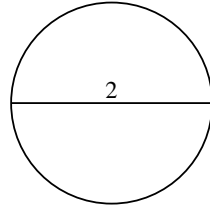
4)



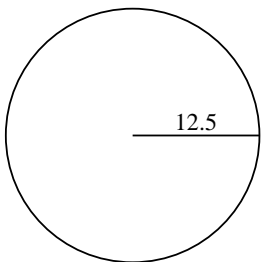
5)



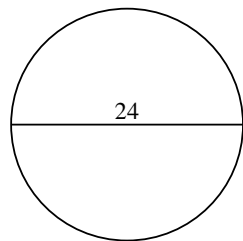
6)



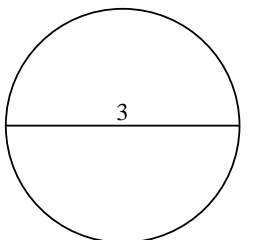
7)



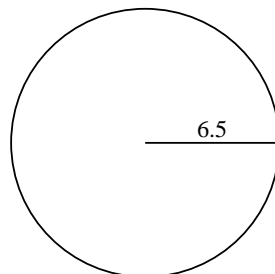
8)



9)

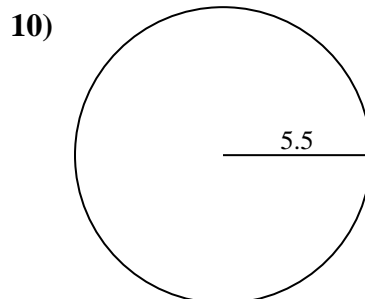
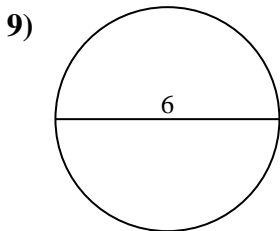
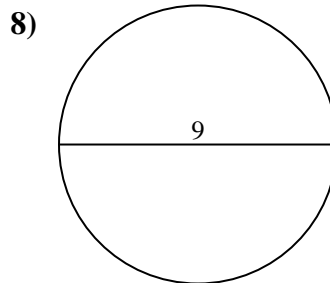
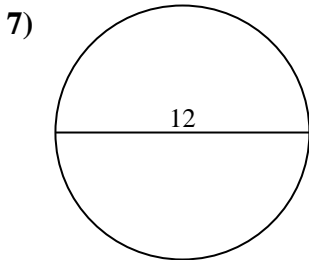
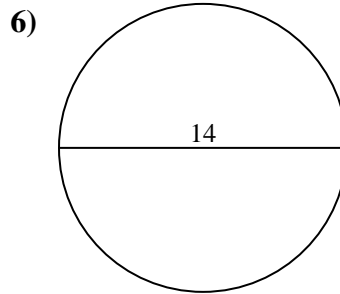
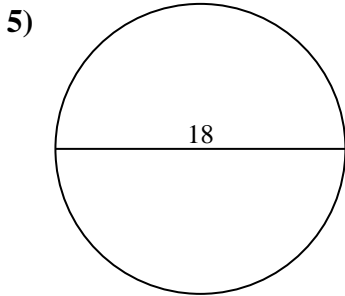
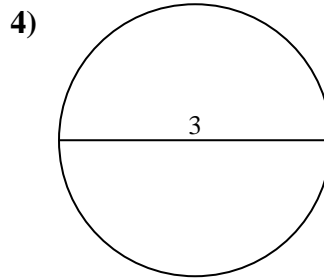
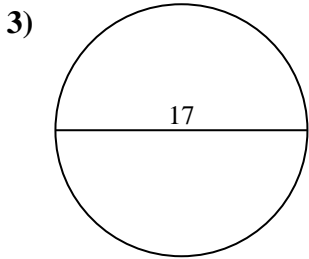
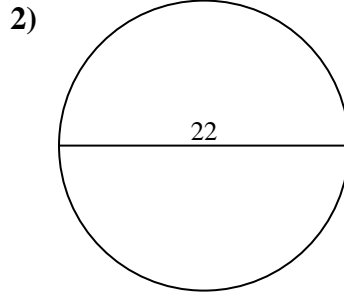
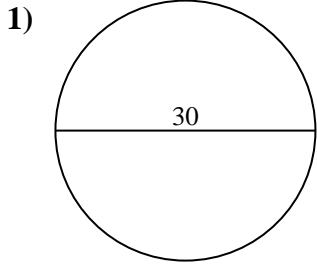


10)





Find the area of each circle. Circles are not to scale.

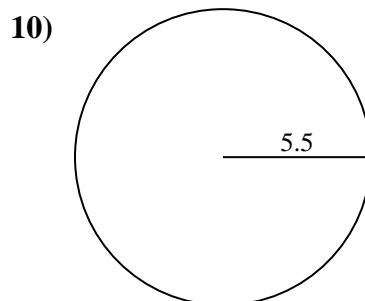
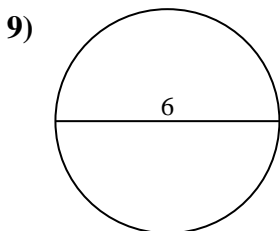
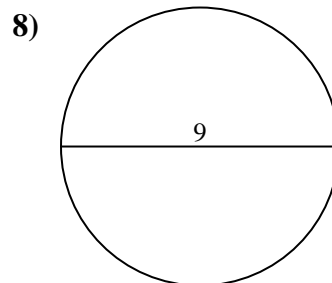
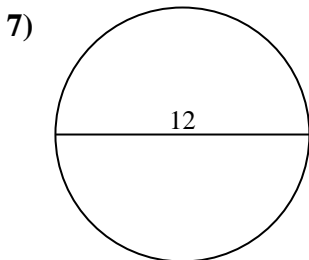
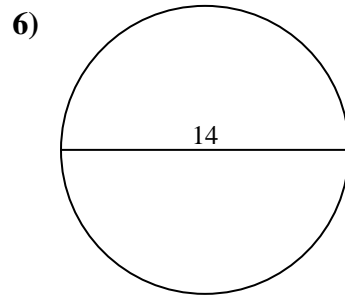
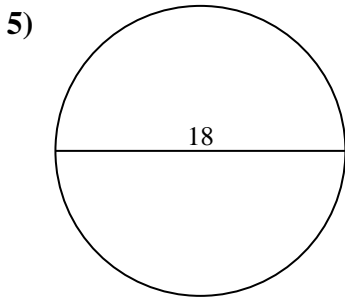
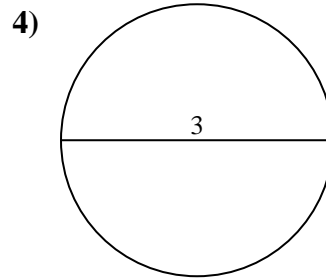
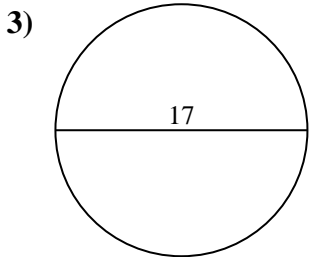
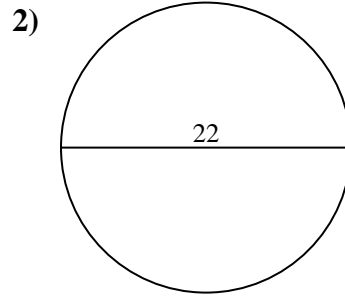
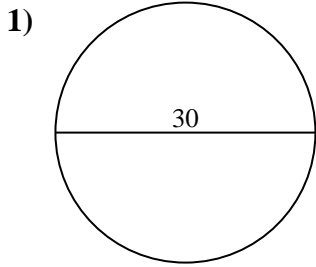


Answers

- 1. _____
- 2. _____
- 3. _____
- 4. _____
- 5. _____
- 6. _____
- 7. _____
- 8. _____
- 9. _____
- 10. _____



Find the area of each circle. Circles are not to scale.

Answers

1. **706.86 cm²**
2. **380.13 cm²**
3. **226.98 cm²**
4. **7.07 cm²**
5. **254.47 cm²**
6. **153.94 cm²**
7. **113.1 cm²**
8. **63.62 cm²**
9. **28.27 cm²**
10. **95.03 cm²**



Find the area of each circle. Circles are not to scale.

Answers

380.13 cm²

7.07 cm²

706.86 cm²

113.1 cm²

226.98 cm²

28.27 cm²

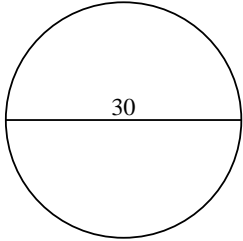
95.03 cm²

254.47 cm²

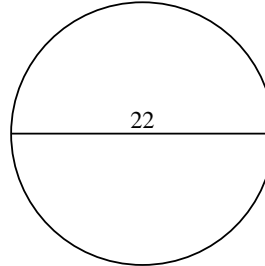
63.62 cm²

153.94 cm²

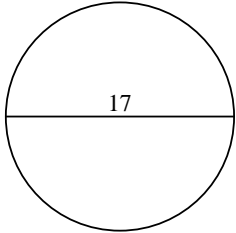
1)



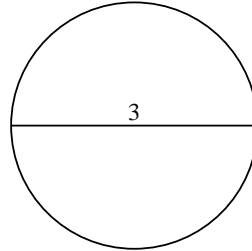
2)



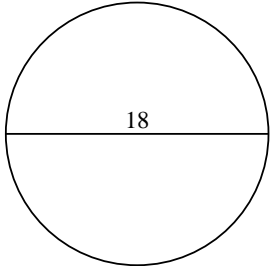
3)



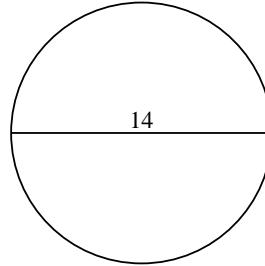
4)



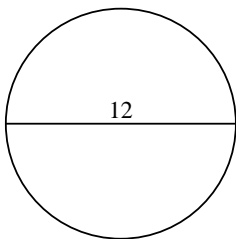
5)



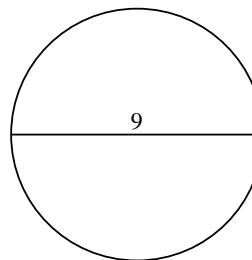
6)



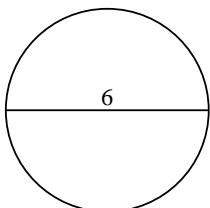
7)



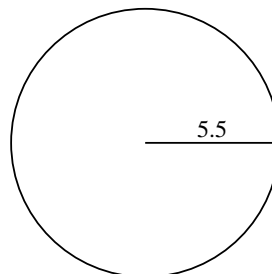
8)



9)



10)



1. _____

2. _____

3. _____

4. _____

5. _____

6. _____

7. _____

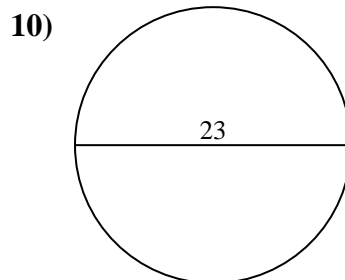
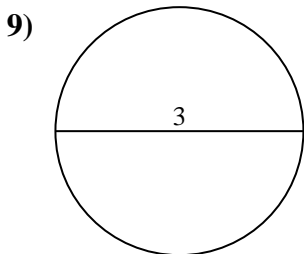
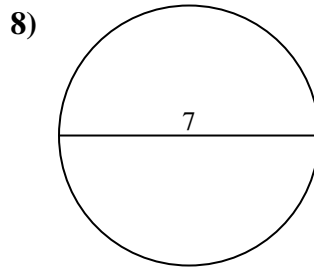
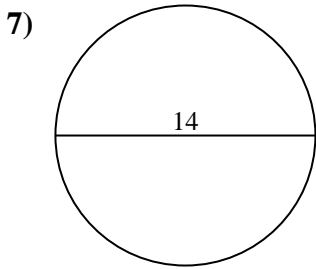
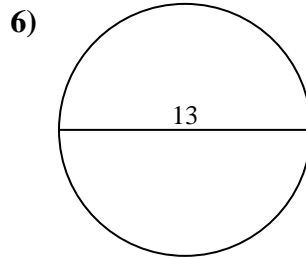
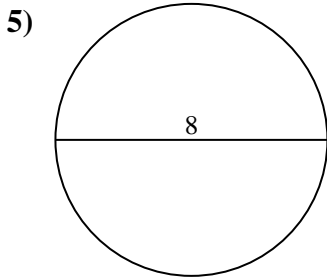
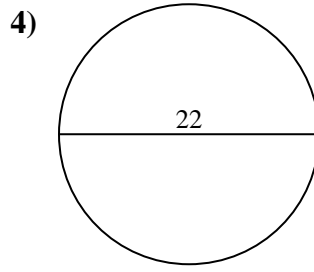
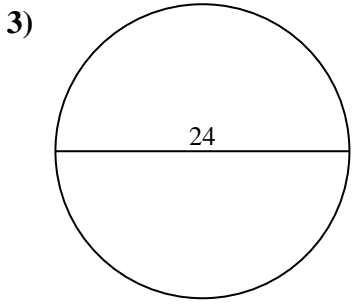
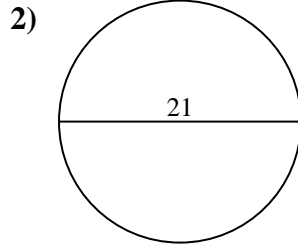
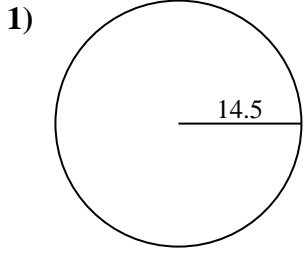
8. _____

9. _____

10. _____



Find the area of each circle. Circles are not to scale.

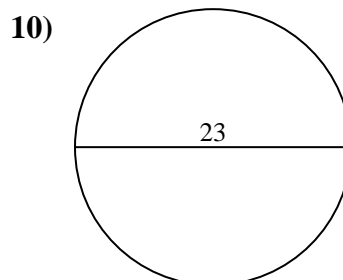
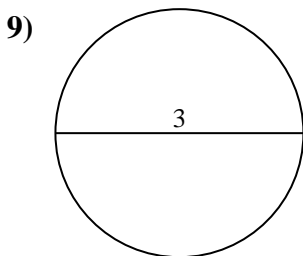
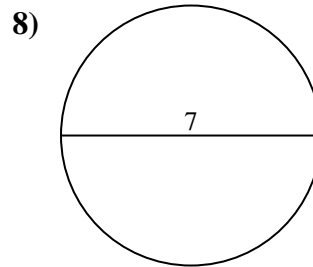
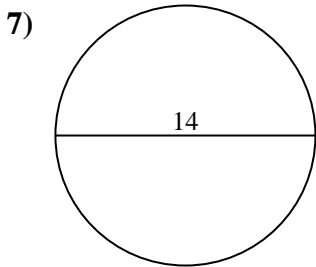
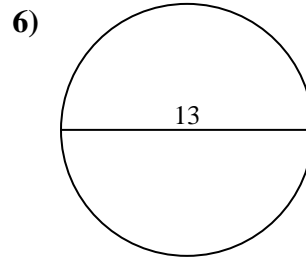
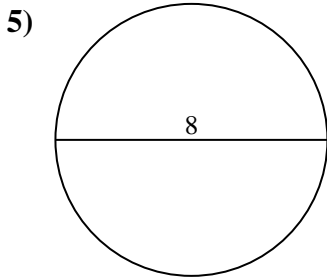
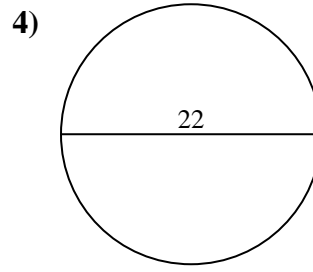
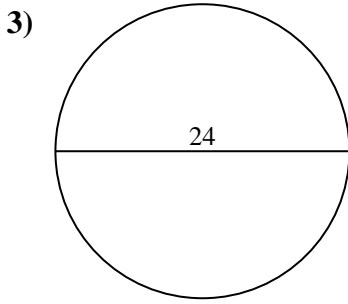
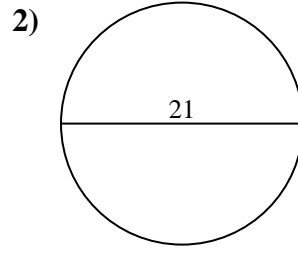
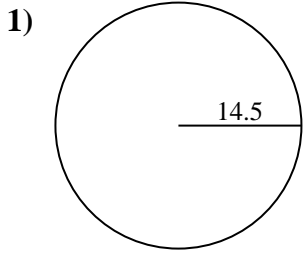


Answers

- 1. _____
- 2. _____
- 3. _____
- 4. _____
- 5. _____
- 6. _____
- 7. _____
- 8. _____
- 9. _____
- 10. _____



Find the area of each circle. Circles are not to scale.

**Answers**

1. **660.52 cm²**
2. **346.36 cm²**
3. **452.39 cm²**
4. **380.13 cm²**
5. **50.27 cm²**
6. **132.73 cm²**
7. **153.94 cm²**
8. **38.48 cm²**
9. **7.07 cm²**
10. **415.48 cm²**

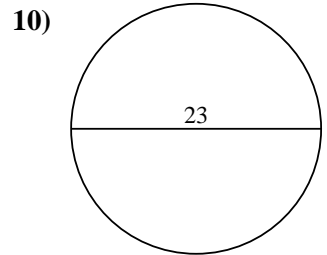
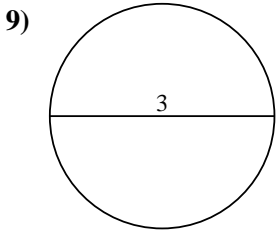
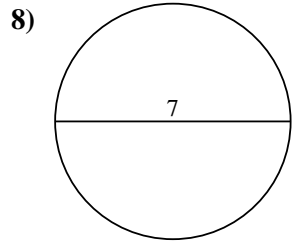
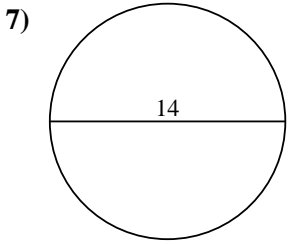
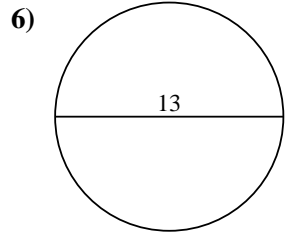
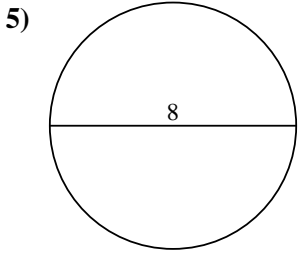
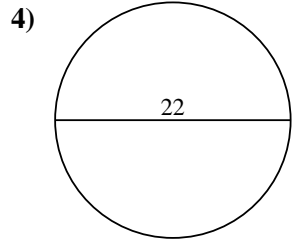
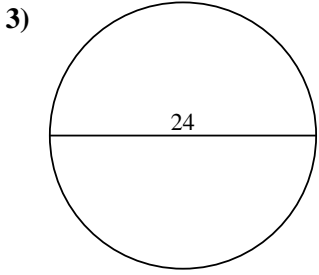
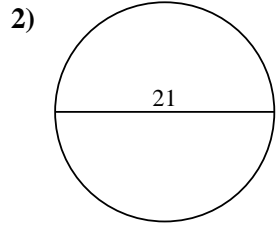
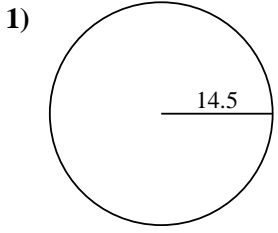


Find the area of each circle. Circles are not to scale.

Answers

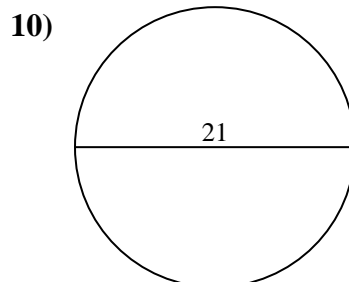
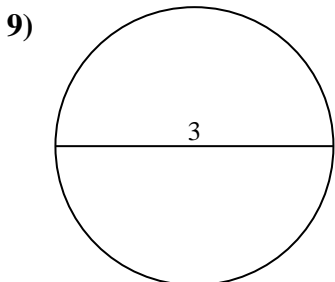
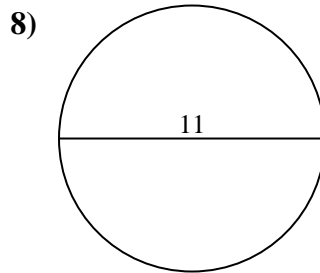
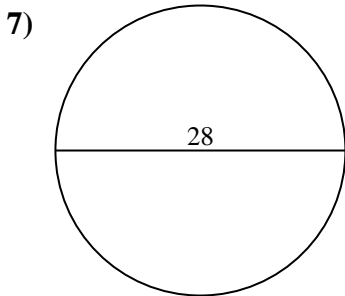
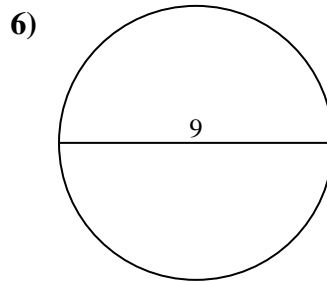
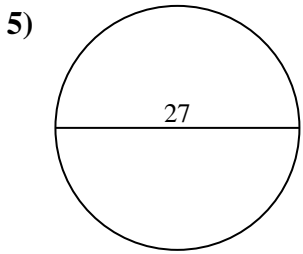
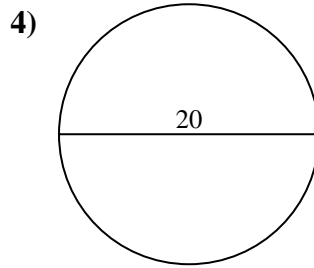
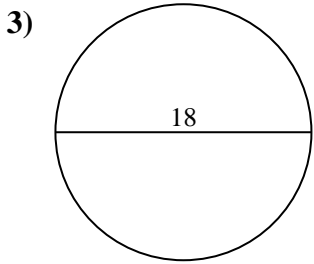
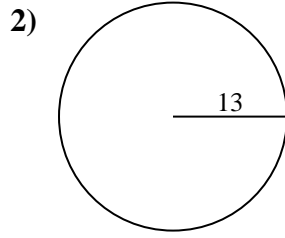
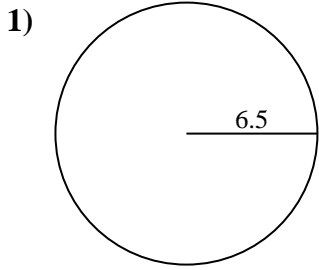
7.07 cm ²	132.73 cm ²	660.52 cm ²	380.13 cm ²	415.48 cm ²
50.27 cm ²	346.36 cm ²	452.39 cm ²	38.48 cm ²	153.94 cm ²

- 1. _____
- 2. _____
- 3. _____
- 4. _____
- 5. _____
- 6. _____
- 7. _____
- 8. _____
- 9. _____
- 10. _____





Find the area of each circle. Circles are not to scale.

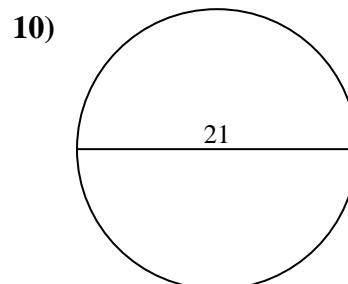
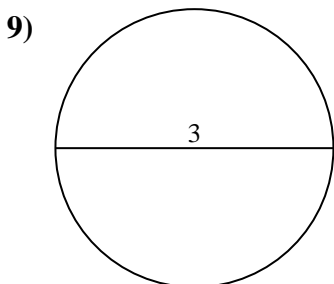
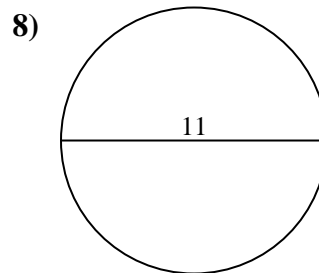
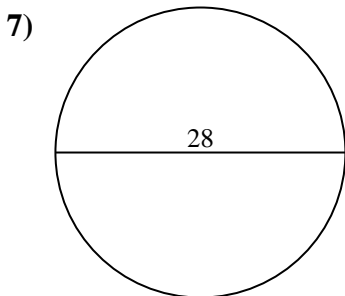
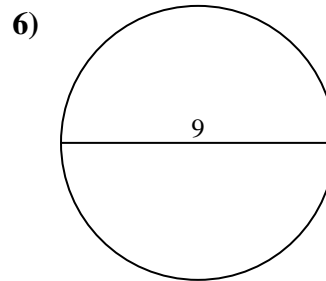
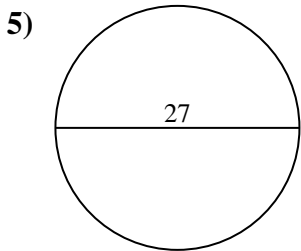
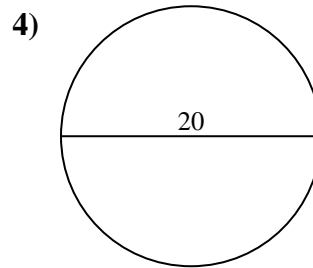
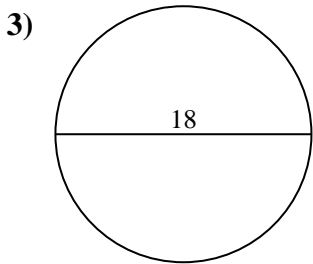
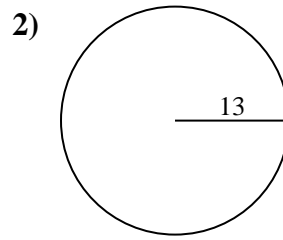
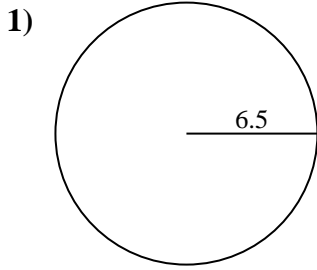


Answers

- 1. _____
- 2. _____
- 3. _____
- 4. _____
- 5. _____
- 6. _____
- 7. _____
- 8. _____
- 9. _____
- 10. _____



Find the area of each circle. Circles are not to scale.

**Answers**

1. 132.73 cm²
2. 530.93 cm²
3. 254.47 cm²
4. 314.16 cm²
5. 572.56 cm²
6. 63.62 cm²
7. 615.75 cm²
8. 95.03 cm²
9. 7.07 cm²
10. 346.36 cm²



Find the area of each circle. Circles are not to scale.

63.62 cm²

572.56 cm²

314.16 cm²

530.93 cm²

7.07 cm²

132.73 cm²

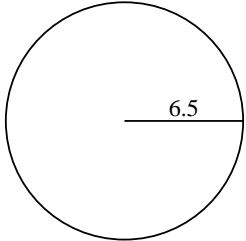
95.03 cm²

346.36 cm²

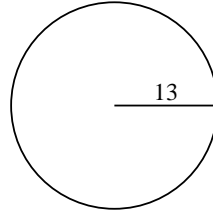
254.47 cm²

615.75 cm²

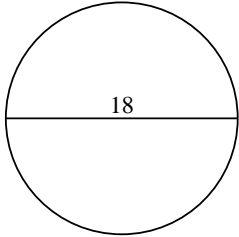
1)



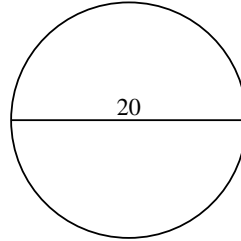
2)



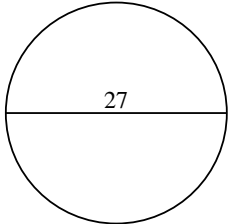
3)



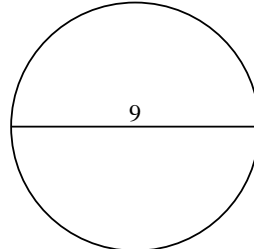
4)



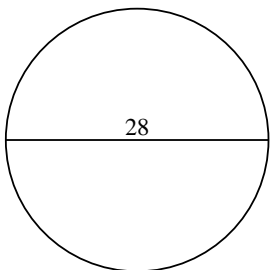
5)



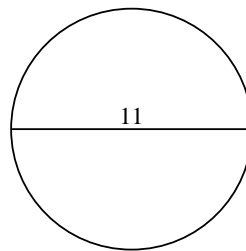
6)



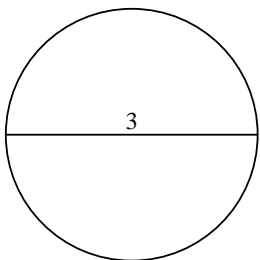
7)



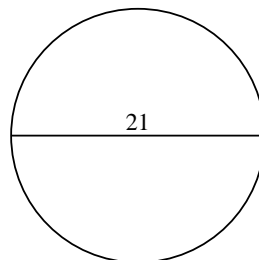
8)



9)



10)



Answers

1. _____

2. _____

3. _____

4. _____

5. _____

6. _____

7. _____

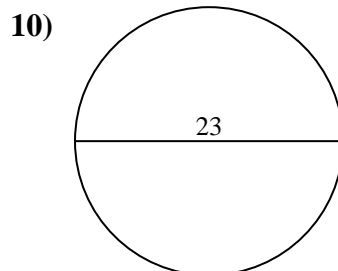
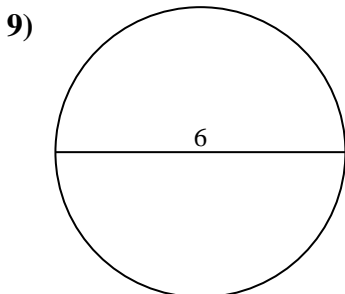
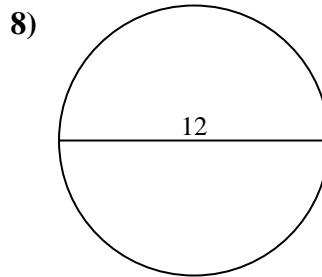
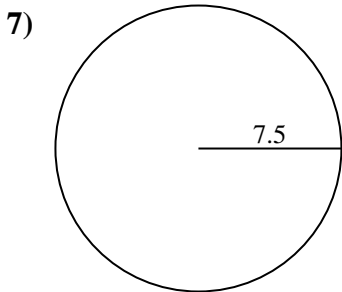
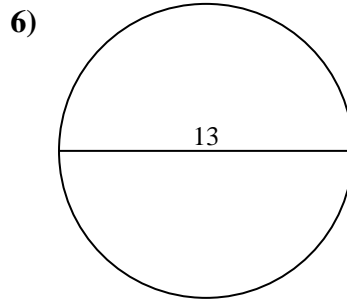
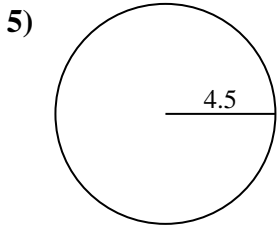
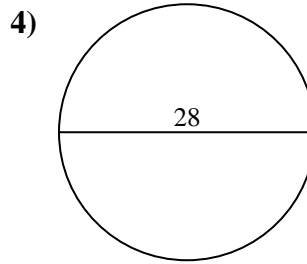
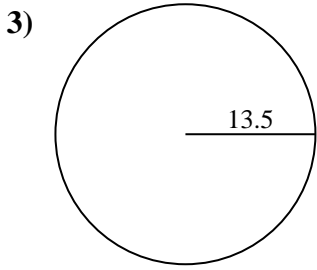
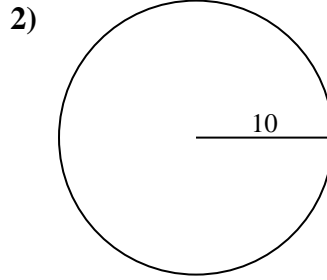
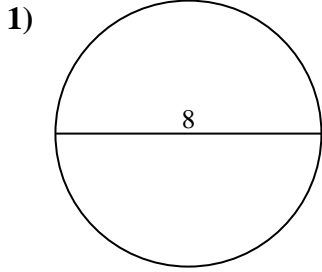
8. _____

9. _____

10. _____



Find the area of each circle. Circles are not to scale.

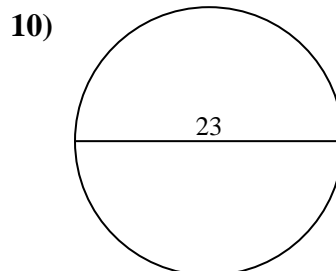
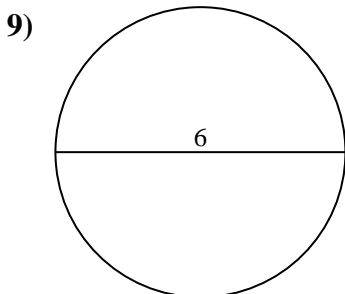
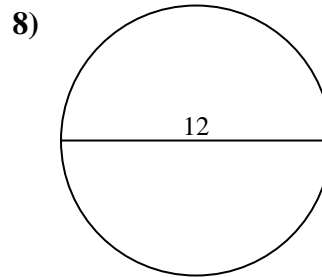
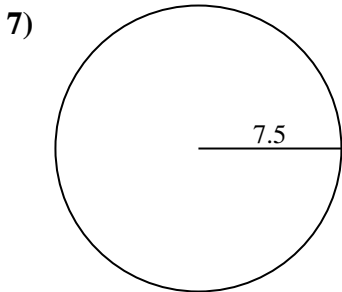
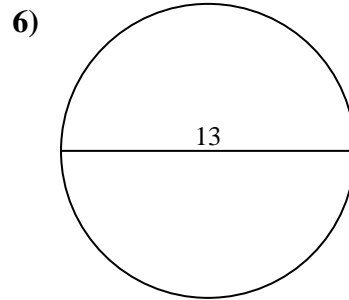
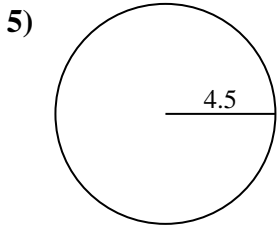
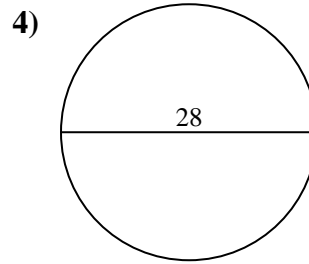
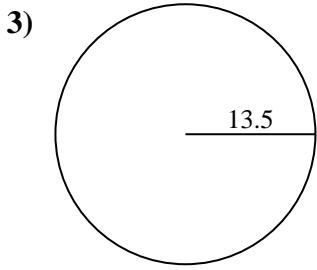
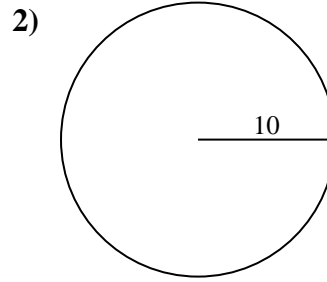
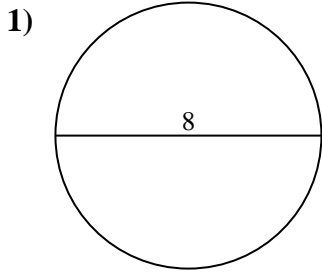


Answers

- 1. _____
- 2. _____
- 3. _____
- 4. _____
- 5. _____
- 6. _____
- 7. _____
- 8. _____
- 9. _____
- 10. _____



Find the area of each circle. Circles are not to scale.

**Answers**

1. 50.27 cm²
2. 314.16 cm²
3. 572.56 cm²
4. 615.75 cm²
5. 63.62 cm²
6. 132.73 cm²
7. 176.71 cm²
8. 113.1 cm²
9. 28.27 cm²
10. 415.48 cm²



Find the area of each circle. Circles are not to scale.

572.56 cm²

113.1 cm²

28.27 cm²

176.71 cm²

314.16 cm²

415.48 cm²

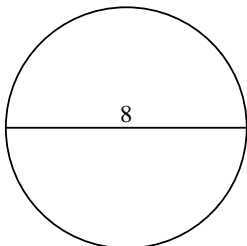
63.62 cm²

615.75 cm²

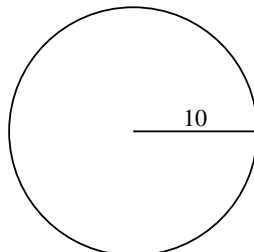
132.73 cm²

50.27 cm²

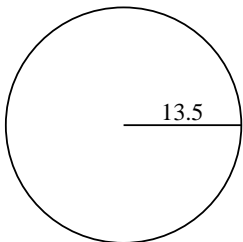
1)



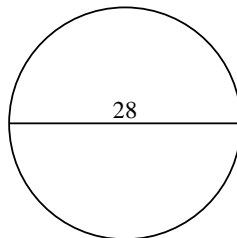
2)



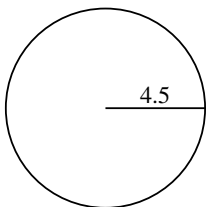
3)



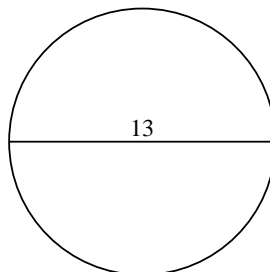
4)



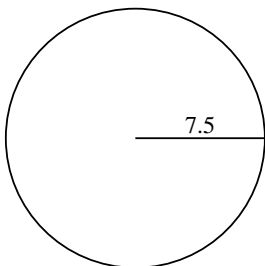
5)



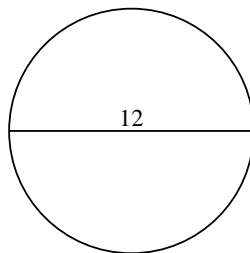
6)



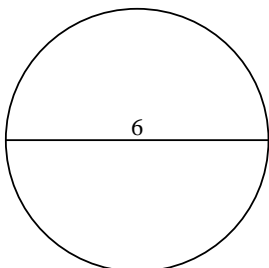
7)



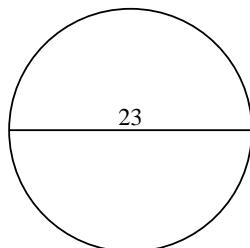
8)



9)



10)



Answers

1. _____

2. _____

3. _____

4. _____

5. _____

6. _____

7. _____

8. _____

9. _____

10. _____