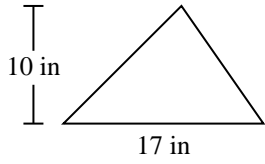


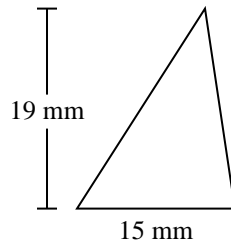


Find the area of each triangle. Units are not to scale.

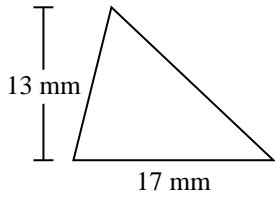
1)



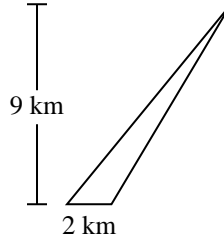
2)



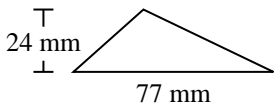
3)



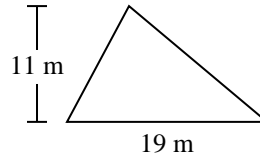
4)



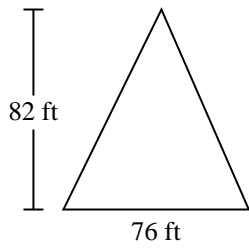
5)



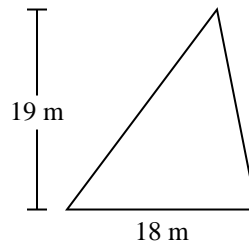
6)



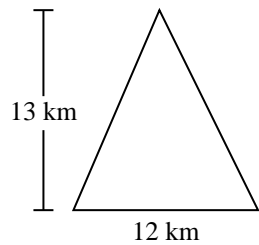
7)



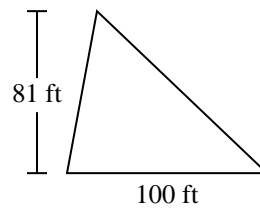
8)



9)



10)



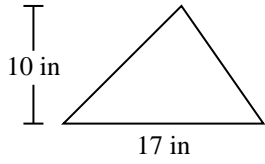
Answers

- 1. _____
- 2. _____
- 3. _____
- 4. _____
- 5. _____
- 6. _____
- 7. _____
- 8. _____
- 9. _____
- 10. _____

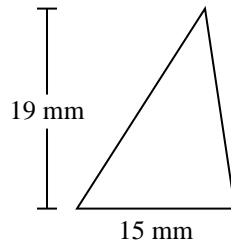


Find the area of each triangle. Units are not to scale.

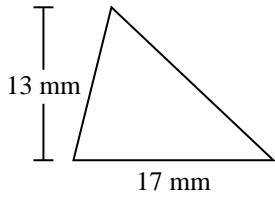
1)



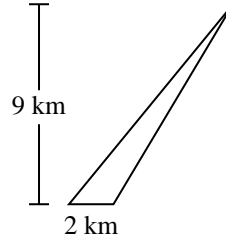
2)



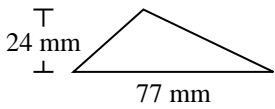
3)



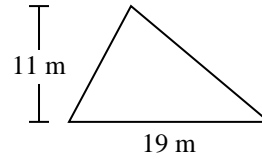
4)



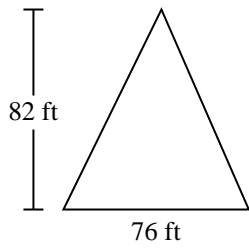
5)



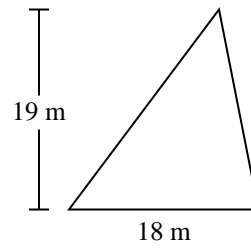
6)



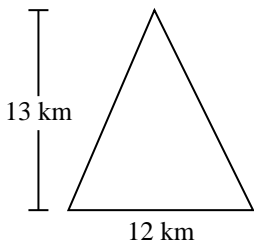
7)



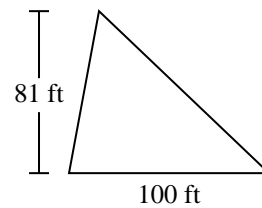
8)



9)



10)



Answers

1. 85 in²

2. 142.5 mm²

3. 110.5 mm²

4. 9 km²

5. 924 mm²

6. 104.5 m²

7. 3,116 ft²

8. 171 m²

9. 78 km²

10. 4,050 ft²



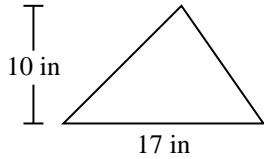
Find the area of each triangle. Units are not to scale.

Answers

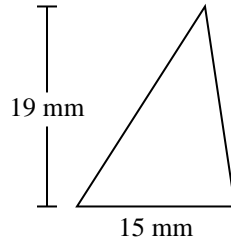
171	9	104.5	924
3,116	110.5	4,050	142.5
78	85		

1. _____
2. _____
3. _____
4. _____
5. _____
6. _____
7. _____
8. _____
9. _____
10. _____

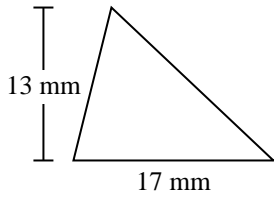
1)



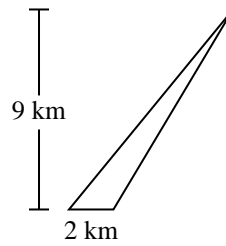
2)



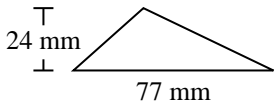
3)



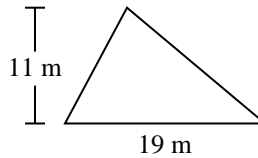
4)



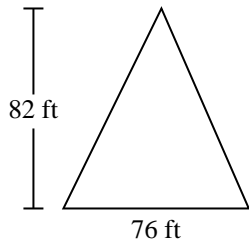
5)



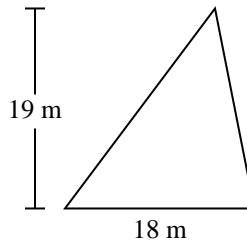
6)



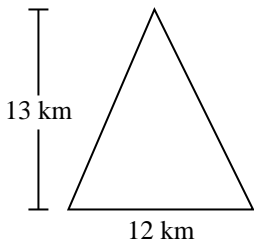
7)



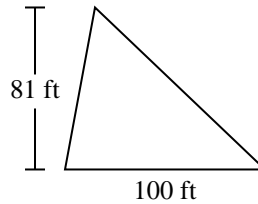
8)



9)

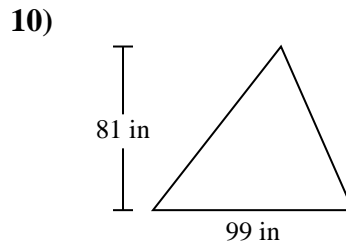
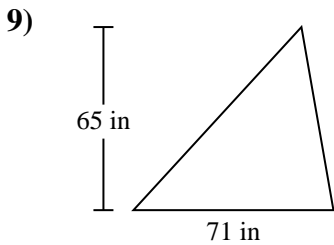
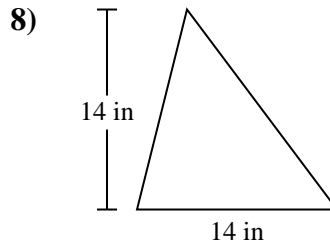
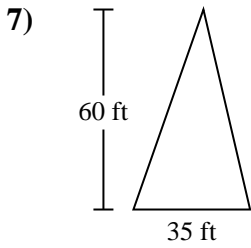
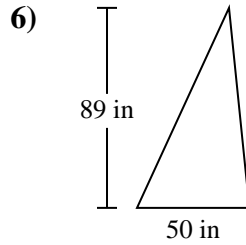
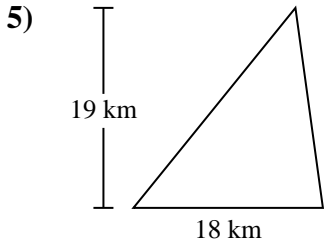
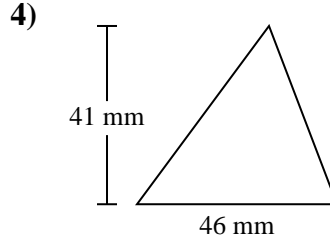
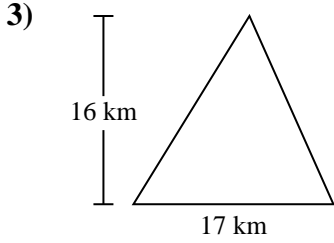
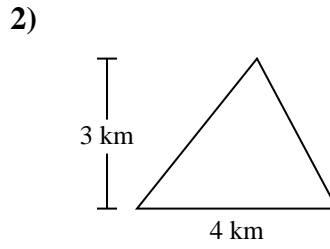
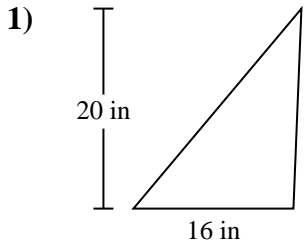


10)





Find the area of each triangle. Units are not to scale.

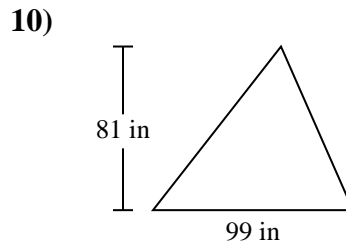
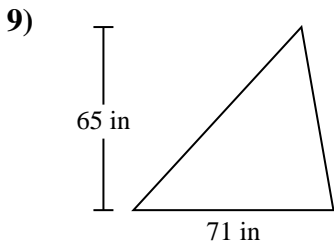
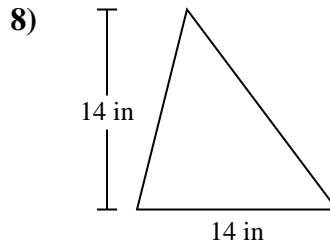
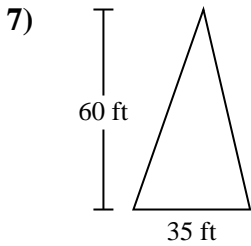
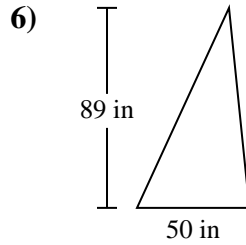
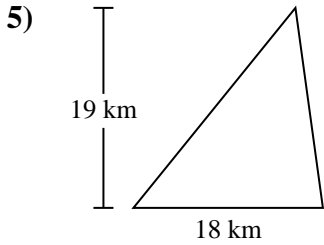
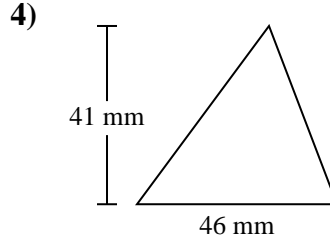
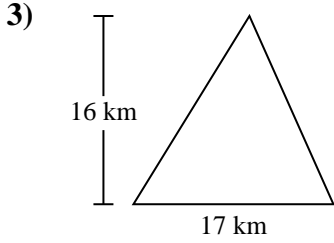
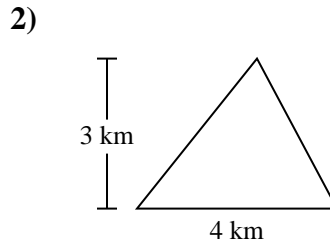
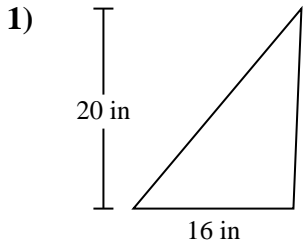


Answers

- 1. _____
- 2. _____
- 3. _____
- 4. _____
- 5. _____
- 6. _____
- 7. _____
- 8. _____
- 9. _____
- 10. _____



Find the area of each triangle. Units are not to scale.



Answers

1. 160 in²
2. 6 km²
3. 136 km²
4. 943 mm²
5. 171 km²
6. 2,225 in²
7. 1,050 ft²
8. 98 in²
9. 2,307.5 in²
10. 4,009.5 in²

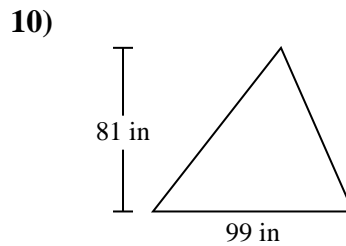
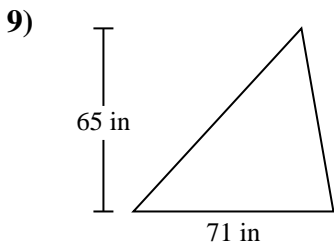
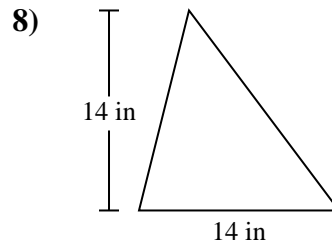
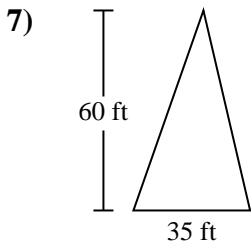
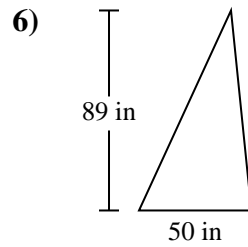
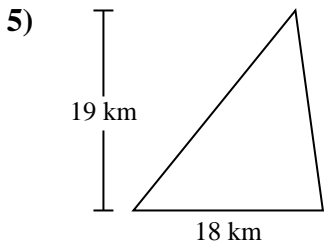
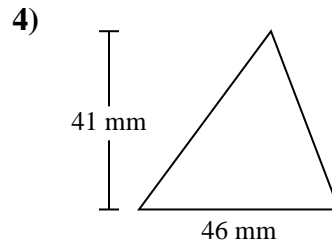
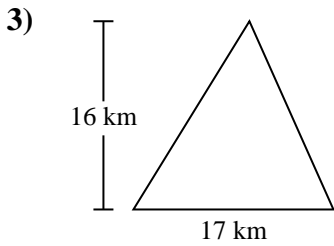
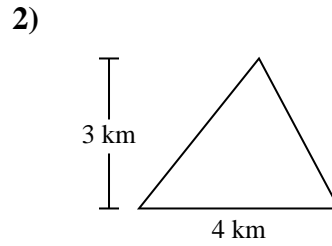
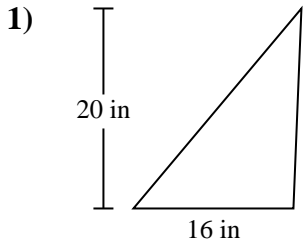


Find the area of each triangle. Units are not to scale.

Answers

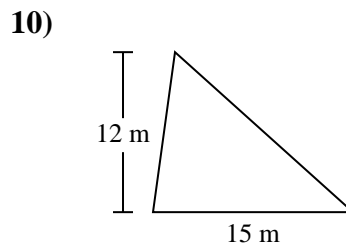
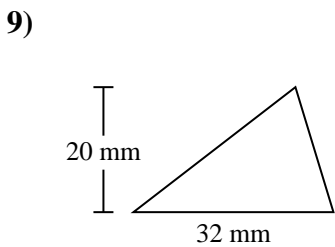
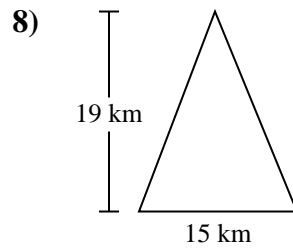
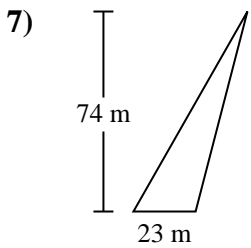
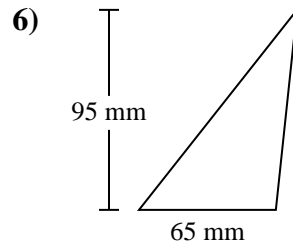
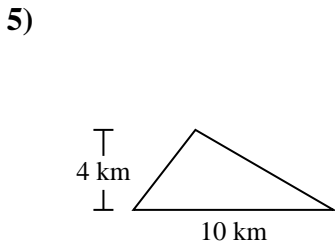
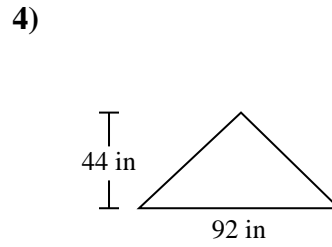
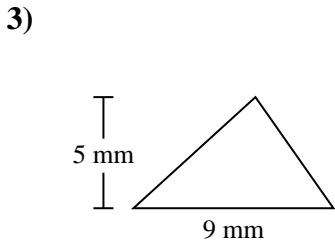
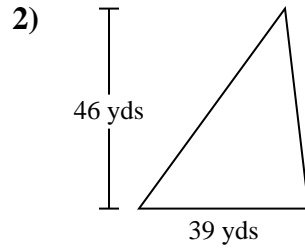
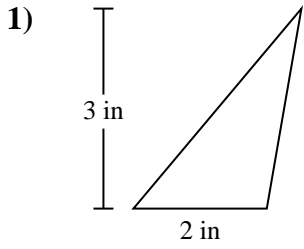
98	160	2,307.5	171
136	6	4,009.5	943
1,050	2,225		

1. _____
2. _____
3. _____
4. _____
5. _____
6. _____
7. _____
8. _____
9. _____
10. _____





Find the area of each triangle. Units are not to scale.

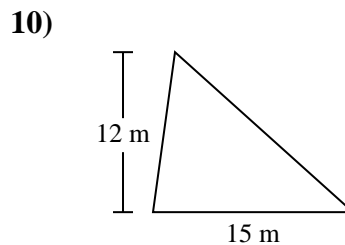
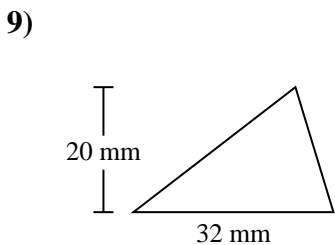
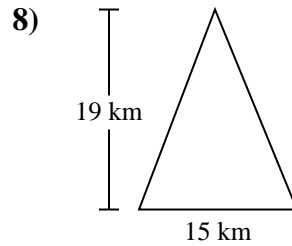
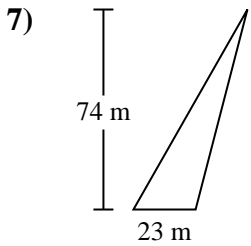
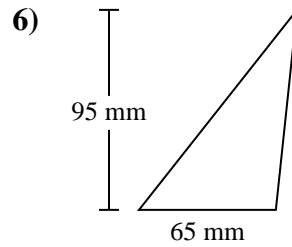
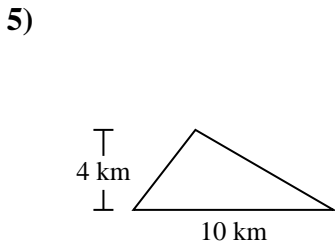
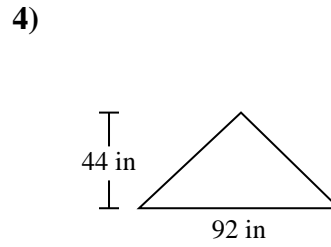
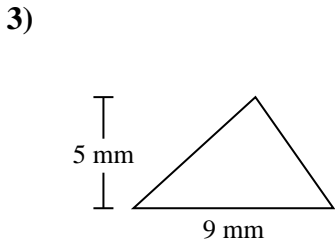
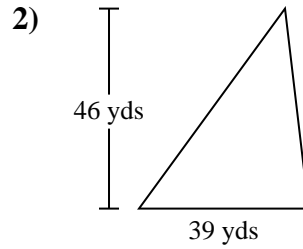
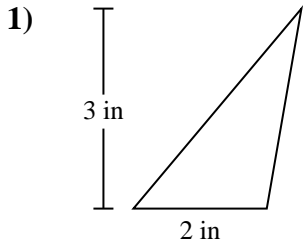


Answers

- 1. _____
- 2. _____
- 3. _____
- 4. _____
- 5. _____
- 6. _____
- 7. _____
- 8. _____
- 9. _____
- 10. _____



Find the area of each triangle. Units are not to scale.



Answers

1. 3 in²

2. 897 yds²

3. 22.5 mm²

4. 2,024 in²

5. 20 km²

6. 3,087.5 mm²

7. 851 m²

8. 142.5 km²

9. 320 mm²

10. 90 m²

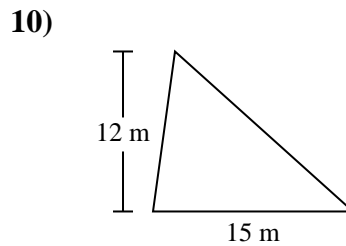
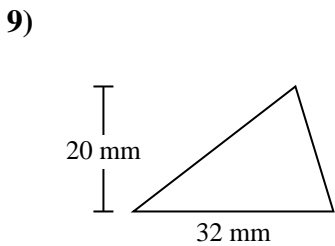
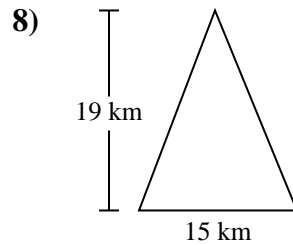
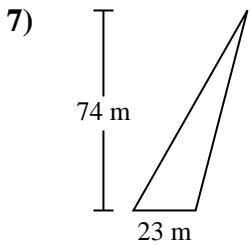
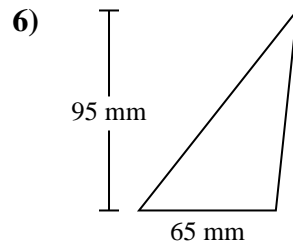
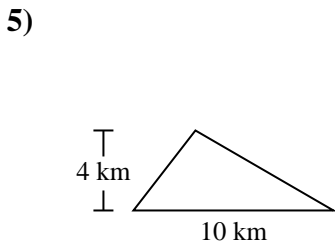
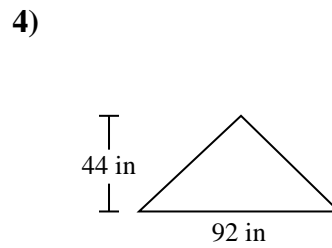
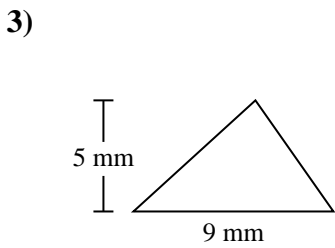
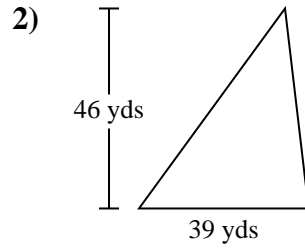
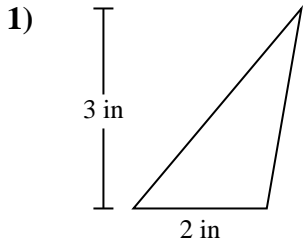


Find the area of each triangle. Units are not to scale.

22.5	142.5	20	90
2,024	3,087.5	320	851
897	3		

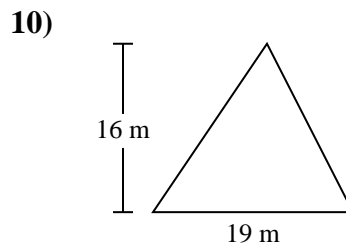
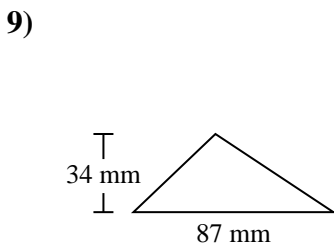
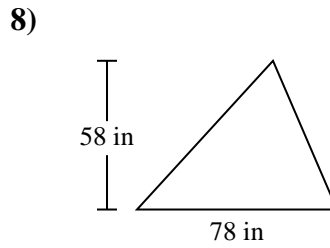
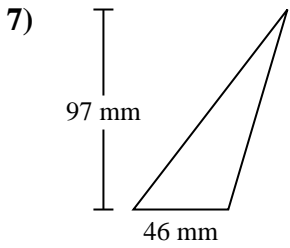
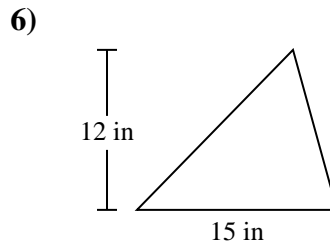
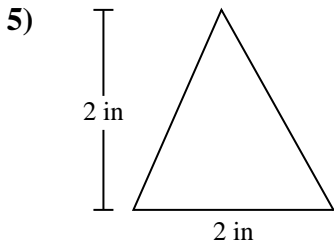
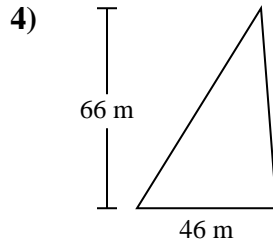
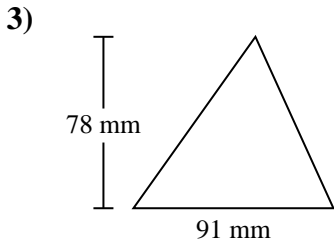
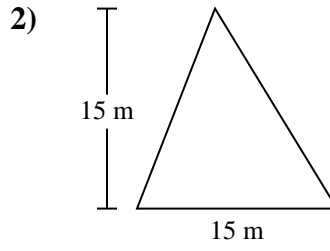
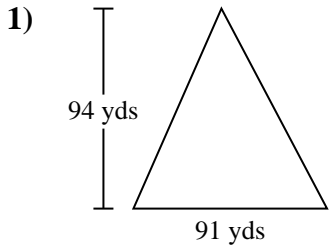
Answers

1. _____
2. _____
3. _____
4. _____
5. _____
6. _____
7. _____
8. _____
9. _____
10. _____





Find the area of each triangle. Units are not to scale.

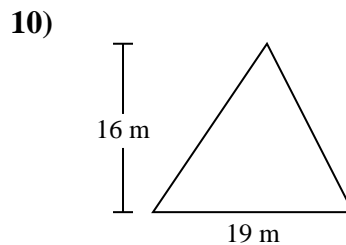
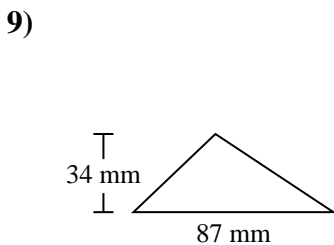
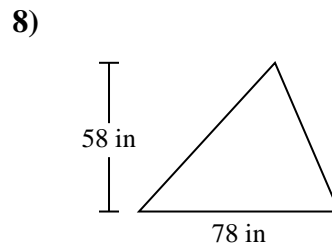
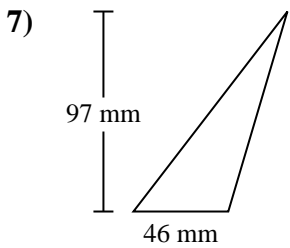
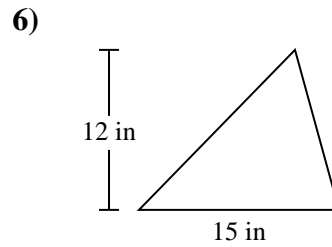
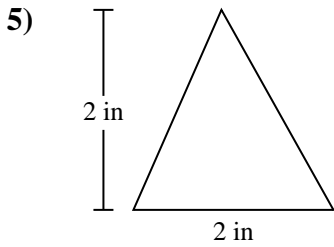
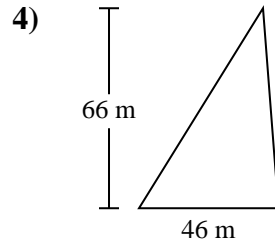
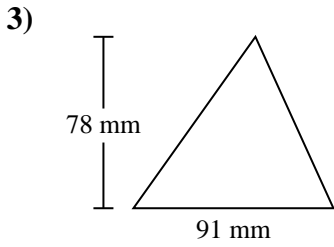
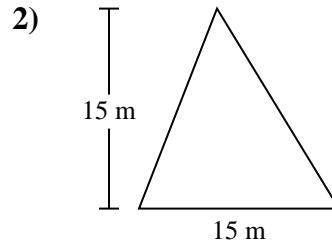
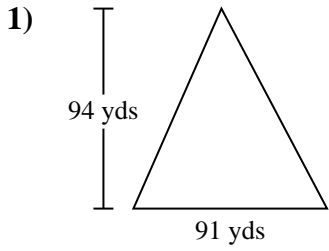


Answers

- 1. _____
- 2. _____
- 3. _____
- 4. _____
- 5. _____
- 6. _____
- 7. _____
- 8. _____
- 9. _____
- 10. _____



Find the area of each triangle. Units are not to scale.

**Answers**

1. **4,277 yds²**

2. **112.5 m²**

3. **3,549 mm²**

4. **1,518 m²**

5. **2 in²**

6. **90 in²**

7. **2,231 mm²**

8. **2,262 in²**

9. **1,479 mm²**

10. **152 m²**

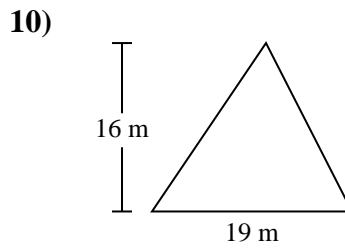
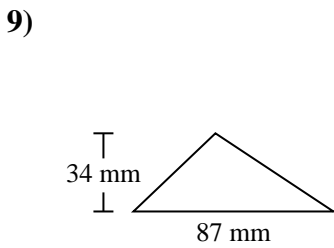
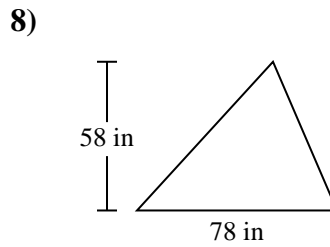
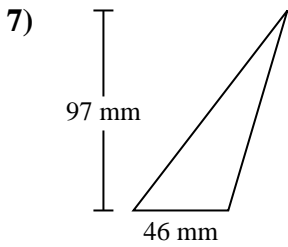
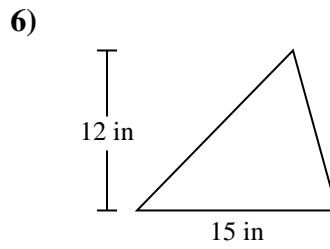
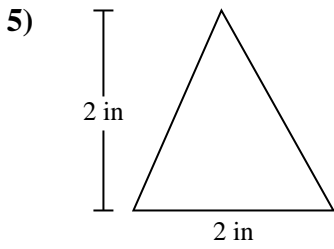
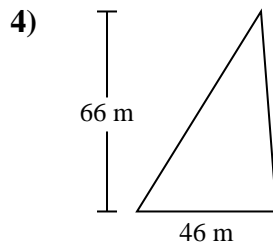
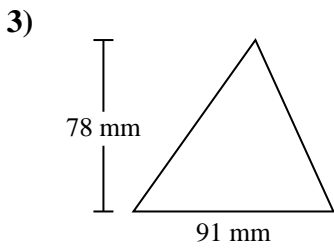
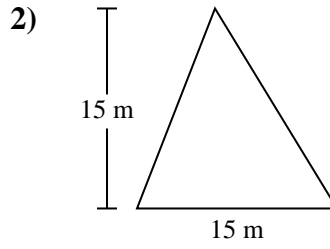
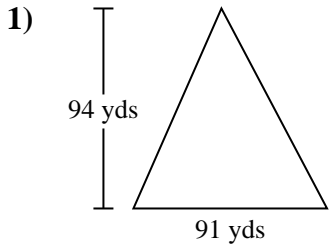


Find the area of each triangle. Units are not to scale.

Answers

3,549	1,479	2,262	90
2	152	2,231	1,518
112.5	4,277		

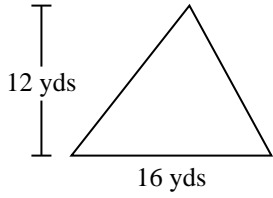
1. _____
2. _____
3. _____
4. _____
5. _____
6. _____
7. _____
8. _____
9. _____
10. _____



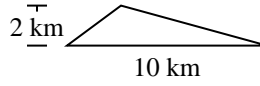


Find the area of each triangle. Units are not to scale.

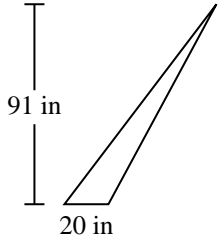
1)



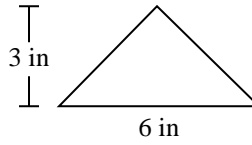
2)



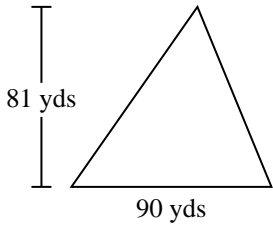
3)



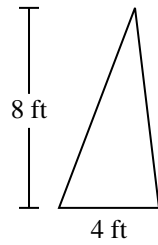
4)



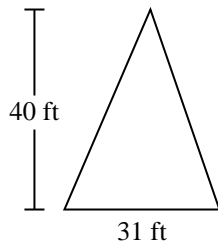
5)



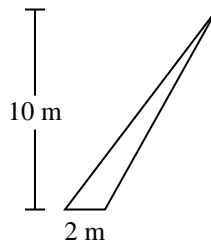
6)



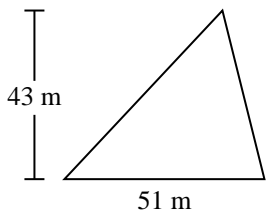
7)



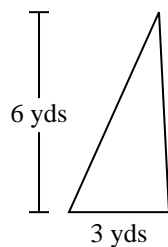
8)



9)



10)



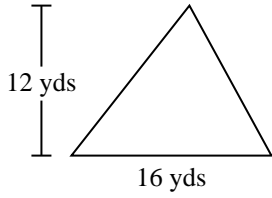
Answers

- 1. _____
- 2. _____
- 3. _____
- 4. _____
- 5. _____
- 6. _____
- 7. _____
- 8. _____
- 9. _____
- 10. _____

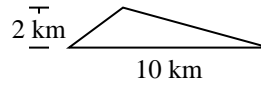


Find the area of each triangle. Units are not to scale.

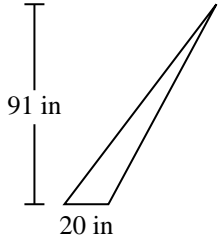
1)



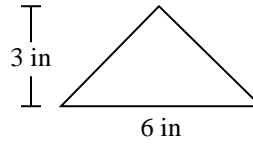
2)



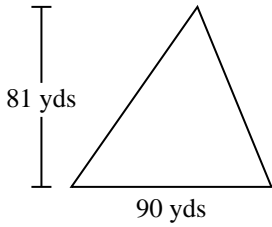
3)



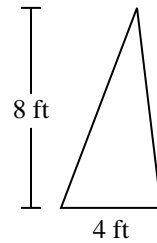
4)



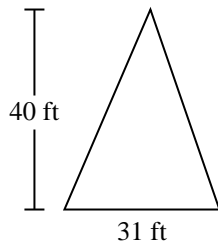
5)



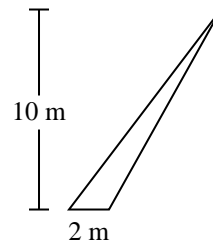
6)



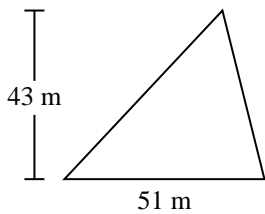
7)



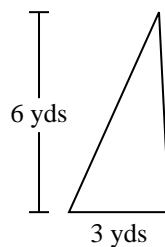
8)



9)



10)



Answers

1. 96 yds²

2. 10 km²

3. 910 in²

4. 9 in²

5. 3,645 yds²

6. 16 ft²

7. 620 ft²

8. 10 m²

9. 1,096.5 m²

10. 9 yds²



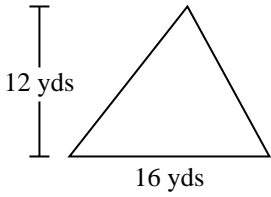
Find the area of each triangle. Units are not to scale.

Answers

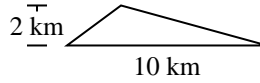
16	96	1,096.5	910
10	620	10	3,645
9	9		

1. _____
2. _____
3. _____
4. _____
5. _____
6. _____
7. _____
8. _____
9. _____
10. _____

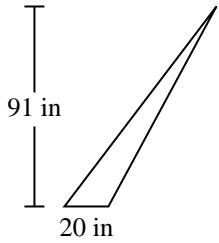
1)



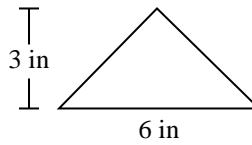
2)



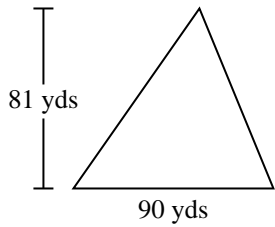
3)



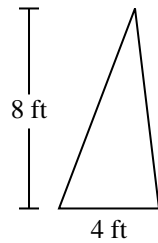
4)



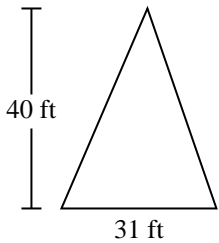
5)



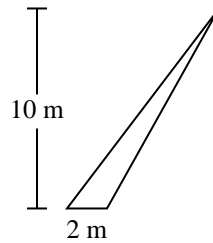
6)



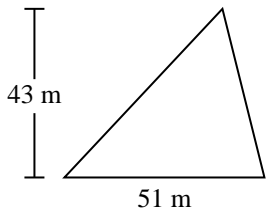
7)



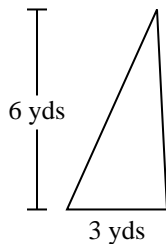
8)



9)



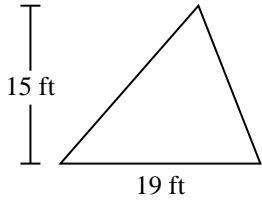
10)



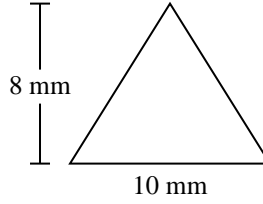


Find the area of each triangle. Units are not to scale.

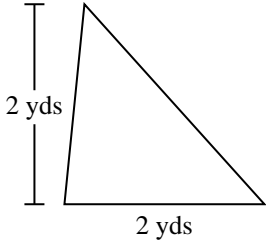
1)



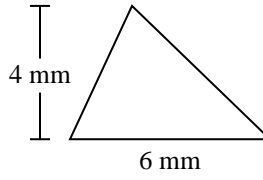
2)



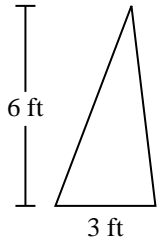
3)



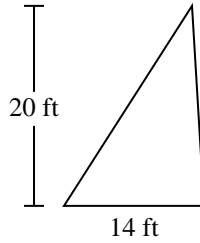
4)



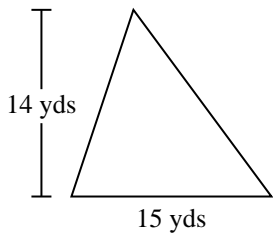
5)



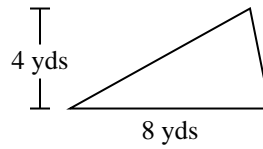
6)



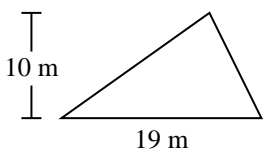
7)



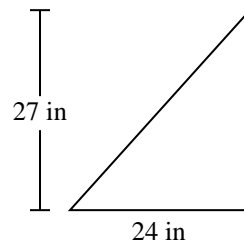
8)



9)



10)



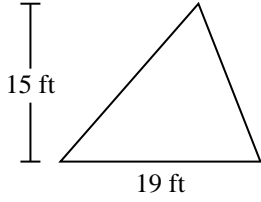
Answers

- 1. _____
- 2. _____
- 3. _____
- 4. _____
- 5. _____
- 6. _____
- 7. _____
- 8. _____
- 9. _____
- 10. _____

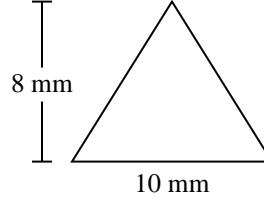


Find the area of each triangle. Units are not to scale.

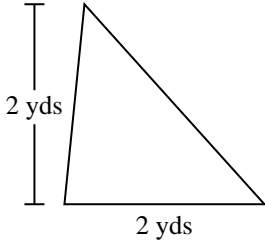
1)



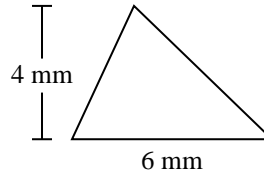
2)



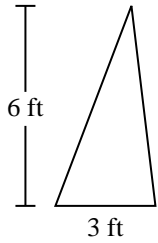
3)



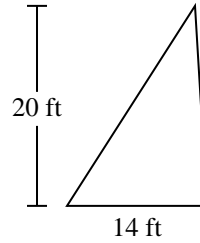
4)



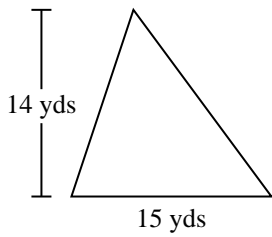
5)



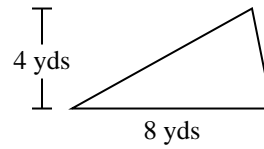
6)



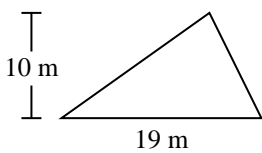
7)



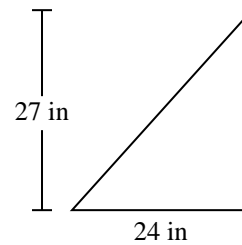
8)



9)



10)



Answers

1. 142.5 ft²

2. 40 mm²

3. 2 yds²

4. 12 mm²

5. 9 ft²

6. 140 ft²

7. 105 yds²

8. 16 yds²

9. 95 m²

10. 324 in²



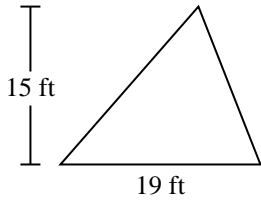
Find the area of each triangle. Units are not to scale.

Answers

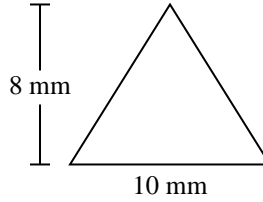
40	9	142.5	324
140	95	105	12
2	16		

1. _____
2. _____
3. _____
4. _____
5. _____
6. _____
7. _____
8. _____
9. _____
10. _____

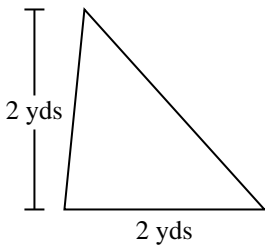
1)



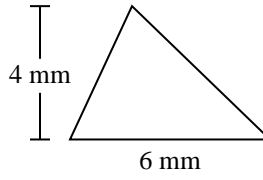
2)



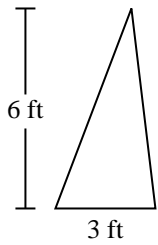
3)



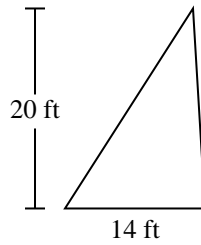
4)



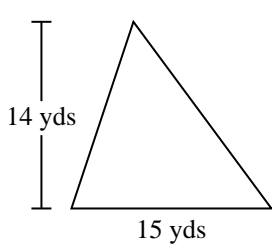
5)



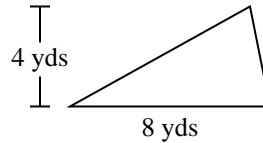
6)



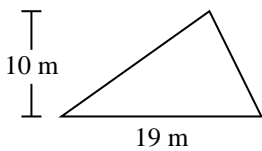
7)



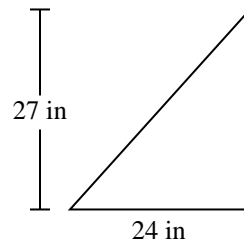
8)



9)



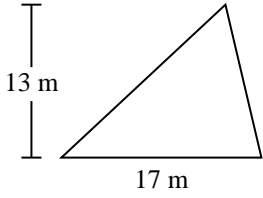
10)



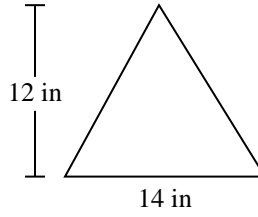


Find the area of each triangle. Units are not to scale.

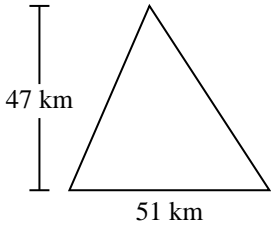
1)



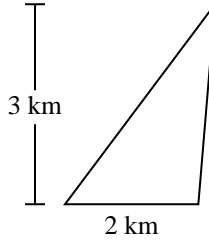
2)



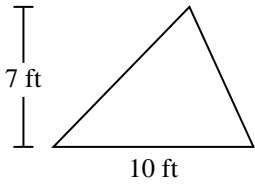
3)



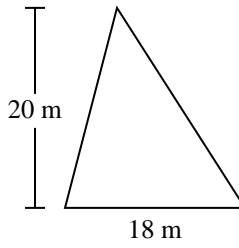
4)



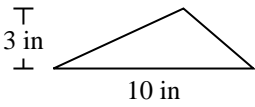
5)



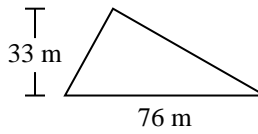
6)



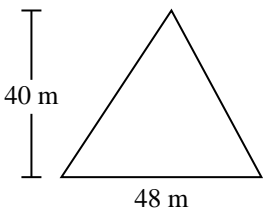
7)



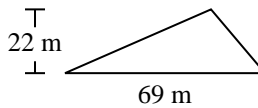
8)



9)



10)



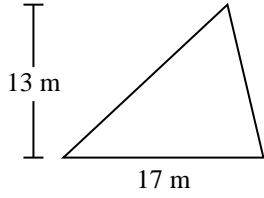
Answers

1. _____
2. _____
3. _____
4. _____
5. _____
6. _____
7. _____
8. _____
9. _____
10. _____

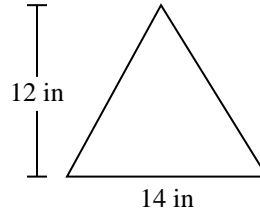


Find the area of each triangle. Units are not to scale.

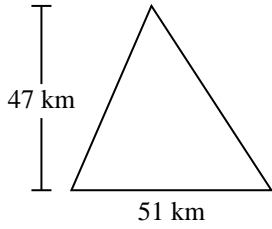
1)



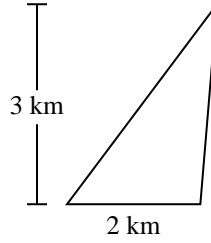
2)



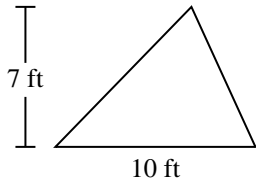
3)



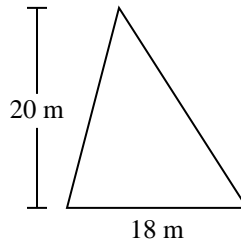
4)



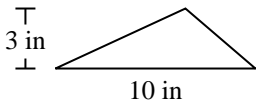
5)



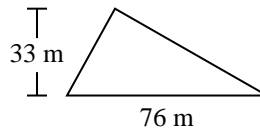
6)



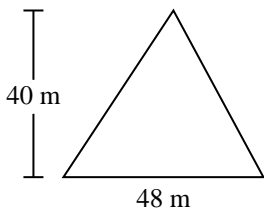
7)



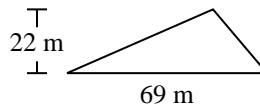
8)



9)



10)



Answers

1. 110.5 m²

2. 84 in²

3. 1,198.5 km²

4. 3 km²

5. 35 ft²

6. 180 m²

7. 15 in²

8. 1,254 m²

9. 960 m²

10. 759 m²



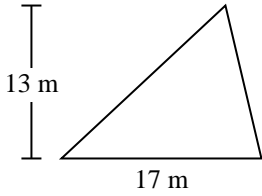
Find the area of each triangle. Units are not to scale.

Answers

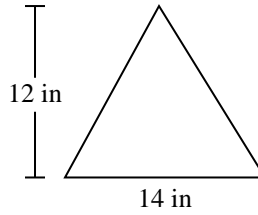
3	960	1,198.5	1,254
84	759	15	180
35	110.5		

1. _____
2. _____
3. _____
4. _____
5. _____
6. _____
7. _____
8. _____
9. _____
10. _____

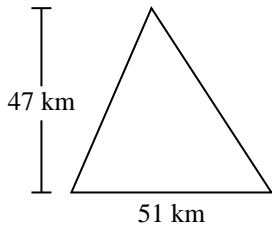
1)



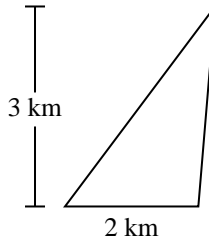
2)



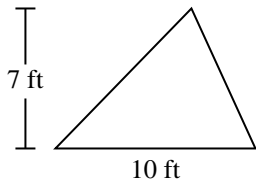
3)



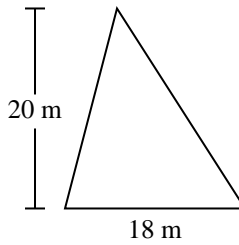
4)



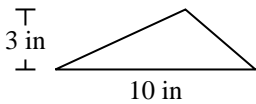
5)



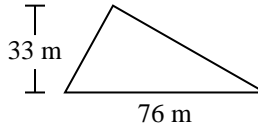
6)



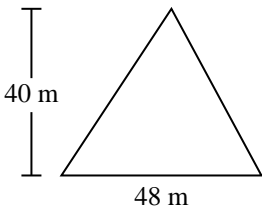
7)



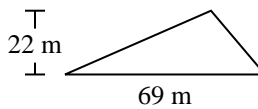
8)



9)



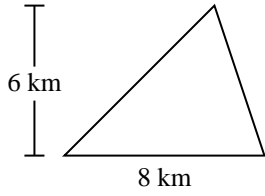
10)



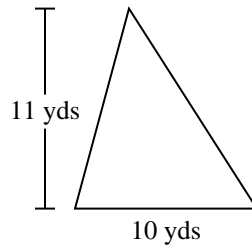


Find the area of each triangle. Units are not to scale.

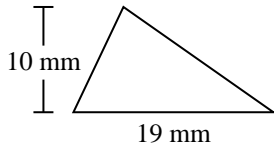
1)



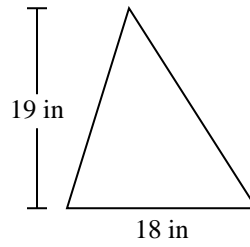
2)



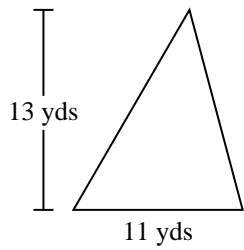
3)



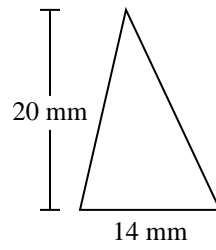
4)



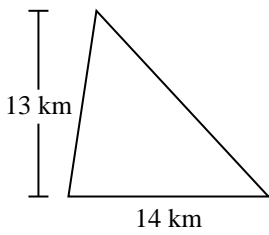
5)



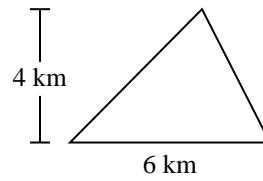
6)



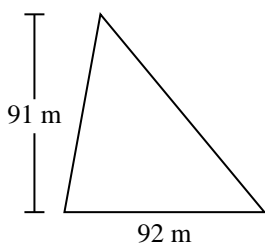
7)



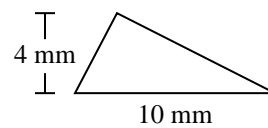
8)



9)



10)



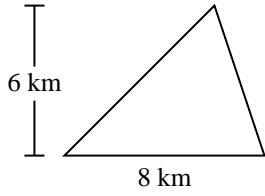
Answers

- 1. _____
- 2. _____
- 3. _____
- 4. _____
- 5. _____
- 6. _____
- 7. _____
- 8. _____
- 9. _____
- 10. _____

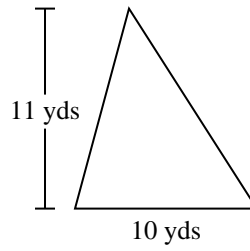


Find the area of each triangle. Units are not to scale.

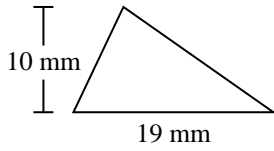
1)



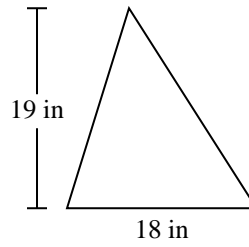
2)



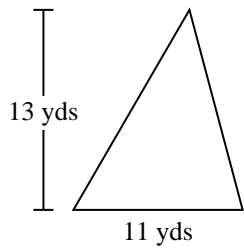
3)



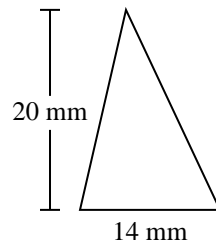
4)



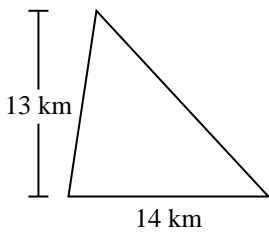
5)



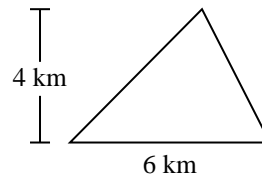
6)



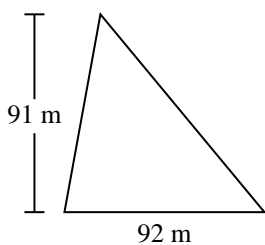
7)



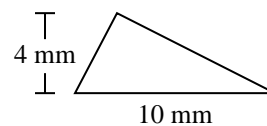
8)



9)



10)



Answers

1. 24 km²

2. 55 yds²

3. 95 mm²

4. 171 in²

5. 71.5 yds²

6. 140 mm²

7. 91 km²

8. 12 km²

9. 4,186 m²

10. 20 mm²



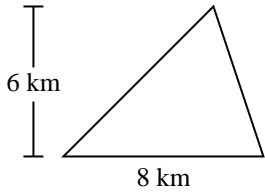
Find the area of each triangle. Units are not to scale.

Answers

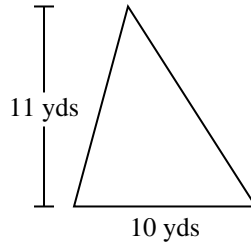
55	140	12	4,186
91	20	24	95
171	71.5		

1. _____
2. _____
3. _____
4. _____
5. _____
6. _____
7. _____
8. _____
9. _____
10. _____

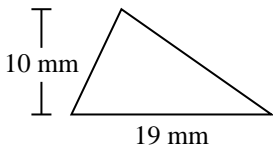
1)



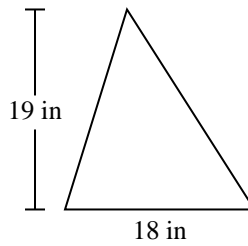
2)



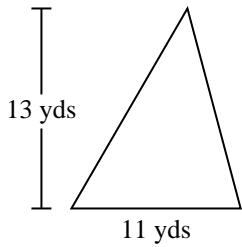
3)



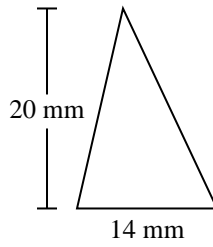
4)



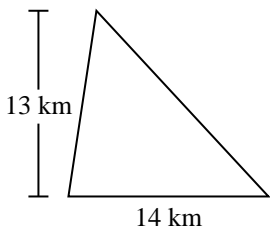
5)



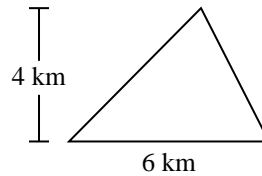
6)



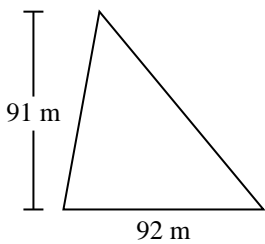
7)



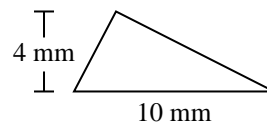
8)



9)



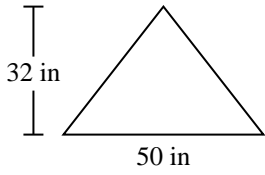
10)



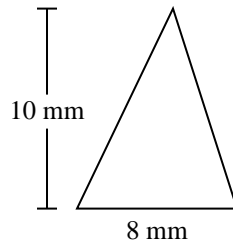


Find the area of each triangle. Units are not to scale.

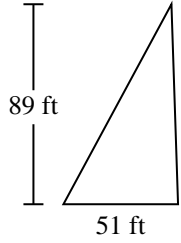
1)



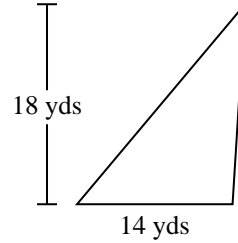
2)



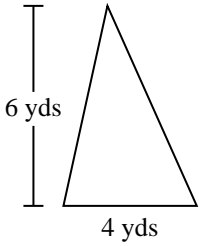
3)



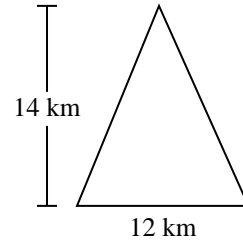
4)



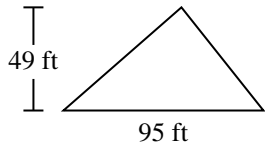
5)



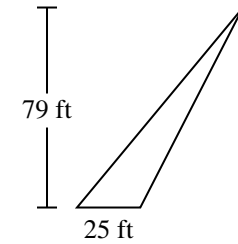
6)



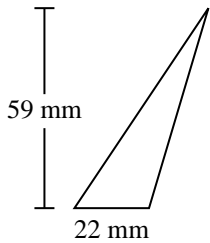
7)



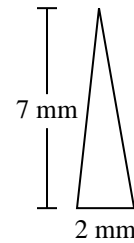
8)



9)



10)



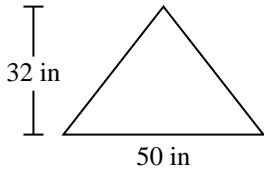
Answers

- 1. _____
- 2. _____
- 3. _____
- 4. _____
- 5. _____
- 6. _____
- 7. _____
- 8. _____
- 9. _____
- 10. _____

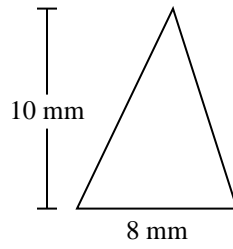


Find the area of each triangle. Units are not to scale.

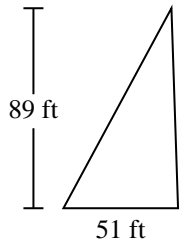
1)



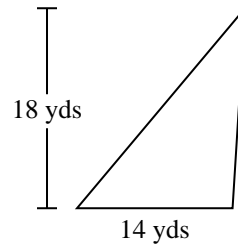
2)



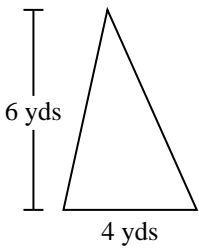
3)



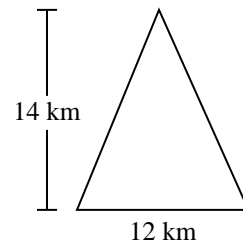
4)



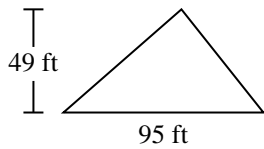
5)



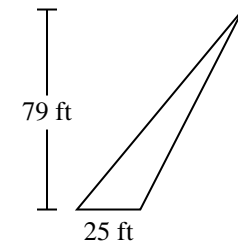
6)



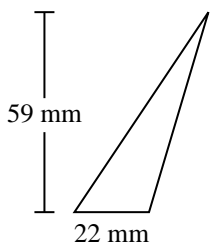
7)



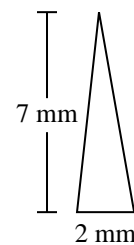
8)



9)



10)



Answers

1. 800 in²

2. 40 mm²

3. 2,269.5 ft²

4. 126 yds²

5. 12 yds²

6. 84 km²

7. 2,327.5 ft²

8. 987.5 ft²

9. 649 mm²

10. 7 mm²



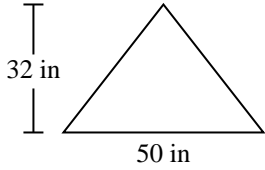
Find the area of each triangle. Units are not to scale.

Answers

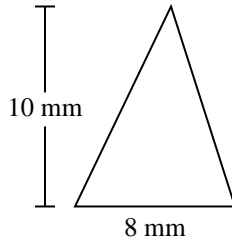
84	800	2,327.5	126
2,269.5	987.5	40	12
7	649		

1. _____
2. _____
3. _____
4. _____
5. _____
6. _____
7. _____
8. _____
9. _____
10. _____

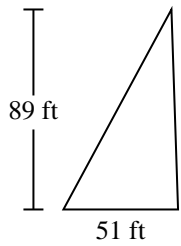
1)



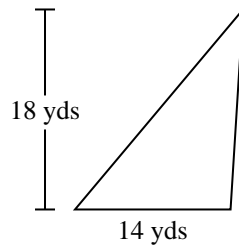
2)



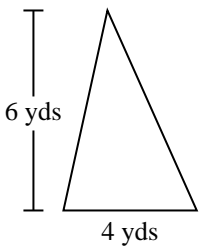
3)



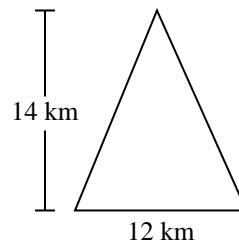
4)



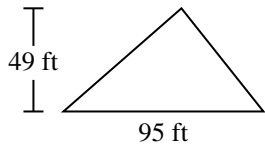
5)



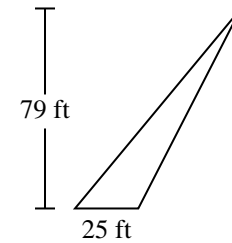
6)



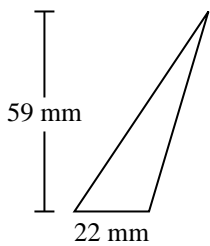
7)



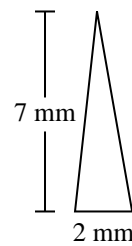
8)



9)

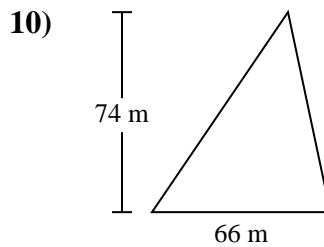
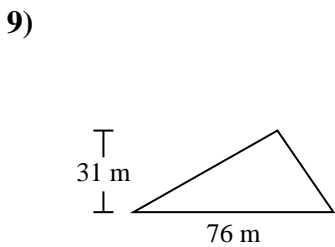
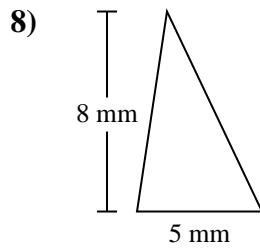
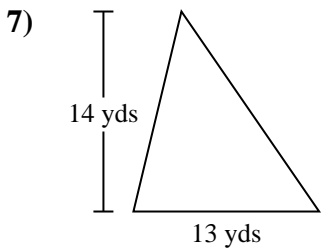
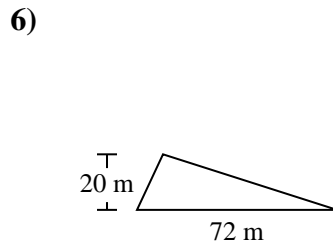
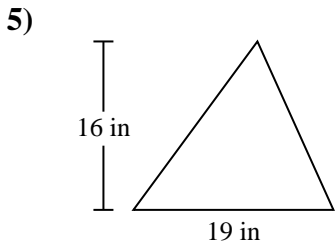
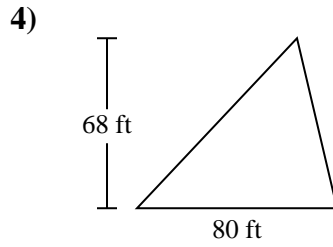
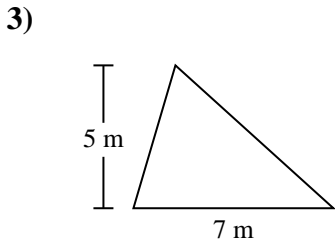
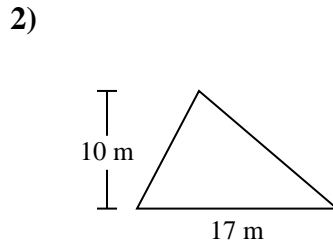
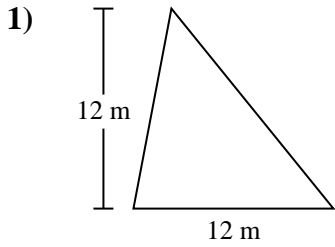


10)





Find the area of each triangle. Units are not to scale.

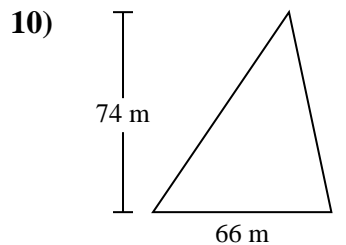
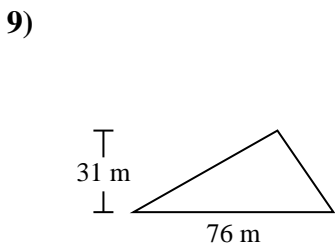
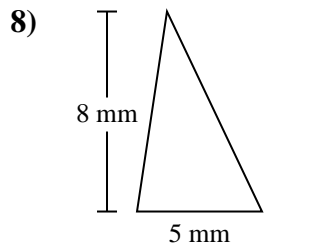
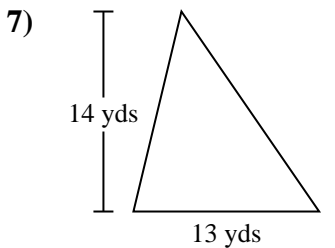
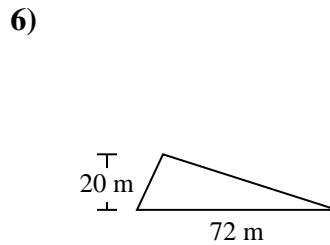
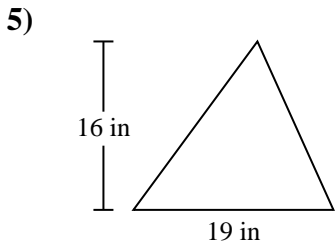
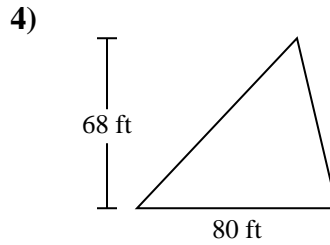
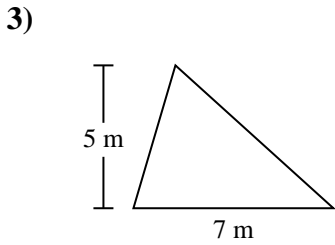
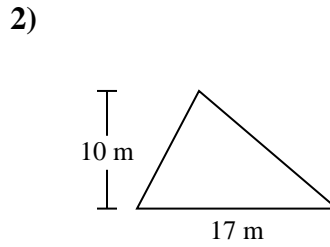
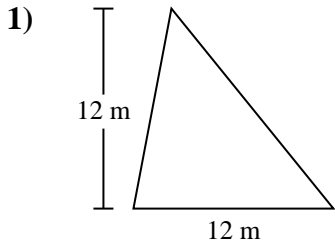


Answers

- 1. _____
- 2. _____
- 3. _____
- 4. _____
- 5. _____
- 6. _____
- 7. _____
- 8. _____
- 9. _____
- 10. _____



Find the area of each triangle. Units are not to scale.



Answers

1. 72 m²
2. 85 m²
3. 17.5 m²
4. 2,720 ft²
5. 152 in²
6. 720 m²
7. 91 yds²
8. 20 mm²
9. 1,178 m²
10. 2,442 m²



Find the area of each triangle. Units are not to scale.

Answers

152	91	2,720	72
85	720	2,442	17.5
1,178	20		

1. _____
2. _____
3. _____
4. _____
5. _____
6. _____
7. _____
8. _____
9. _____
10. _____

