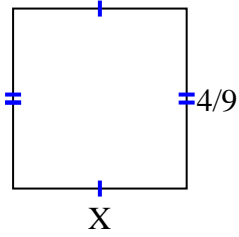




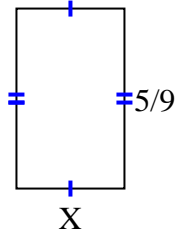
Find the value of X for each figure. Each figure is in centimeters (cm). Not to scale.

Answers

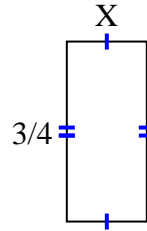
1) Area = $\frac{12}{63} \text{ cm}^2$



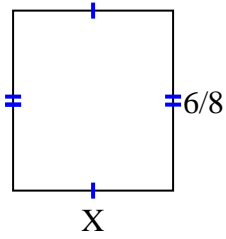
2) Area = $\frac{10}{54} \text{ cm}^2$



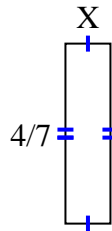
3) Area = $\frac{3}{12} \text{ cm}^2$



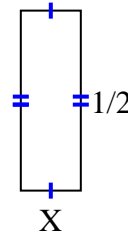
4) Area = $\frac{24}{48} \text{ cm}^2$



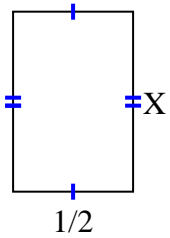
5) Area = $\frac{4}{49} \text{ cm}^2$



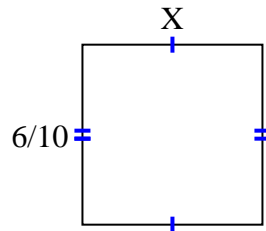
6) Area = $\frac{1}{12} \text{ cm}^2$



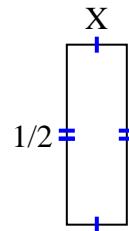
7) Area = $\frac{3}{8} \text{ cm}^2$



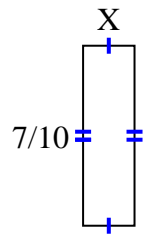
8) Area = $\frac{18}{50} \text{ cm}^2$



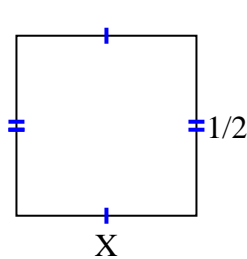
9) Area = $\frac{1}{12} \text{ cm}^2$



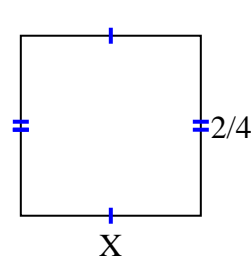
10) Area = $\frac{14}{100} \text{ cm}^2$



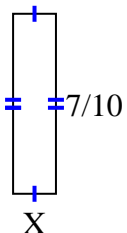
11) Area = $\frac{1}{4} \text{ cm}^2$



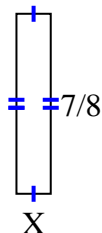
12) Area = $\frac{2}{8} \text{ cm}^2$



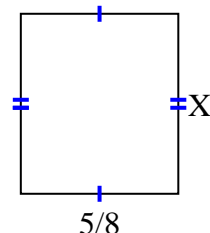
13) Area = $\frac{7}{60} \text{ cm}^2$



14) Area = $\frac{7}{48} \text{ cm}^2$



15) Area = $\frac{25}{56} \text{ cm}^2$

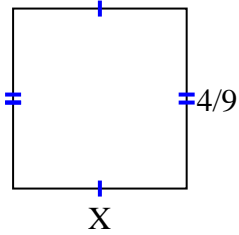


1. _____
2. _____
3. _____
4. _____
5. _____
6. _____
7. _____
8. _____
9. _____
10. _____
11. _____
12. _____
13. _____
14. _____
15. _____

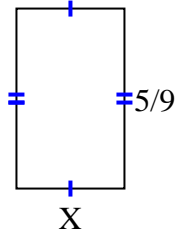


Find the value of X for each figure. Each figure is in centimeters (cm). Not to scale.

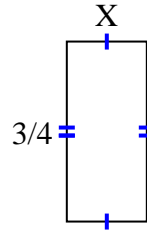
1) Area = $\frac{12}{63} \text{ cm}^2$



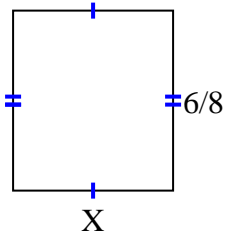
2) Area = $\frac{10}{54} \text{ cm}^2$



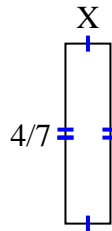
3) Area = $\frac{3}{12} \text{ cm}^2$



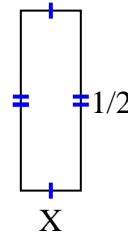
4) Area = $\frac{24}{48} \text{ cm}^2$



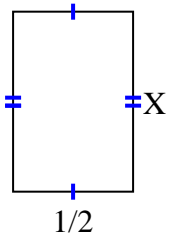
5) Area = $\frac{4}{49} \text{ cm}^2$



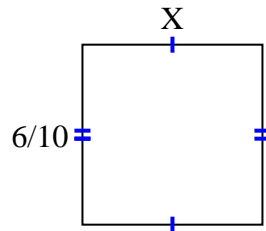
6) Area = $\frac{1}{12} \text{ cm}^2$



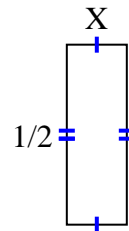
7) Area = $\frac{3}{8} \text{ cm}^2$



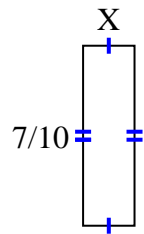
8) Area = $\frac{18}{50} \text{ cm}^2$



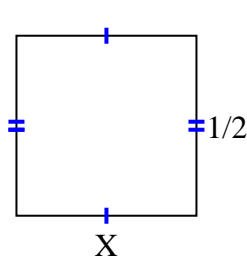
9) Area = $\frac{1}{12} \text{ cm}^2$



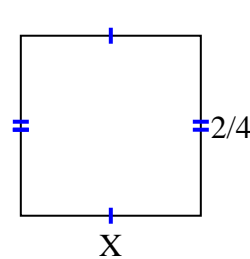
10) Area = $\frac{14}{100} \text{ cm}^2$



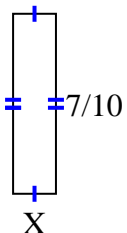
11) Area = $\frac{1}{4} \text{ cm}^2$



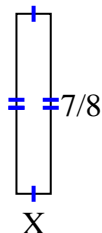
12) Area = $\frac{2}{8} \text{ cm}^2$



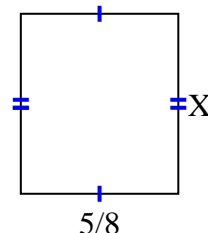
13) Area = $\frac{7}{60} \text{ cm}^2$



14) Area = $\frac{7}{48} \text{ cm}^2$



15) Area = $\frac{25}{56} \text{ cm}^2$



Answers

1. $\frac{3}{7}$

2. $\frac{2}{6}$

3. $\frac{1}{3}$

4. $\frac{4}{6}$

5. $\frac{1}{7}$

6. $\frac{1}{6}$

7. $\frac{3}{4}$

8. $\frac{3}{5}$

9. $\frac{1}{6}$

10. $\frac{2}{10}$

11. $\frac{1}{2}$

12. $\frac{1}{2}$

13. $\frac{1}{6}$

14. $\frac{1}{6}$

15. $\frac{5}{7}$