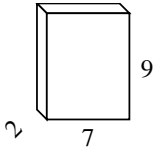


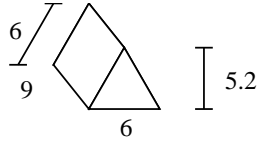


Find the surface area of each figure. Units are in cm (not to scale).

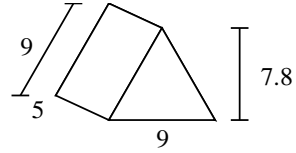
Ex)



1)



2)



Answers

Ex. 190 cm²

1. _____

2. _____

3. _____

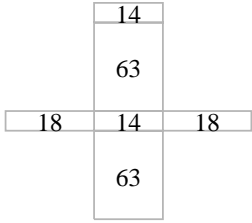
4. _____

5. _____

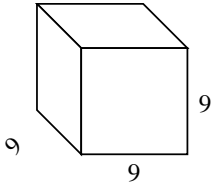
6. _____

7. _____

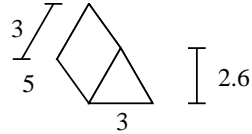
8. _____



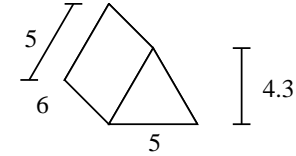
3)



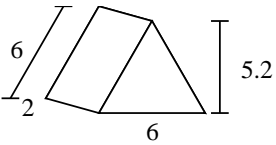
4)



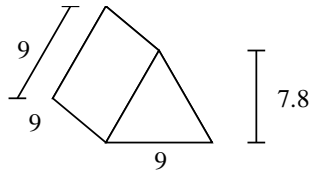
5)



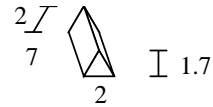
6)



7)


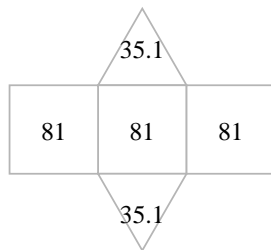
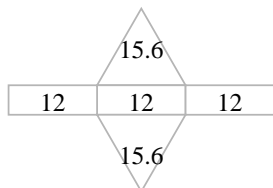
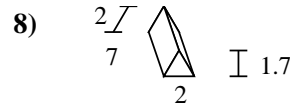
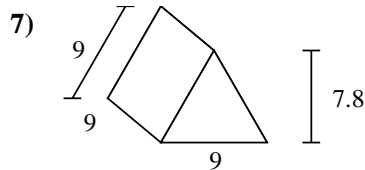
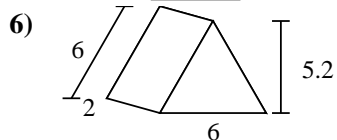
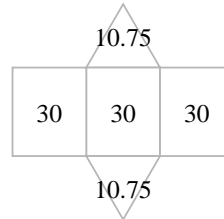
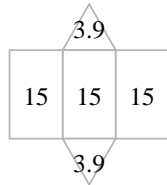
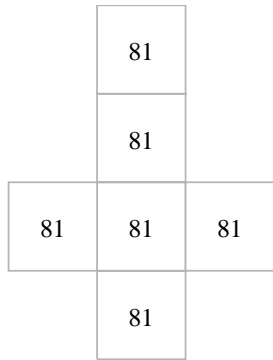
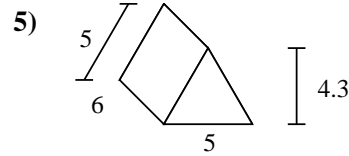
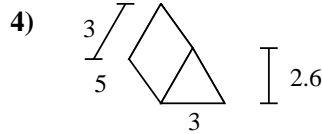
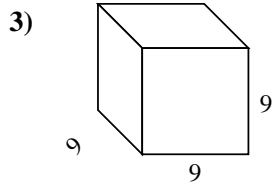
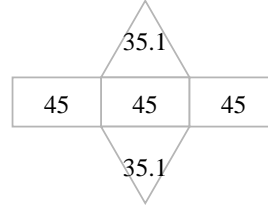
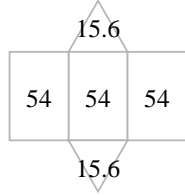
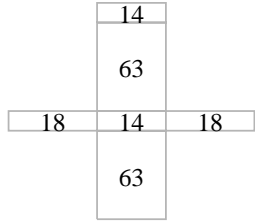
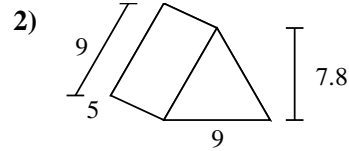
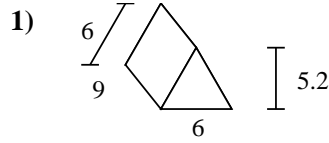
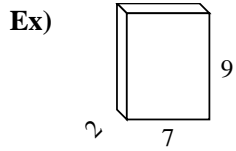


8)





Find the surface area of each figure. Units are in cm (not to scale).



Answers

Ex. **190 cm²**

1. **193.2 cm²**

2. **205.2 cm²**

3. **486 cm²**

4. **52.8 cm²**

5. **111.5 cm²**

6. **67.2 cm²**

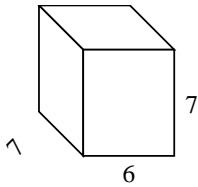
7. **313.2 cm²**

8. **45.4 cm²**

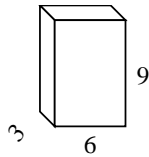


Find the surface area of each figure. Units are in cm (not to scale).

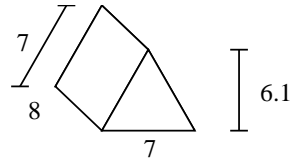
Ex)



1)



2)



Answers

Ex. **266 cm²**

1. _____

2. _____

3. _____

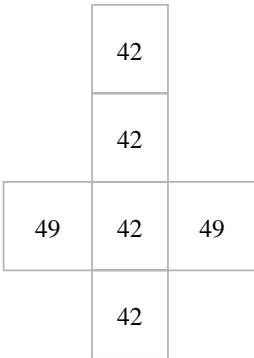
4. _____

5. _____

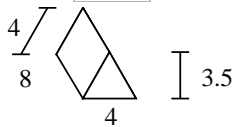
6. _____

7. _____

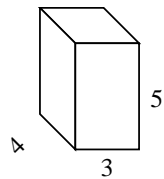
8. _____



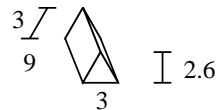
3)



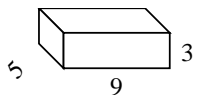
4)



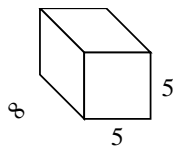
5)



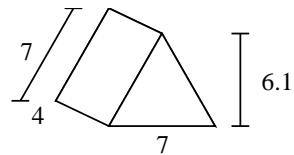
6)



7)



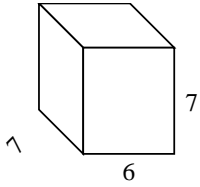
8)



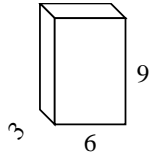


Find the surface area of each figure. Units are in cm (not to scale).

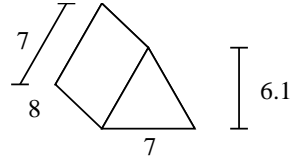
Ex)



1)



2)



Answers

Ex. 266 cm²

1. 198 cm²

2. 210.7 cm²

3. 110 cm²

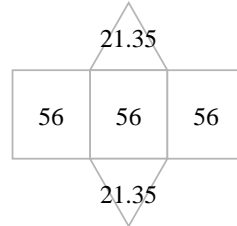
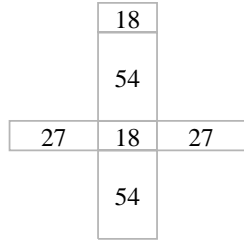
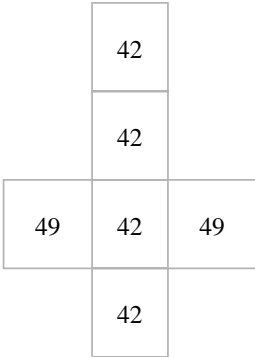
4. 94 cm²

5. 88.8 cm²

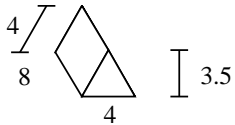
6. 174 cm²

7. 210 cm²

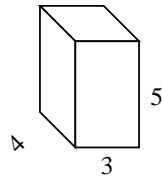
8. 126.7 cm²



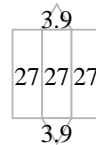
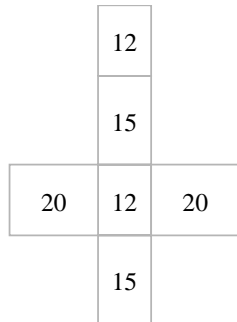
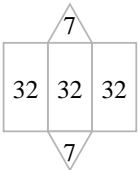
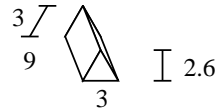
3)



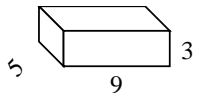
4)



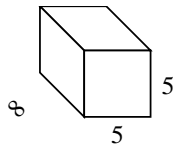
5)



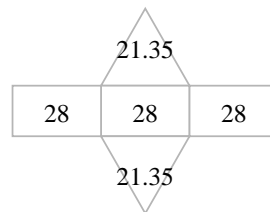
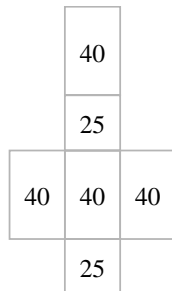
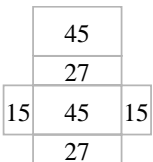
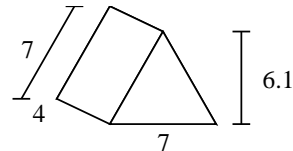
6)



7)

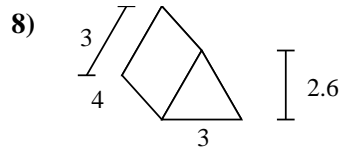
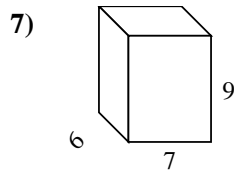
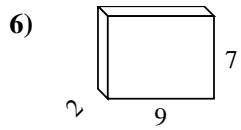
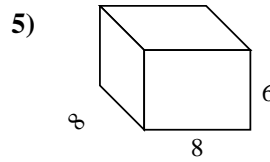
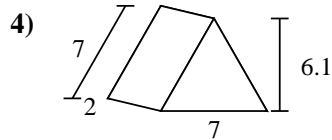
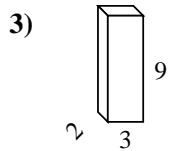
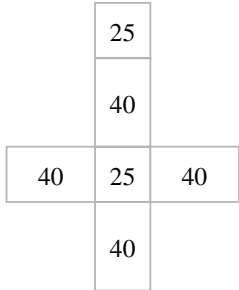
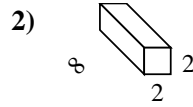
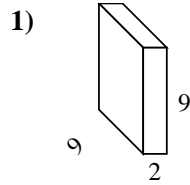
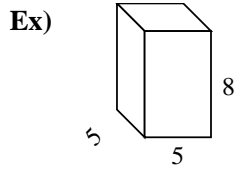


8)





Find the surface area of each figure. Units are in cm (not to scale).



Answers

Ex. 210 cm²

1. _____

2. _____

3. _____

4. _____

5. _____

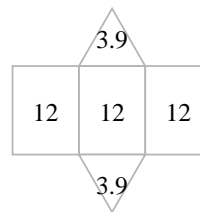
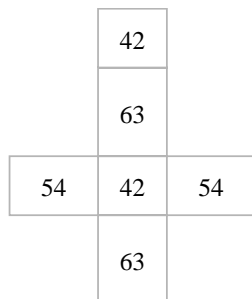
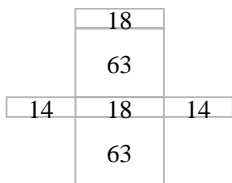
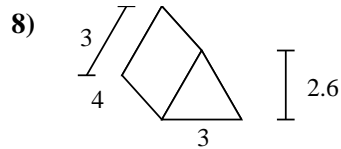
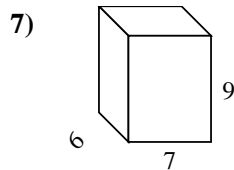
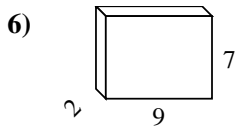
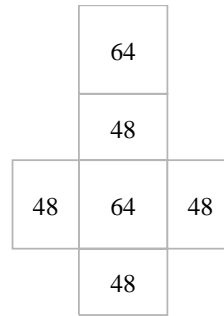
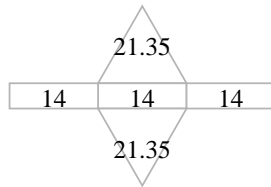
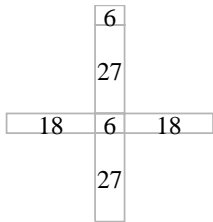
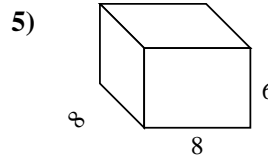
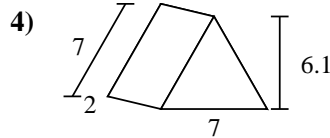
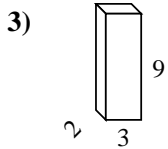
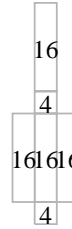
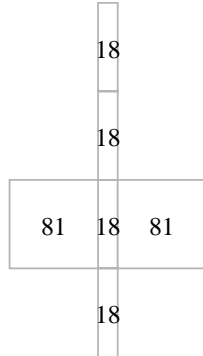
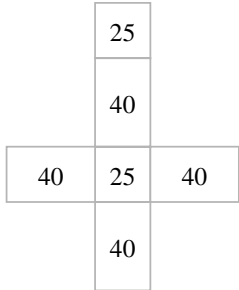
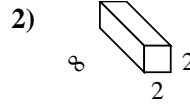
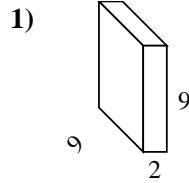
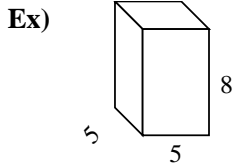
6. _____

7. _____

8. _____



Find the surface area of each figure. Units are in cm (not to scale).



Answers

Ex. 210 cm²

1. 234 cm²

2. 72 cm²

3. 102 cm²

4. 84.7 cm²

5. 320 cm²

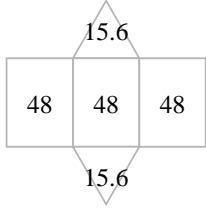
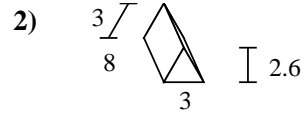
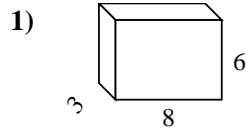
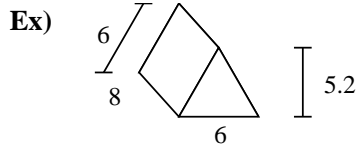
6. 190 cm²

7. 318 cm²

8. 43.8 cm²



Find the surface area of each figure. Units are in cm (not to scale).



Answers

Ex. 175.2 cm²

1. _____

2. _____

3. _____

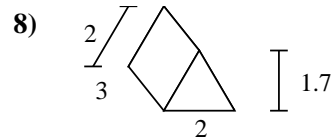
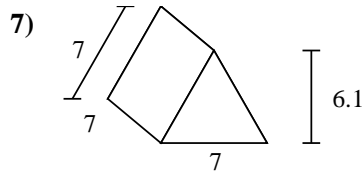
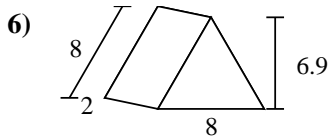
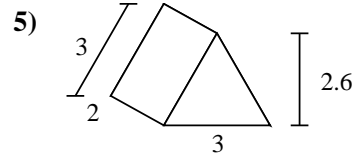
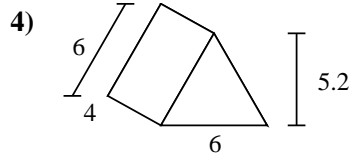
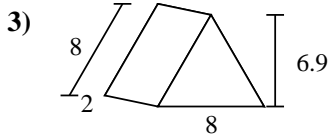
4. _____

5. _____

6. _____

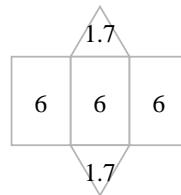
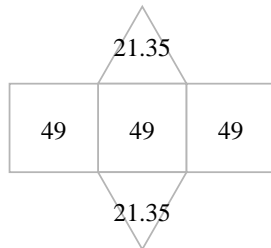
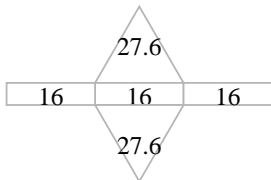
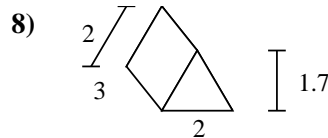
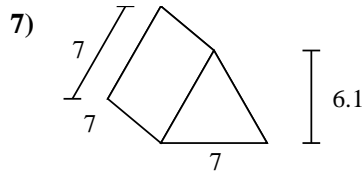
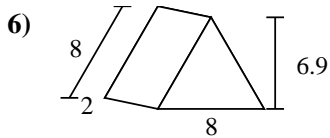
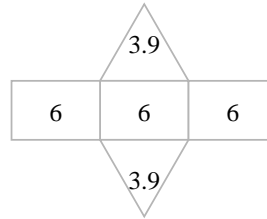
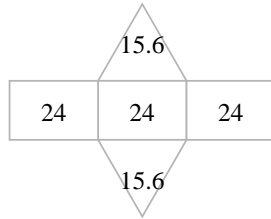
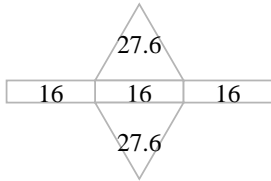
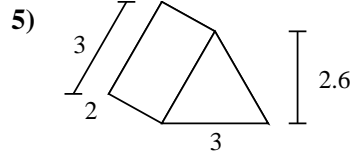
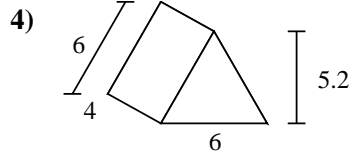
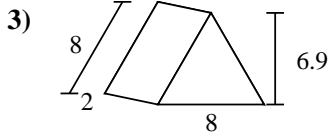
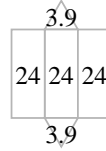
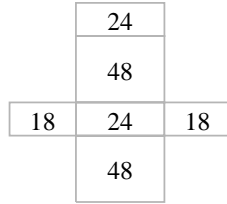
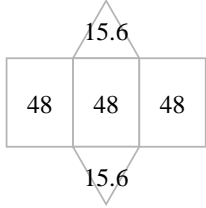
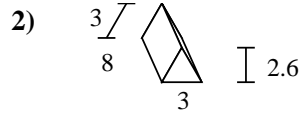
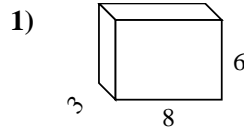
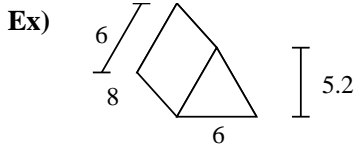
7. _____

8. _____





Find the surface area of each figure. Units are in cm (not to scale).



Answers

Ex. **175.2 cm²**

1. **180 cm²**

2. **79.8 cm²**

3. **103.2 cm²**

4. **103.2 cm²**

5. **25.8 cm²**

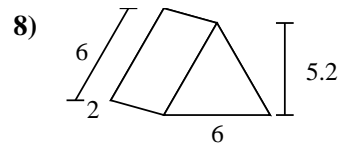
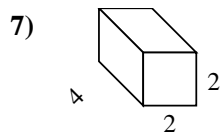
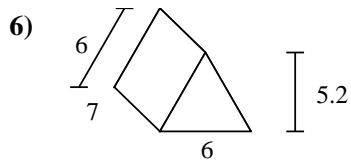
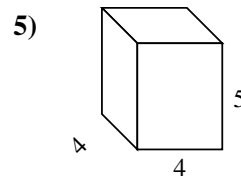
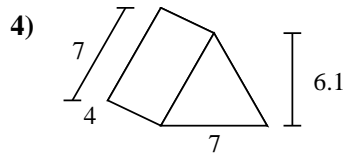
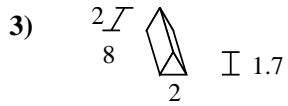
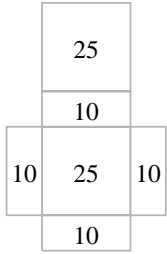
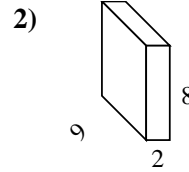
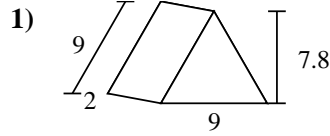
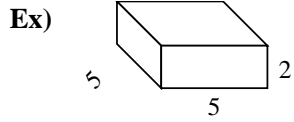
6. **103.2 cm²**

7. **189.7 cm²**

8. **21.4 cm²**



Find the surface area of each figure. Units are in cm (not to scale).



Answers

Ex. 90 cm²

1. _____

2. _____

3. _____

4. _____

5. _____

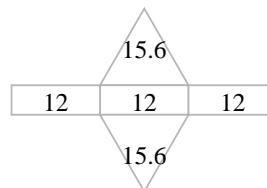
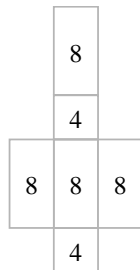
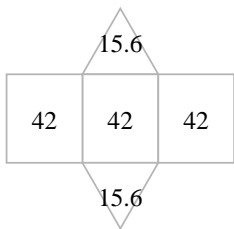
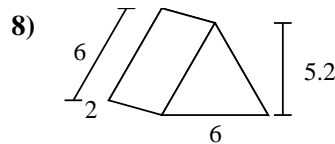
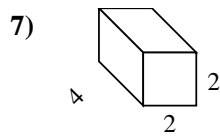
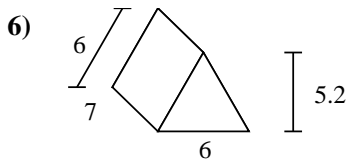
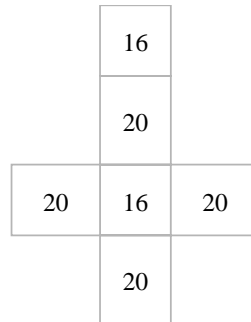
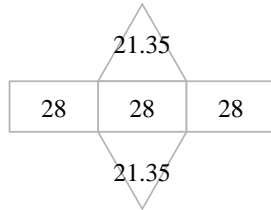
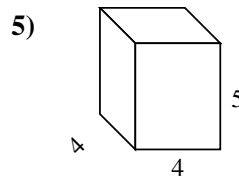
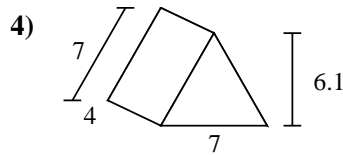
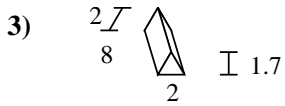
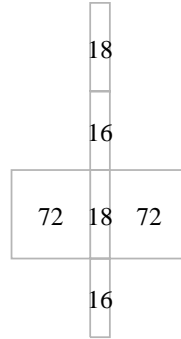
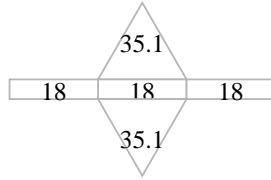
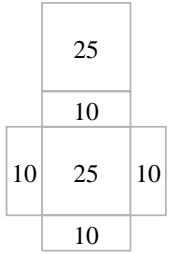
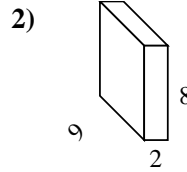
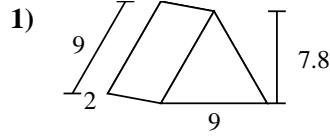
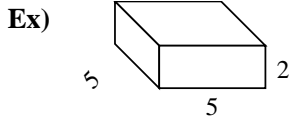
6. _____

7. _____

8. _____



Find the surface area of each figure. Units are in cm (not to scale).



Answers

Ex. 90 cm²

1. 124.2 cm²

2. 212 cm²

3. 51.4 cm²

4. 126.7 cm²

5. 112 cm²

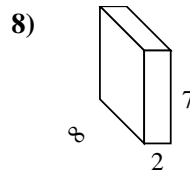
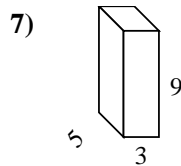
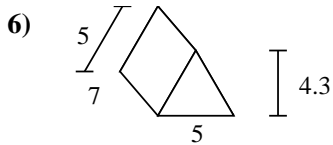
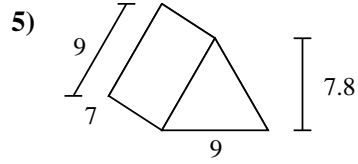
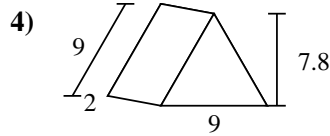
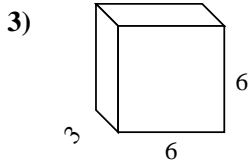
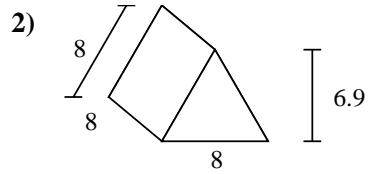
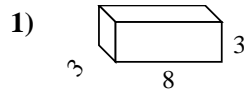
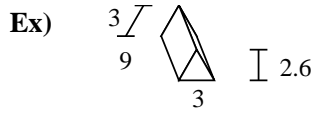
6. 157.2 cm²

7. 40 cm²

8. 67.2 cm²



Find the surface area of each figure. Units are in cm (not to scale).



Answers

Ex. 88.8 cm²

1. _____

2. _____

3. _____

4. _____

5. _____

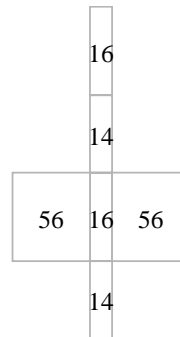
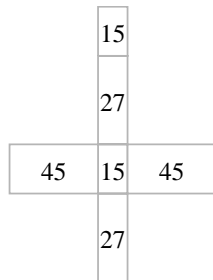
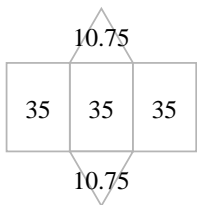
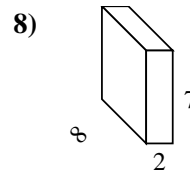
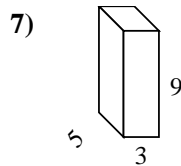
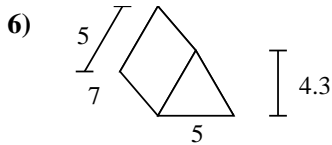
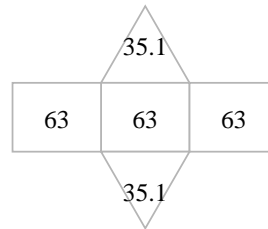
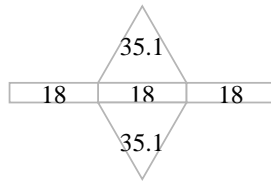
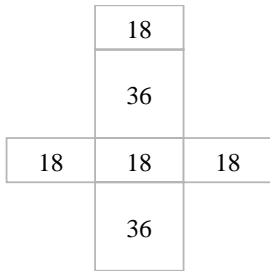
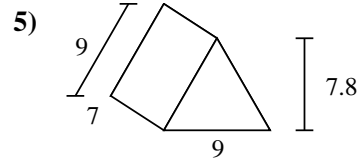
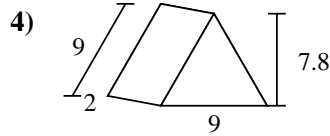
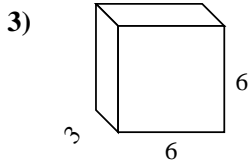
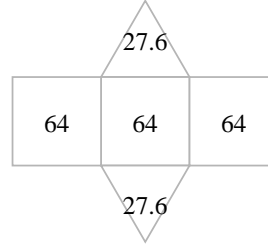
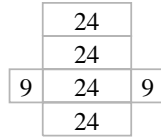
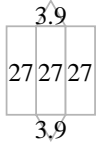
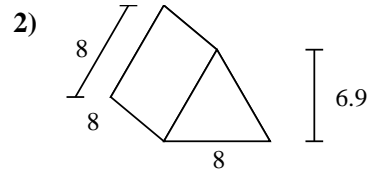
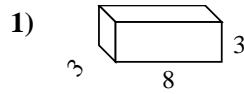
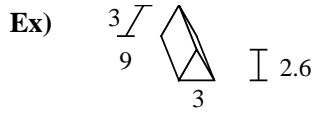
6. _____

7. _____

8. _____



Find the surface area of each figure. Units are in cm (not to scale).



Answers

Ex. **88.8 cm²**

1. **114 cm²**

2. **247.2 cm²**

3. **144 cm²**

4. **124.2 cm²**

5. **259.2 cm²**

6. **126.5 cm²**

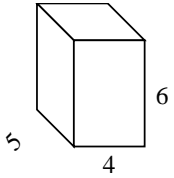
7. **174 cm²**

8. **172 cm²**

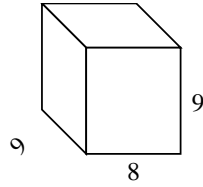


Find the surface area of each figure. Units are in cm (not to scale).

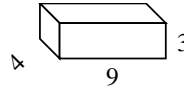
Ex)



1)



2)



Answers

Ex. 148 cm²

1. _____

2. _____

3. _____

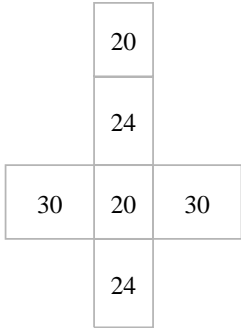
4. _____

5. _____

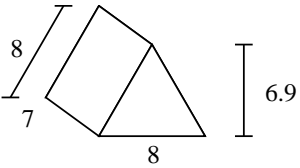
6. _____

7. _____

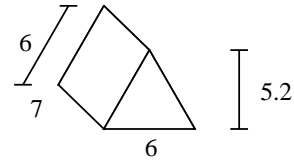
8. _____



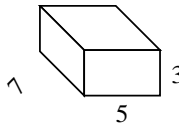
3)



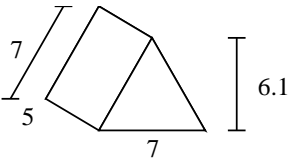
4)



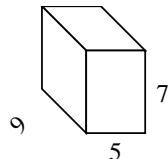
5)



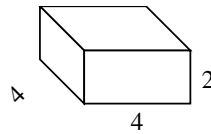
6)



7)



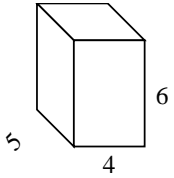
8)



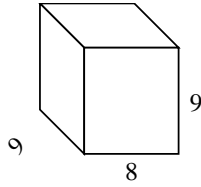


Find the surface area of each figure. Units are in cm (not to scale).

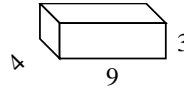
Ex)



1)



2)



Answers

Ex. 148 cm²

1. 450 cm²

2. 150 cm²

3. 223.2 cm²

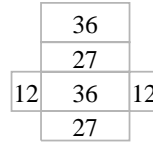
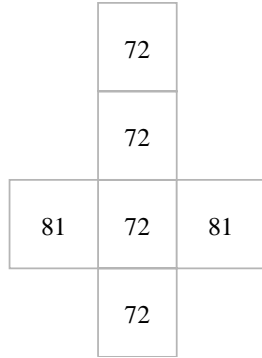
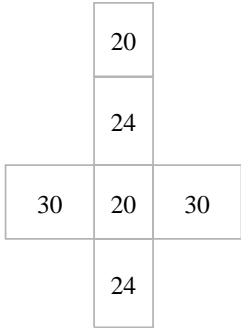
4. 157.2 cm²

5. 142 cm²

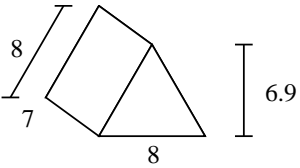
6. 147.7 cm²

7. 286 cm²

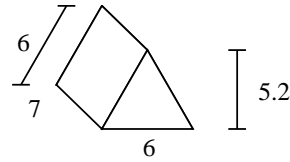
8. 64 cm²



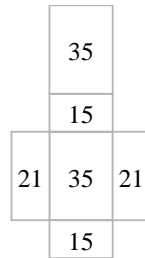
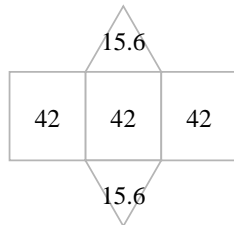
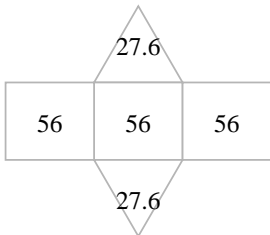
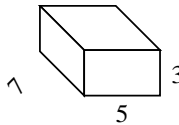
3)



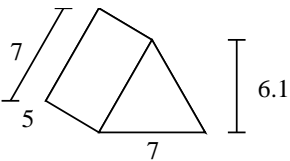
4)



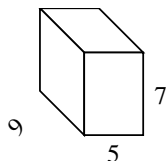
5)



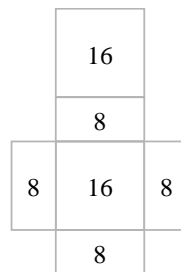
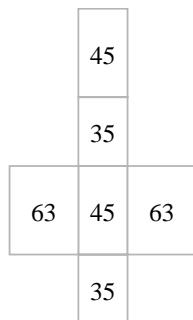
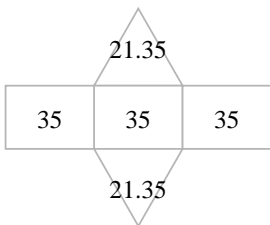
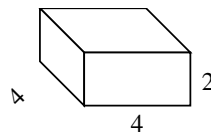
6)



7)

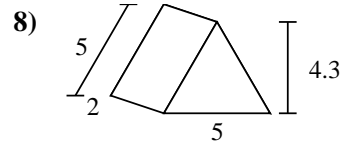
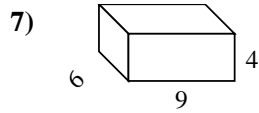
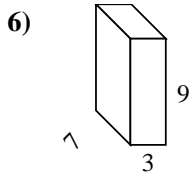
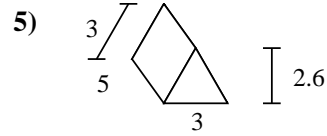
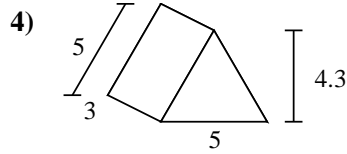
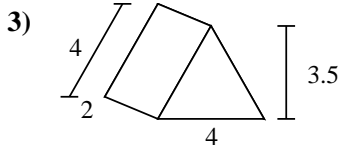
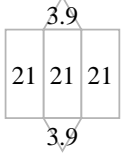
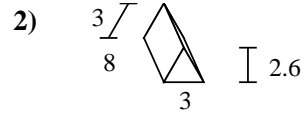
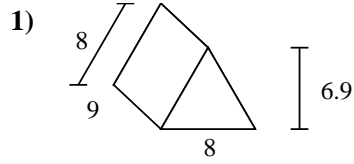
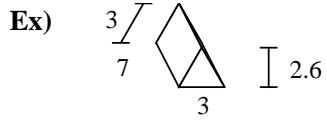


8)





Find the surface area of each figure. Units are in cm (not to scale).



Answers

Ex. 70.8 cm²

1. _____

2. _____

3. _____

4. _____

5. _____

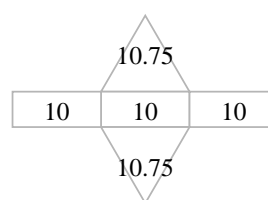
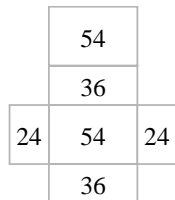
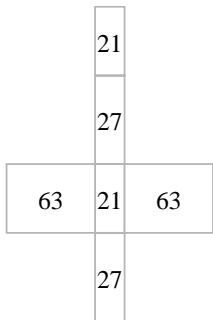
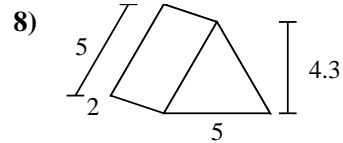
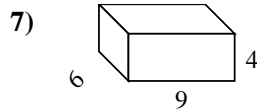
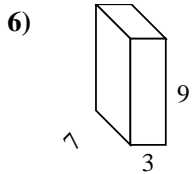
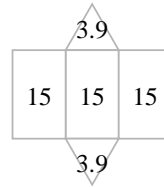
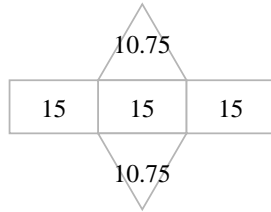
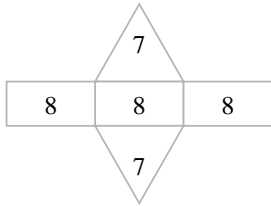
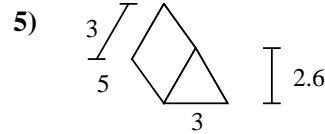
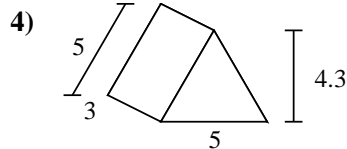
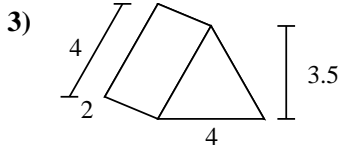
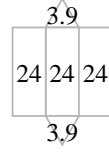
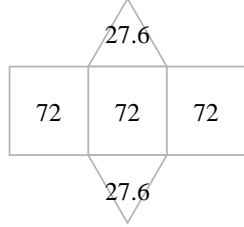
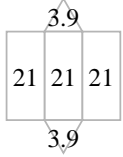
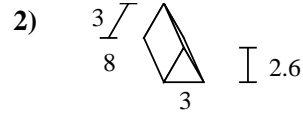
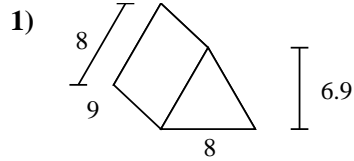
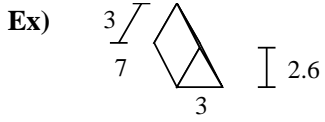
6. _____

7. _____

8. _____



Find the surface area of each figure. Units are in cm (not to scale).



Answers

Ex. **70.8 cm²**

1. **271.2 cm²**

2. **79.8 cm²**

3. **38 cm²**

4. **66.5 cm²**

5. **52.8 cm²**

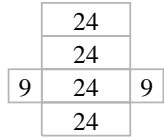
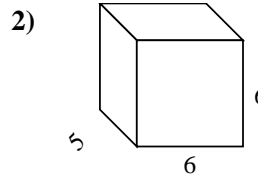
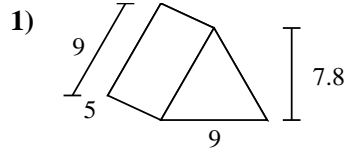
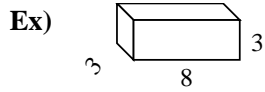
6. **222 cm²**

7. **228 cm²**

8. **51.5 cm²**



Find the surface area of each figure. Units are in cm (not to scale).



Answers

Ex. 114 cm²

1. _____

2. _____

3. _____

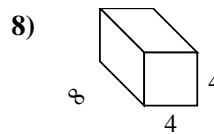
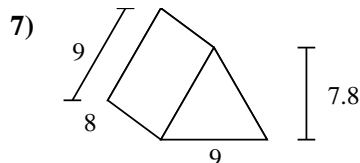
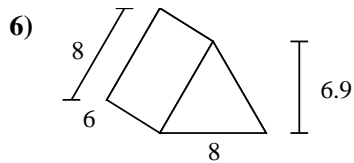
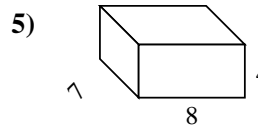
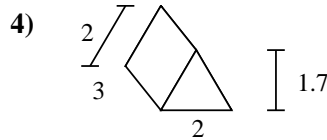
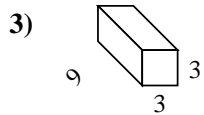
4. _____

5. _____

6. _____

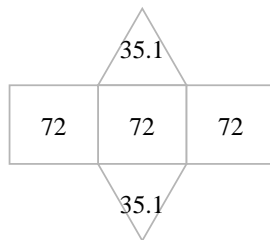
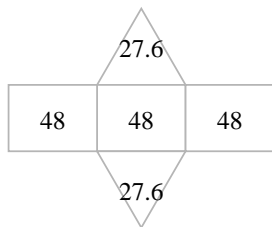
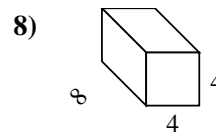
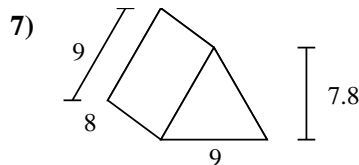
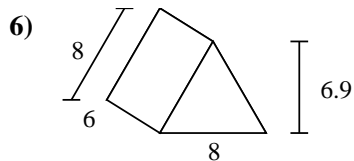
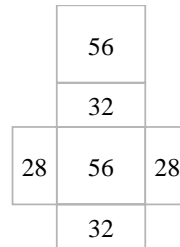
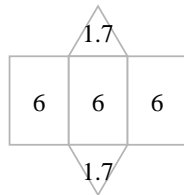
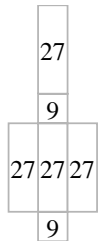
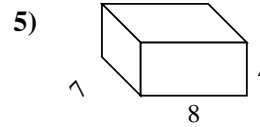
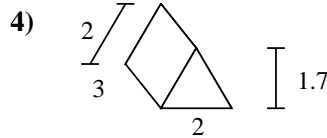
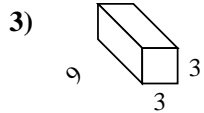
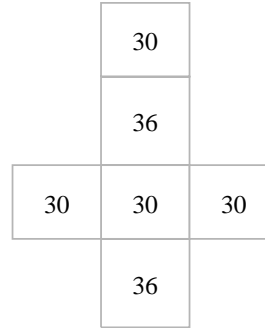
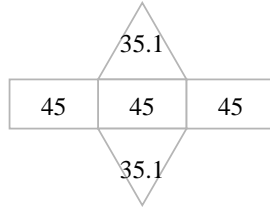
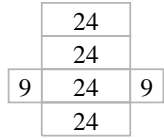
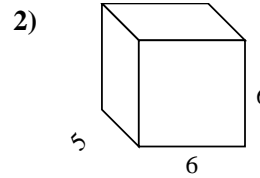
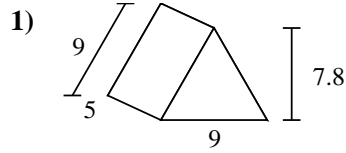
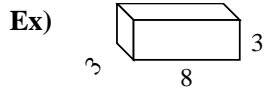
7. _____

8. _____





Find the surface area of each figure. Units are in cm (not to scale).



Answers

Ex. 114 cm²

1. 205.2 cm²

2. 192 cm²

3. 126 cm²

4. 21.4 cm²

5. 232 cm²

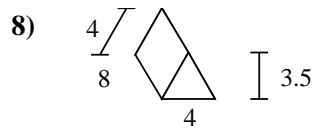
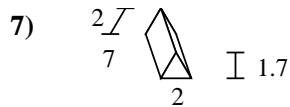
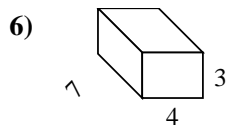
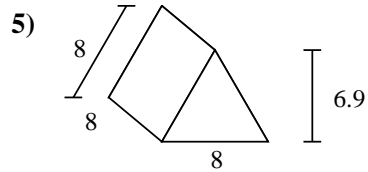
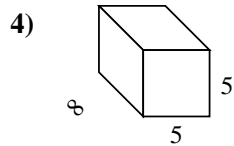
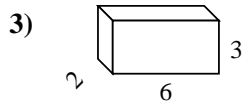
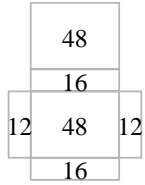
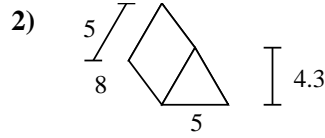
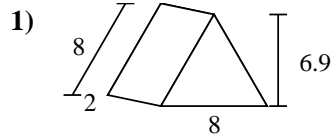
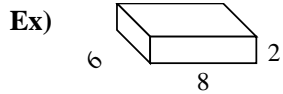
6. 199.2 cm²

7. 286.2 cm²

8. 160 cm²



Find the surface area of each figure. Units are in cm (not to scale).



Answers

Ex. 152 cm²

1. _____

2. _____

3. _____

4. _____

5. _____

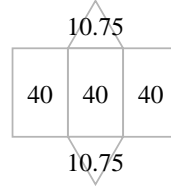
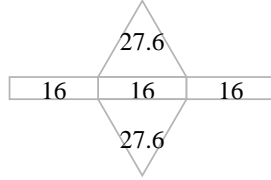
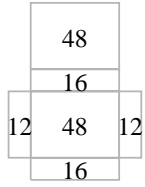
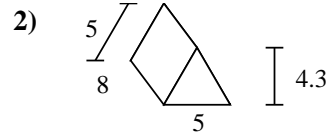
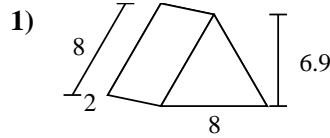
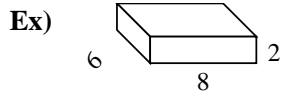
6. _____

7. _____

8. _____



Find the surface area of each figure. Units are in cm (not to scale).



Answers

Ex. 152 cm²

1. 103.2 cm²

2. 141.5 cm²

3. 72 cm²

4. 210 cm²

5. 247.2 cm²

6. 122 cm²

7. 45.4 cm²

8. 110 cm²

