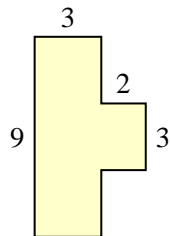




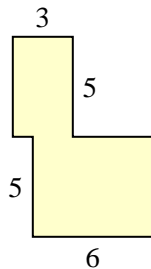
Find the total area of each shape. Measurement is in millimeters (mm). Not to scale.

Answers

1)



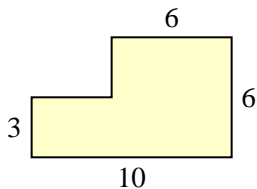
2)



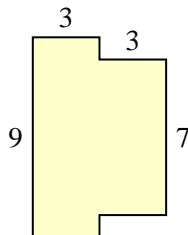
1. _____

2. _____

3)



4)

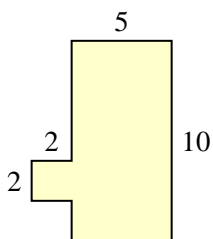


3. _____

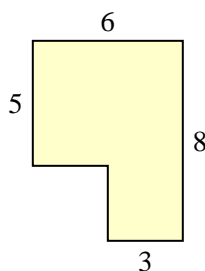
4. _____

5. _____

5)



6)

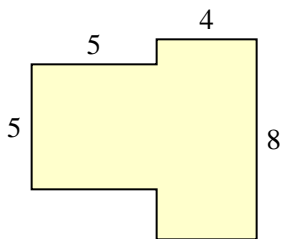


6. _____

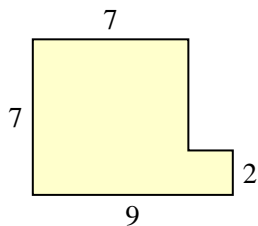
7. _____

8. _____

7)



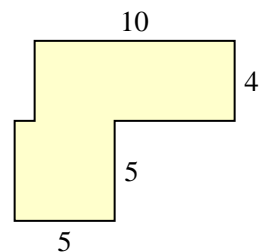
8)



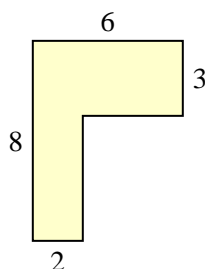
9. _____

10. _____

9)

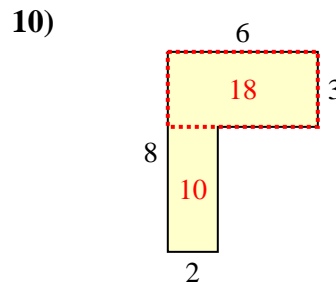
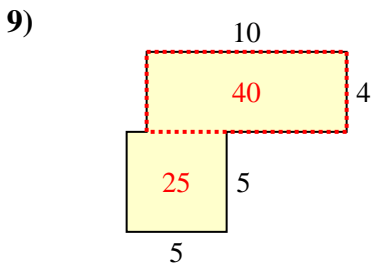
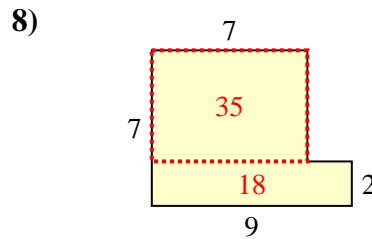
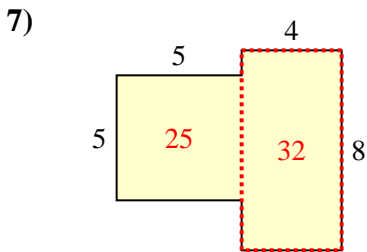
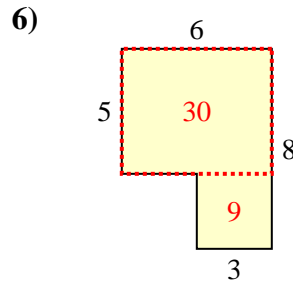
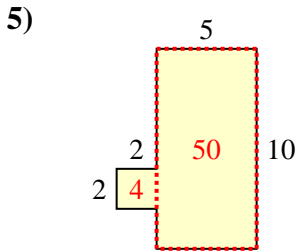
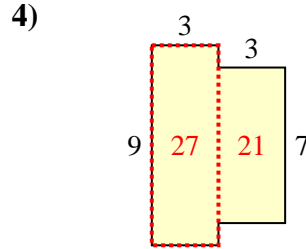
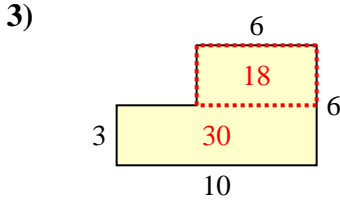
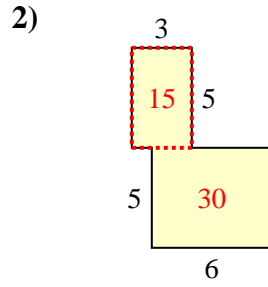
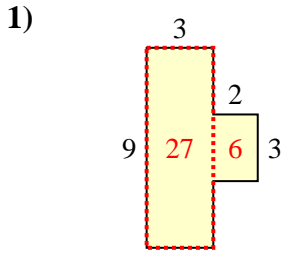


10)





Find the total area of each shape. Measurement is in millimeters (mm). Not to scale.



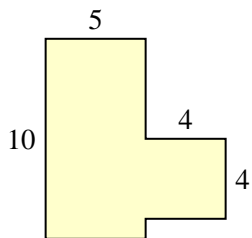
Answers

1. 33 mm²
2. 45 mm²
3. 48 mm²
4. 48 mm²
5. 54 mm²
6. 39 mm²
7. 57 mm²
8. 53 mm²
9. 65 mm²
10. 28 mm²

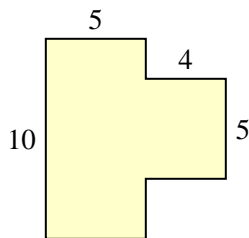


Find the total area of each shape. Measurement is in millimeters (mm). Not to scale.

1)



2)



Answers

1. _____

2. _____

3. _____

4. _____

5. _____

6. _____

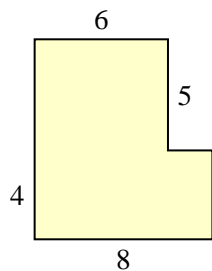
7. _____

8. _____

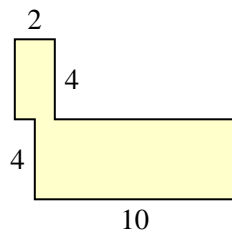
9. _____

10. _____

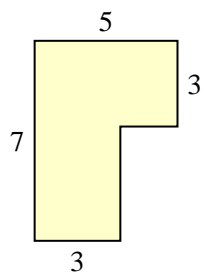
3)



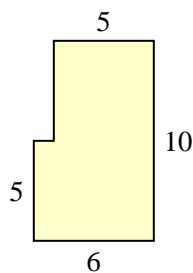
4)



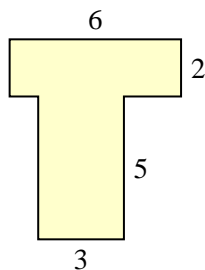
5)



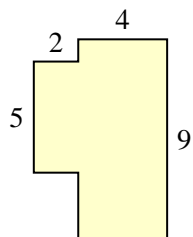
6)



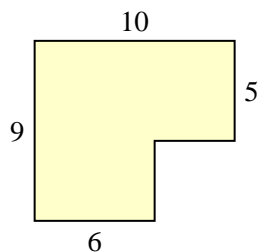
7)



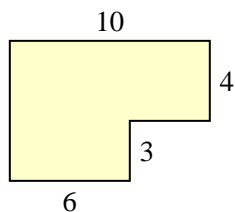
8)



9)

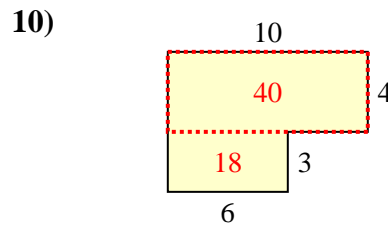
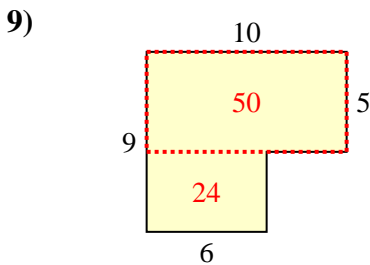
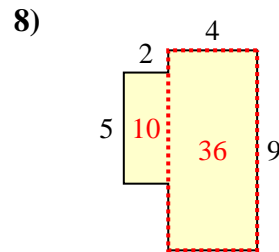
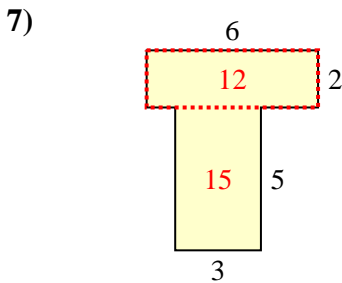
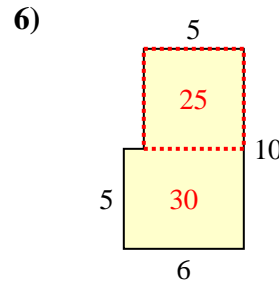
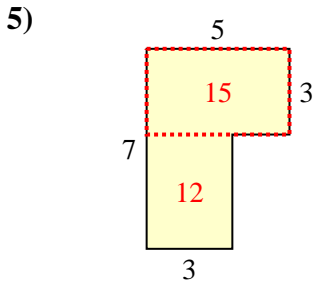
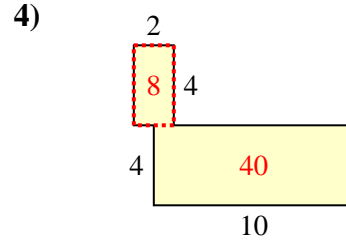
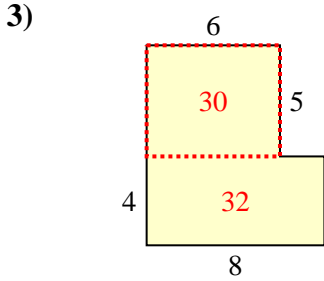
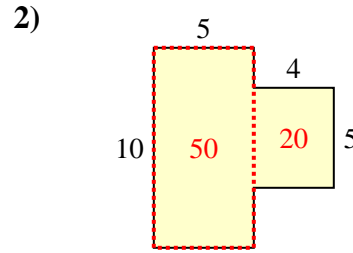
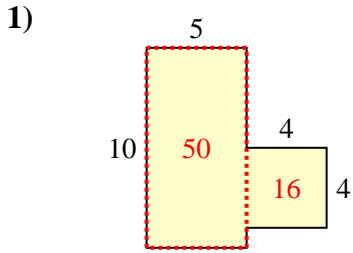


10)





Find the total area of each shape. Measurement is in millimeters (mm). Not to scale.



Answers

1. 66 mm²

2. 70 mm²

3. 62 mm²

4. 48 mm²

5. 27 mm²

6. 55 mm²

7. 27 mm²

8. 46 mm²

9. 74 mm²

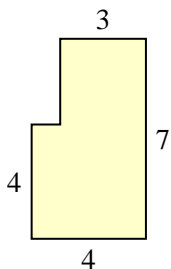
10. 58 mm²



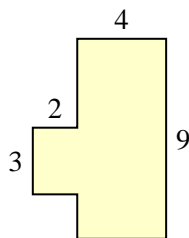
Find the total area of each shape. Measurement is in millimeters (mm). Not to scale.

Answers

1)



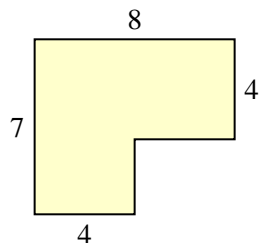
2)



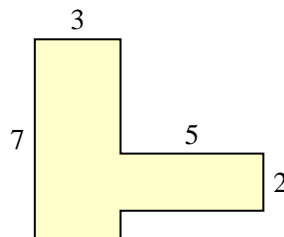
1. _____

2. _____

3)



4)

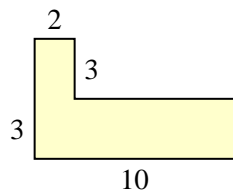


3. _____

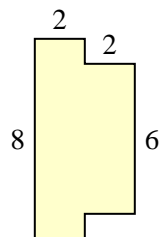
4. _____

5. _____

5)



6)



6. _____

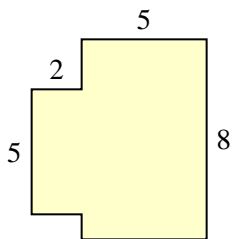
7. _____

8. _____

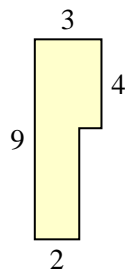
9. _____

10. _____

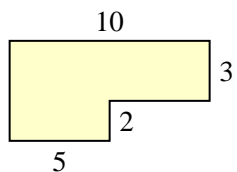
7)



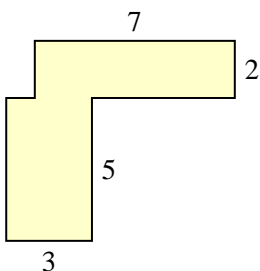
8)



9)

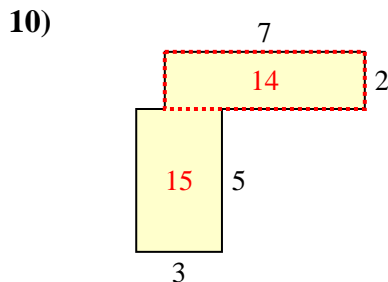
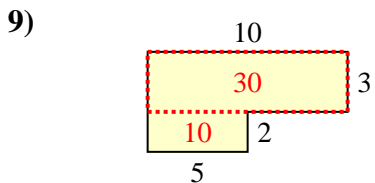
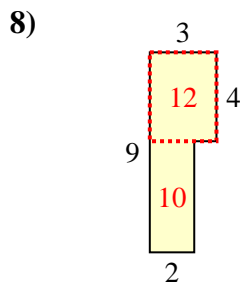
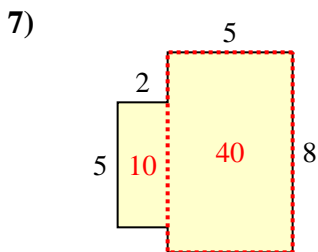
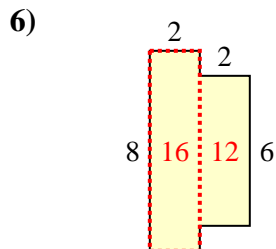
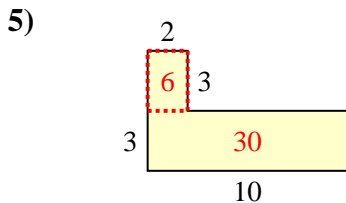
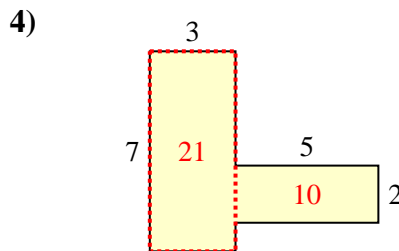
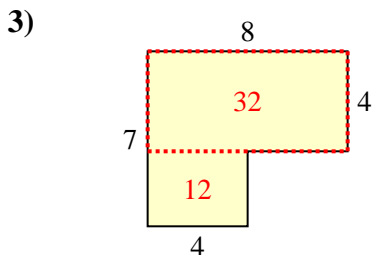
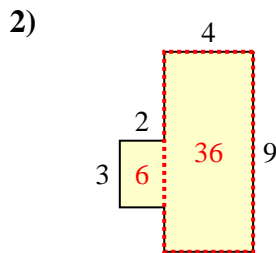
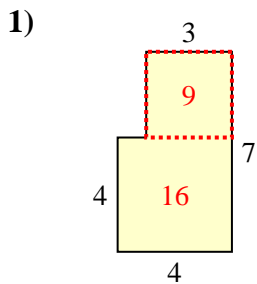


10)





Find the total area of each shape. Measurement is in millimeters (mm). Not to scale.



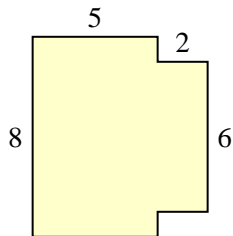
Answers

1. 25 mm²
2. 42 mm²
3. 44 mm²
4. 31 mm²
5. 36 mm²
6. 28 mm²
7. 50 mm²
8. 22 mm²
9. 40 mm²
10. 29 mm²

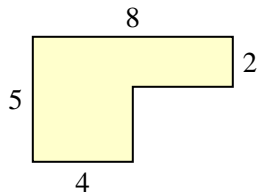


Find the total area of each shape. Measurement is in millimeters (mm). Not to scale.

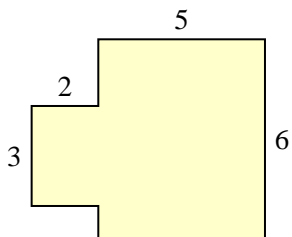
1)



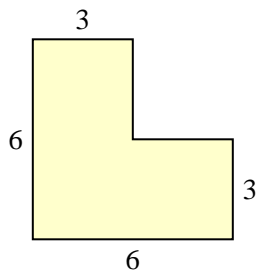
2)



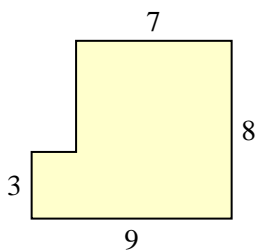
3)



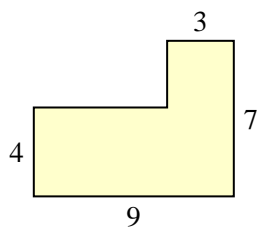
4)



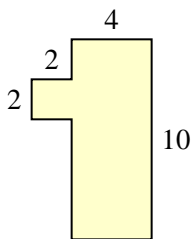
5)



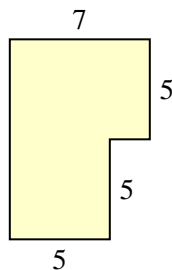
6)



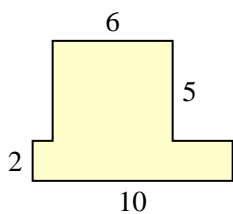
7)



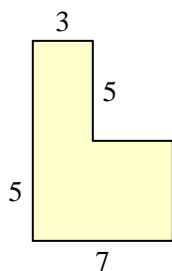
8)



9)



10)

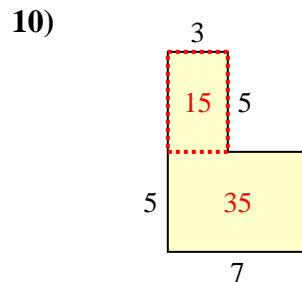
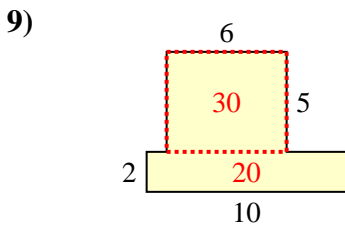
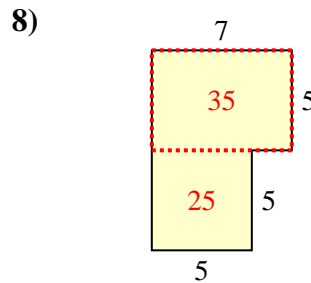
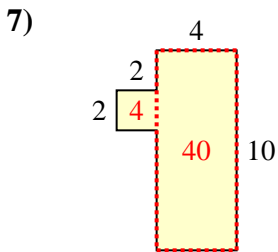
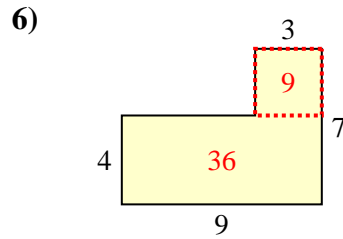
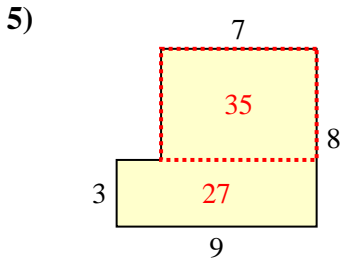
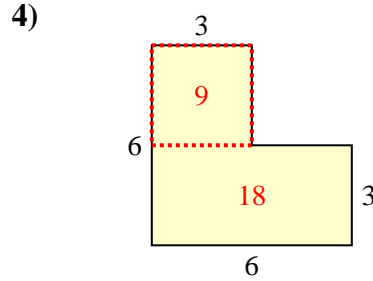
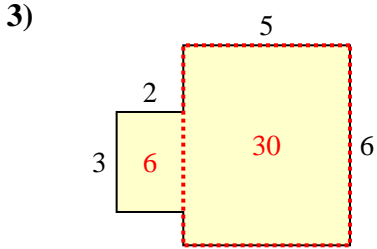
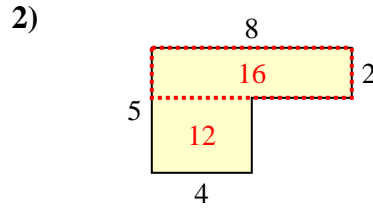
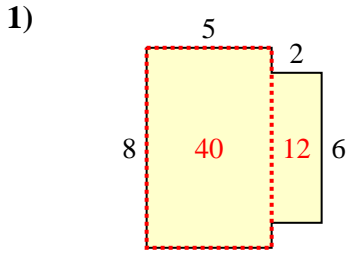


Answers

- 1. _____
- 2. _____
- 3. _____
- 4. _____
- 5. _____
- 6. _____
- 7. _____
- 8. _____
- 9. _____
- 10. _____



Find the total area of each shape. Measurement is in millimeters (mm). Not to scale.



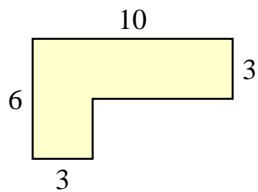
Answers

1. 52 mm²
2. 28 mm²
3. 36 mm²
4. 27 mm²
5. 62 mm²
6. 45 mm²
7. 44 mm²
8. 60 mm²
9. 50 mm²
10. 50 mm²

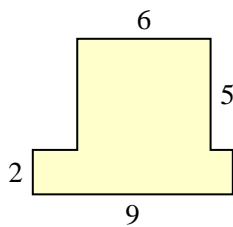


Find the total area of each shape. Measurement is in millimeters (mm). Not to scale.

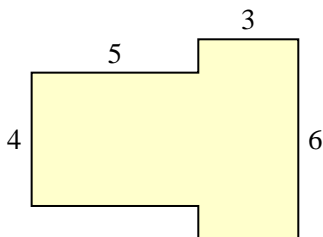
1)



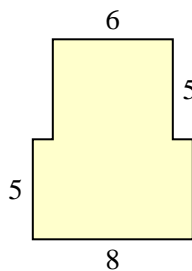
2)



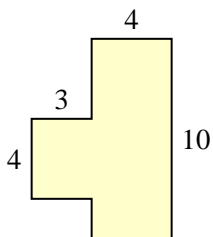
3)



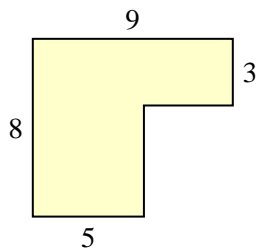
4)



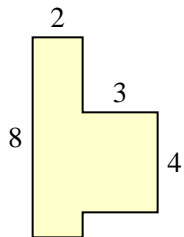
5)



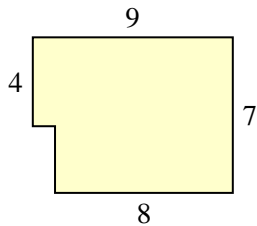
6)



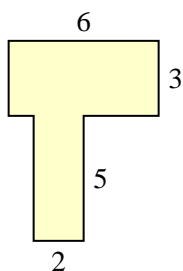
7)



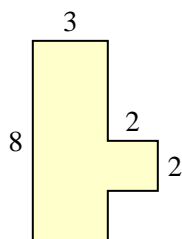
8)



9)



10)



Answers

1. _____

2. _____

3. _____

4. _____

5. _____

6. _____

7. _____

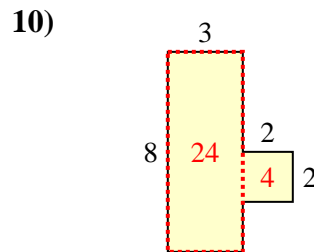
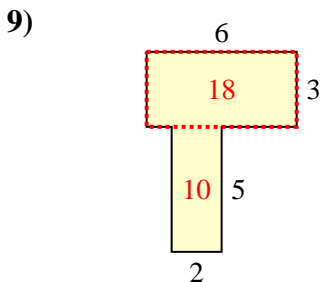
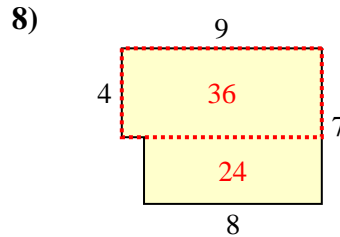
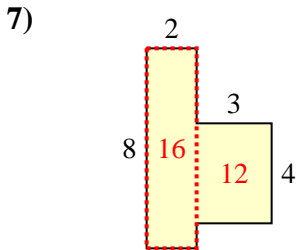
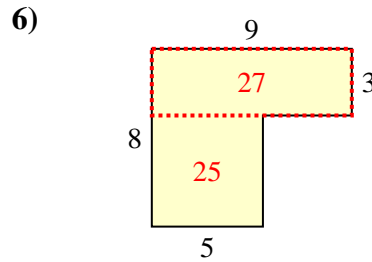
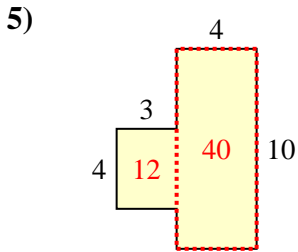
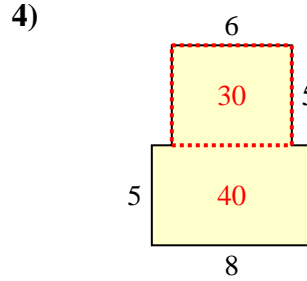
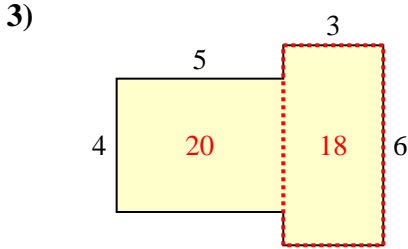
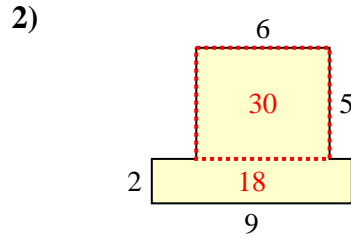
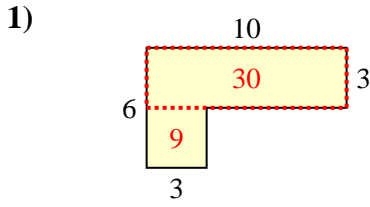
8. _____

9. _____

10. _____



Find the total area of each shape. Measurement is in millimeters (mm). Not to scale.



Answers

1. 39 mm²

2. 48 mm²

3. 38 mm²

4. 70 mm²

5. 52 mm²

6. 52 mm²

7. 28 mm²

8. 60 mm²

9. 28 mm²

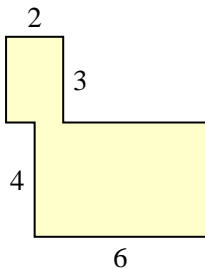
10. 28 mm²



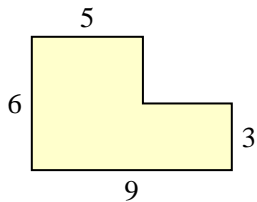
Find the total area of each shape. Measurement is in millimeters (mm). Not to scale.

Answers

1)



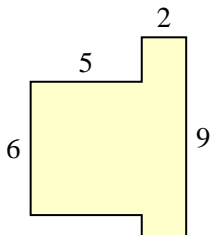
2)



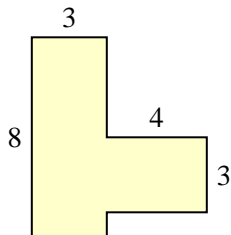
1. _____

2. _____

3)



4)

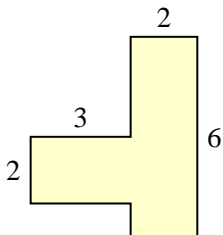


3. _____

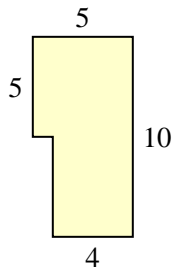
4. _____

5. _____

5)



6)



6. _____

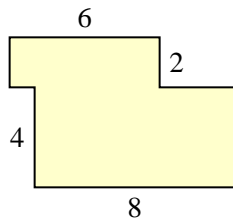
7. _____

8. _____

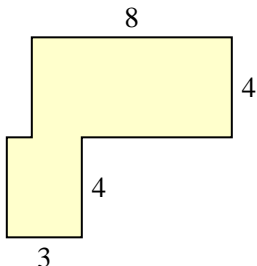
9. _____

10. _____

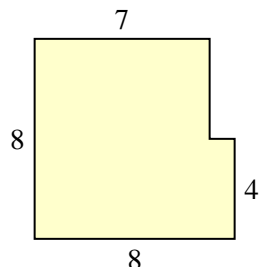
7)



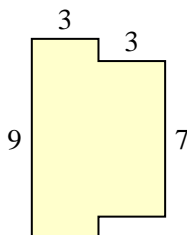
8)



9)

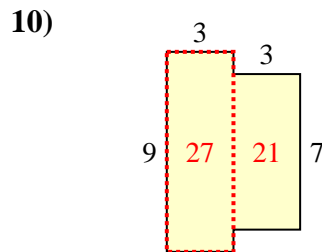
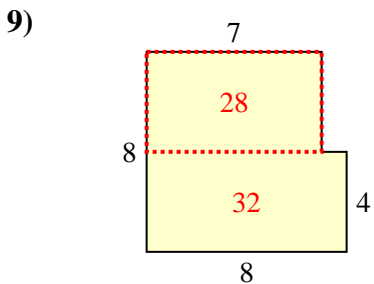
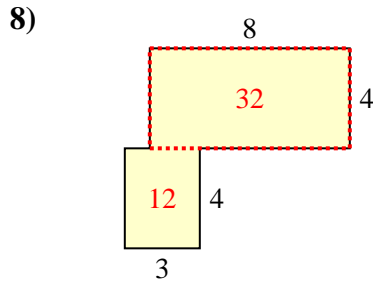
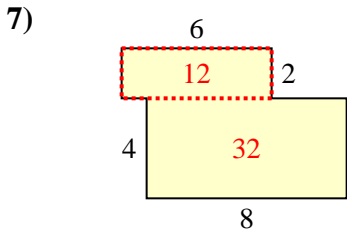
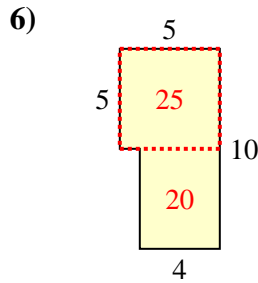
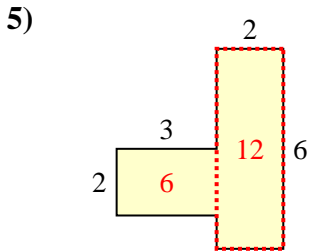
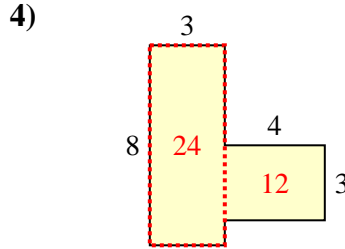
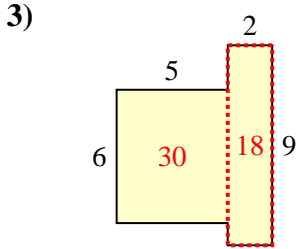
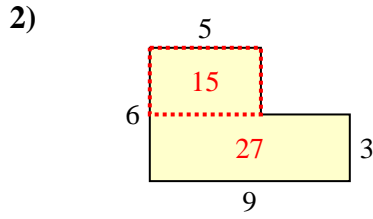
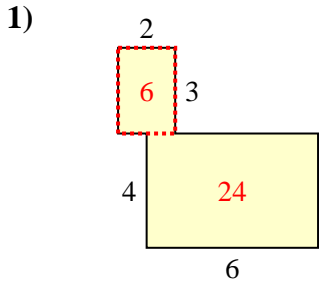


10)





Find the total area of each shape. Measurement is in millimeters (mm). Not to scale.



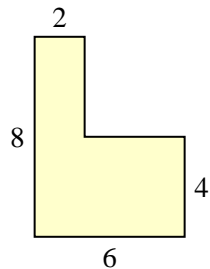
Answers

1. 30 mm²
2. 42 mm²
3. 48 mm²
4. 36 mm²
5. 18 mm²
6. 45 mm²
7. 44 mm²
8. 44 mm²
9. 60 mm²
10. 48 mm²

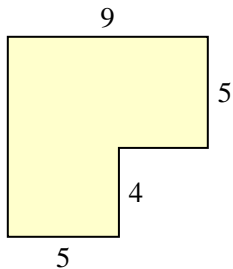


Find the total area of each shape. Measurement is in millimeters (mm). Not to scale.

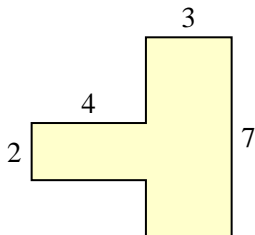
1)



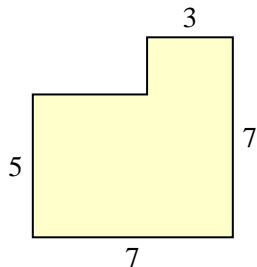
2)



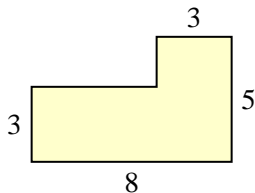
3)



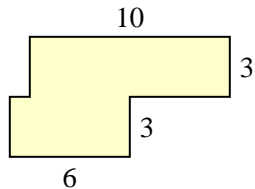
4)



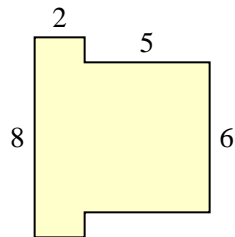
5)



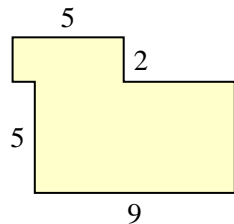
6)



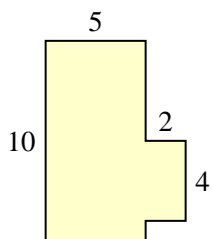
7)



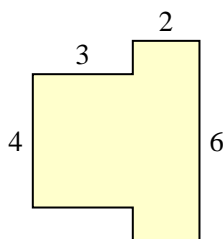
8)



9)



10)



Answers

1. _____

2. _____

3. _____

4. _____

5. _____

6. _____

7. _____

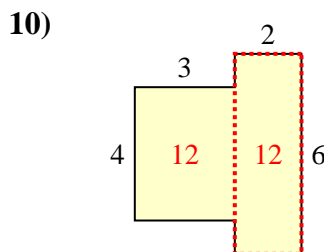
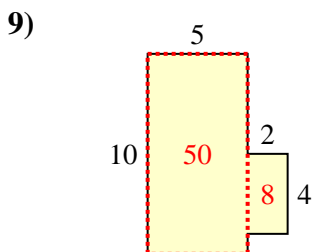
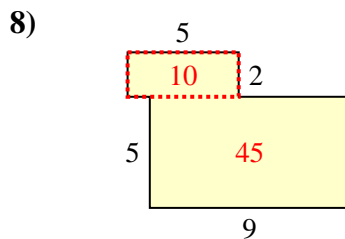
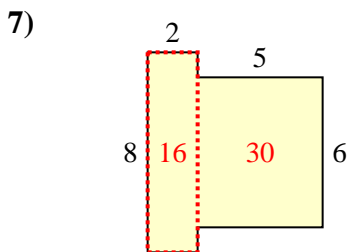
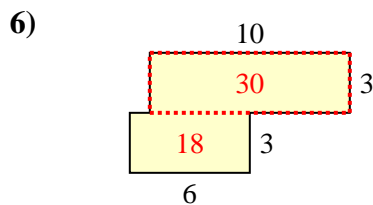
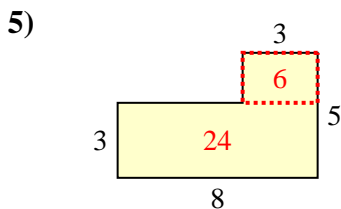
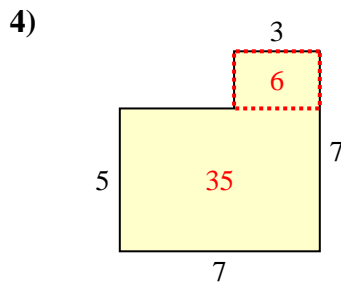
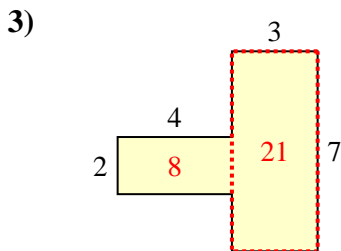
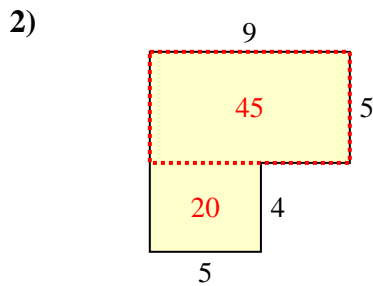
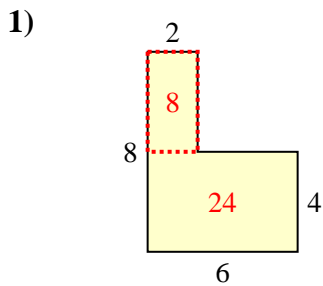
8. _____

9. _____

10. _____



Find the total area of each shape. Measurement is in millimeters (mm). Not to scale.



Answers

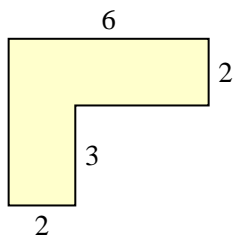
1. 32 mm²
2. 65 mm²
3. 29 mm²
4. 41 mm²
5. 30 mm²
6. 48 mm²
7. 46 mm²
8. 55 mm²
9. 58 mm²
10. 24 mm²



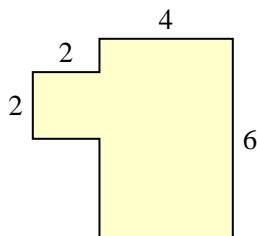
Find the total area of each shape. Measurement is in millimeters (mm). Not to scale.

Answers

1)



2)



1. _____

2. _____

3. _____

4. _____

5. _____

6. _____

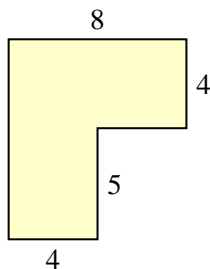
7. _____

8. _____

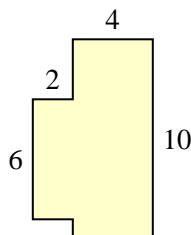
9. _____

10. _____

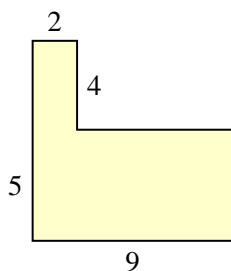
3)



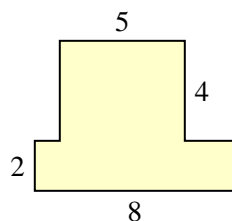
4)



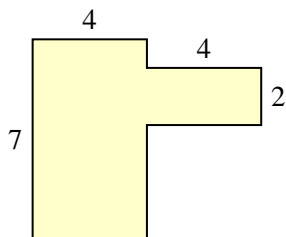
5)



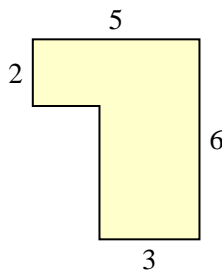
6)



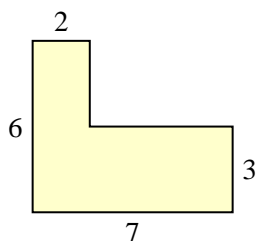
7)



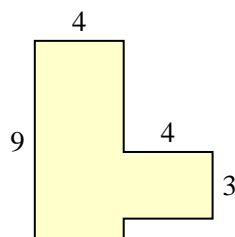
8)



9)

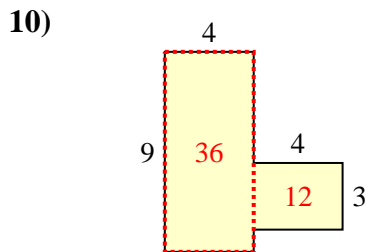
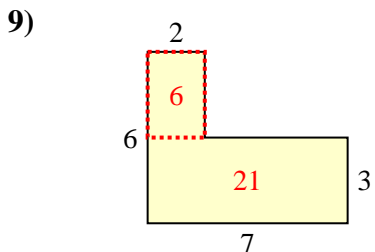
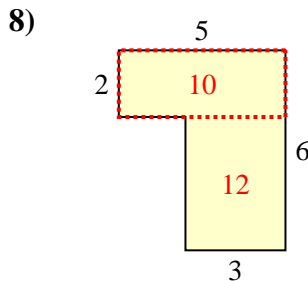
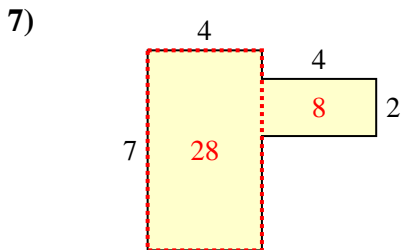
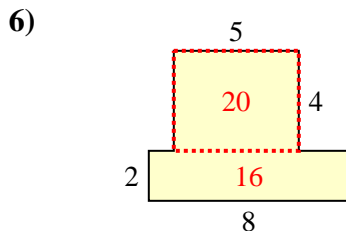
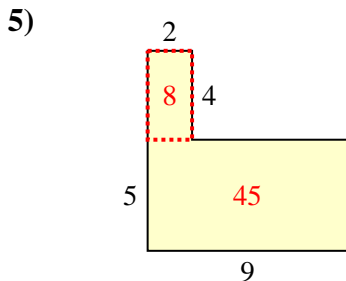
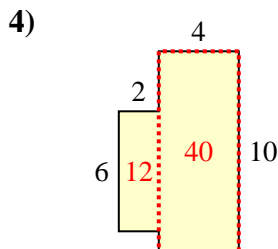
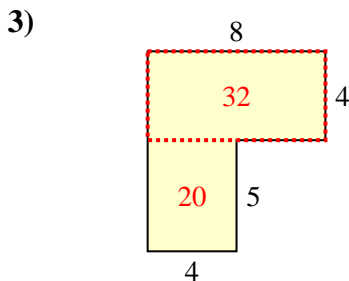
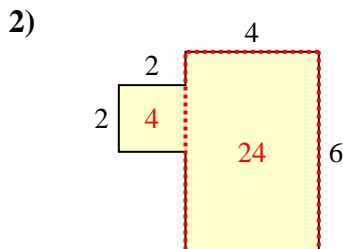
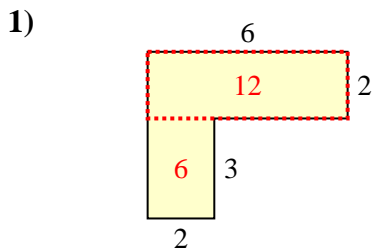


10)





Find the total area of each shape. Measurement is in millimeters (mm). Not to scale.



Answers

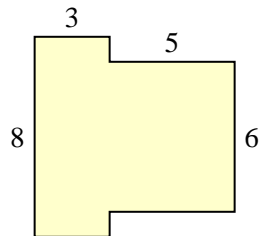
1. 18 mm²
2. 28 mm²
3. 52 mm²
4. 52 mm²
5. 53 mm²
6. 36 mm²
7. 36 mm²
8. 22 mm²
9. 27 mm²
10. 48 mm²



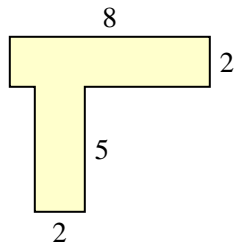
Find the total area of each shape. Measurement is in millimeters (mm). Not to scale.

Answers

1)



2)



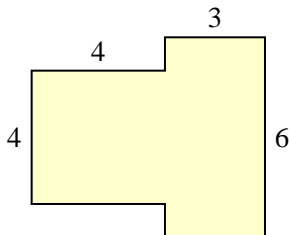
1. _____

2. _____

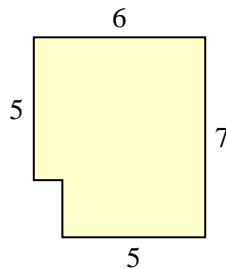
3. _____

4. _____

3)



4)

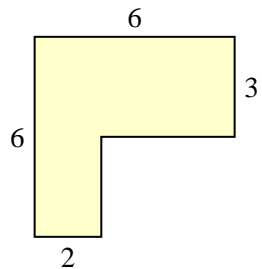


5. _____

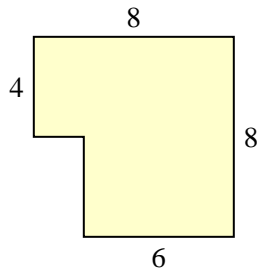
6. _____

7. _____

5)



6)

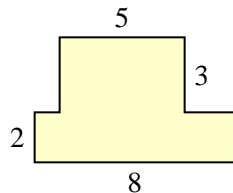


8. _____

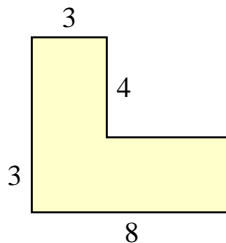
9. _____

10. _____

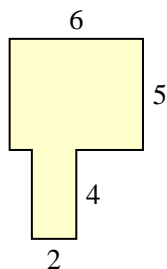
7)



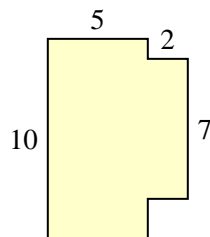
8)



9)

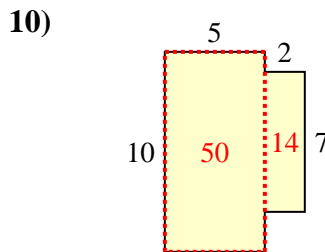
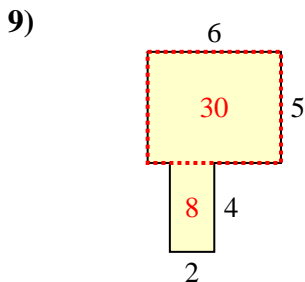
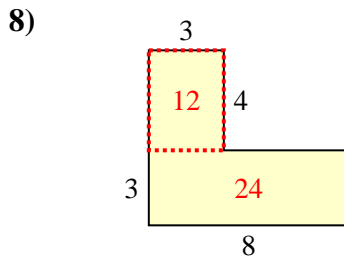
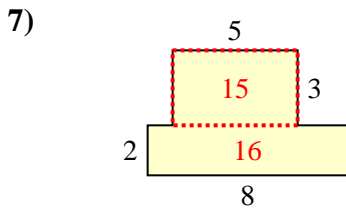
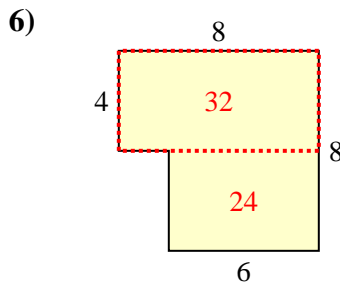
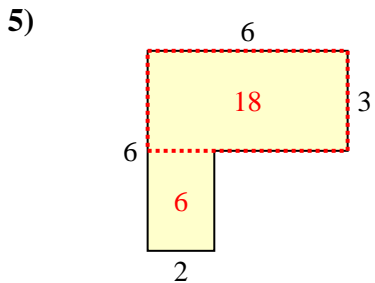
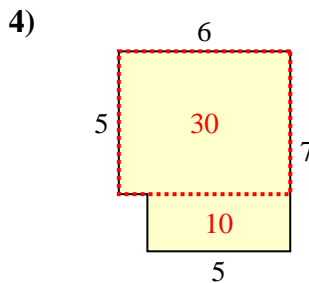
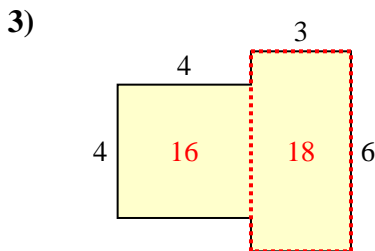
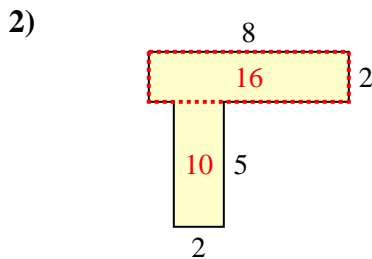
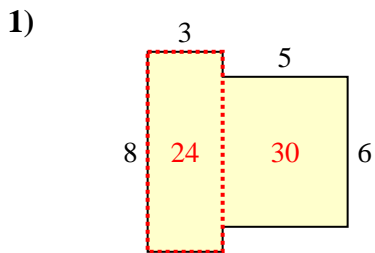


10)





Find the total area of each shape. Measurement is in millimeters (mm). Not to scale.



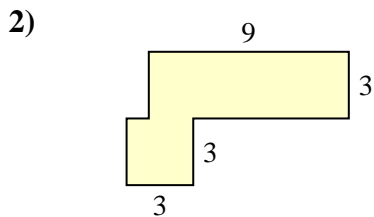
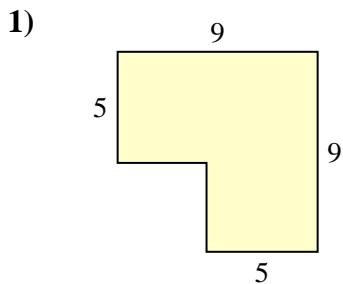
Answers

1. 54 mm²
2. 26 mm²
3. 34 mm²
4. 40 mm²
5. 24 mm²
6. 56 mm²
7. 31 mm²
8. 36 mm²
9. 38 mm²
10. 64 mm²



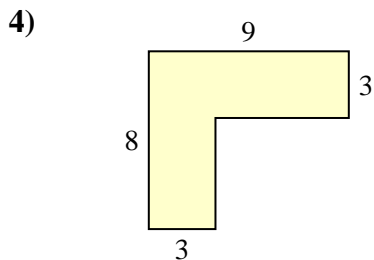
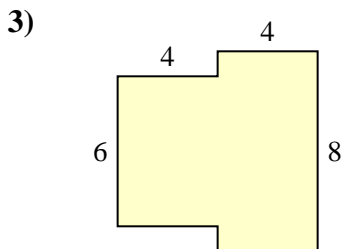
Find the total area of each shape. Measurement is in millimeters (mm). Not to scale.

Answers



1. _____

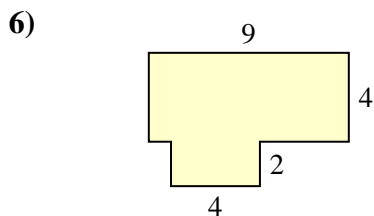
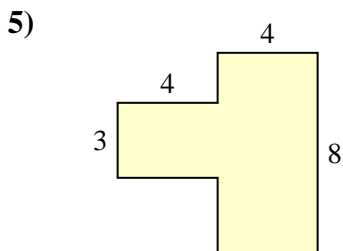
2. _____



3. _____

4. _____

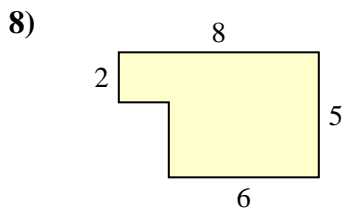
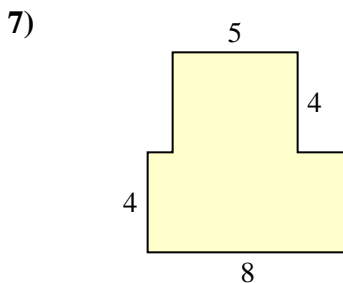
5. _____



6. _____

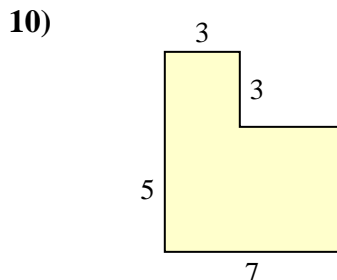
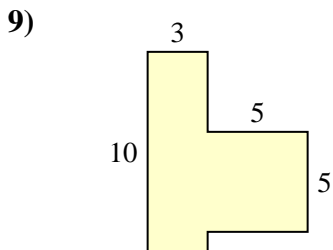
7. _____

8. _____



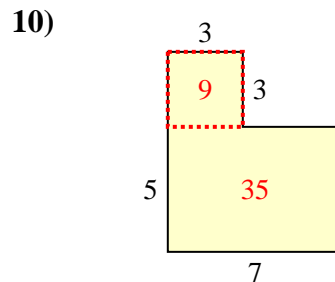
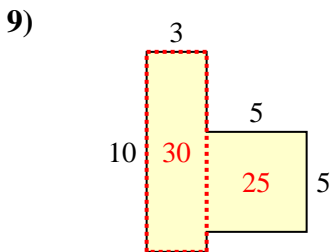
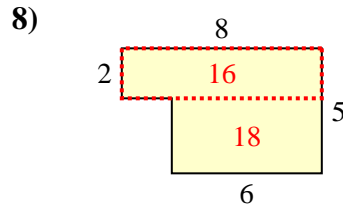
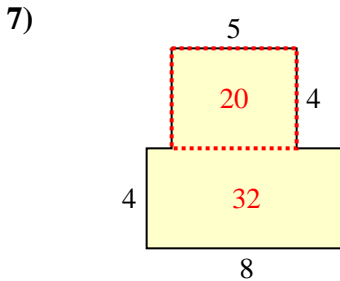
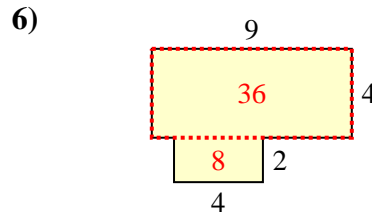
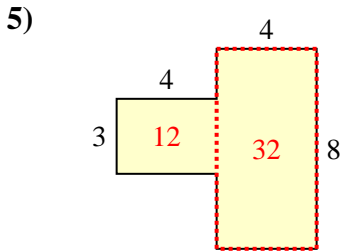
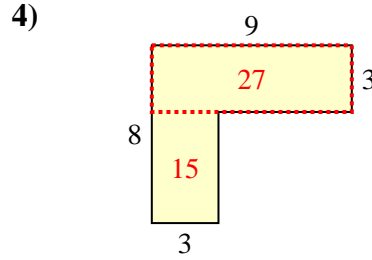
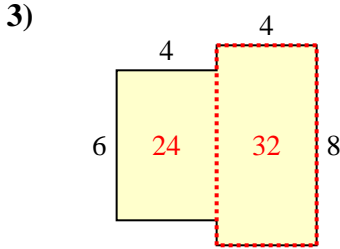
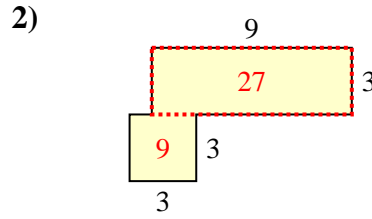
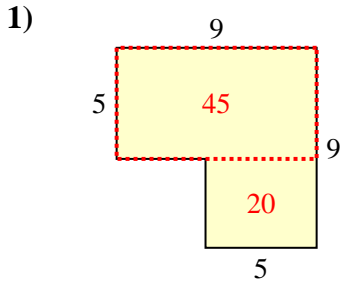
9. _____

10. _____





Find the total area of each shape. Measurement is in millimeters (mm). Not to scale.



Answers

1. 65 mm²
2. 36 mm²
3. 56 mm²
4. 42 mm²
5. 44 mm²
6. 44 mm²
7. 52 mm²
8. 34 mm²
9. 55 mm²
10. 44 mm²