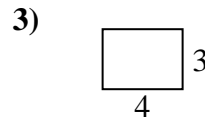
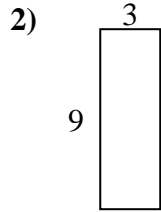
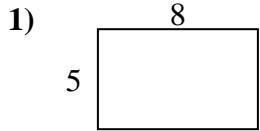


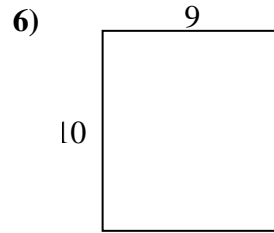
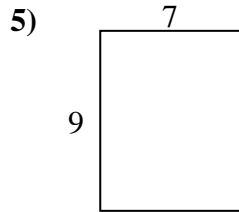
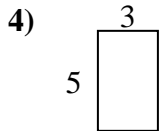


Find the perimeter and area of each figure. Each figure is in centimeters (cm). Not to scale.

Answers



1. _____



2. _____

3. _____

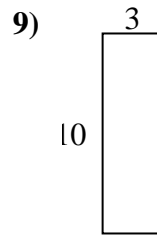
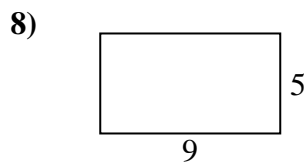
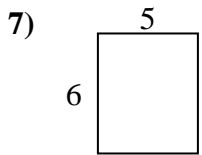
4. _____

5. _____

6. _____

7. _____

8. _____

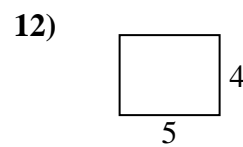
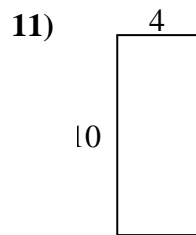
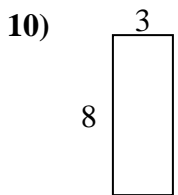


9. _____

10. _____

11. _____

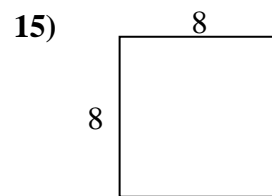
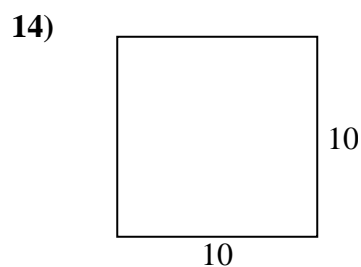
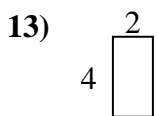
12. _____



13. _____

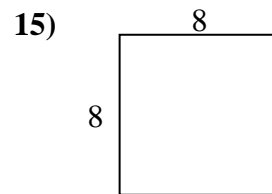
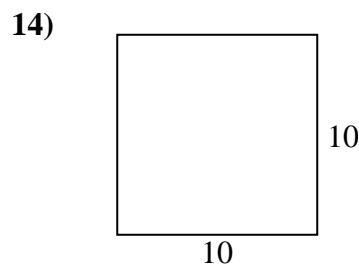
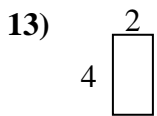
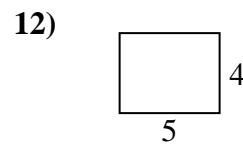
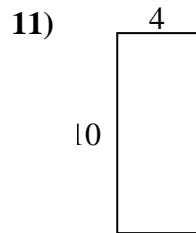
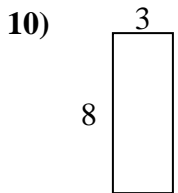
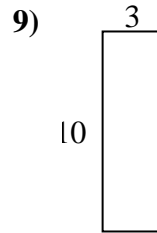
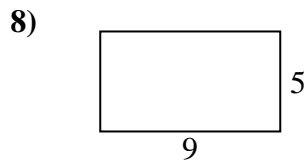
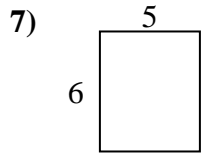
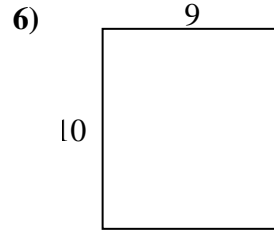
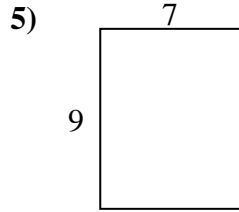
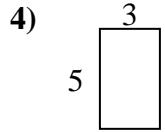
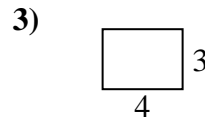
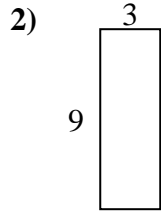
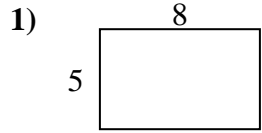
14. _____

15. _____





Find the perimeter and area of each figure. Each figure is in centimeters (cm). Not to scale.



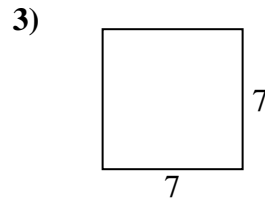
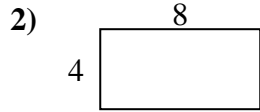
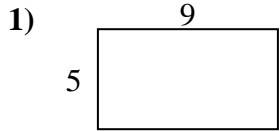
Answers

1. 26 cm 40 cm²
2. 24 cm 27 cm²
3. 14 cm 12 cm²
4. 16 cm 15 cm²
5. 32 cm 63 cm²
6. 38 cm 90 cm²
7. 22 cm 30 cm²
8. 28 cm 45 cm²
9. 26 cm 30 cm²
10. 22 cm 24 cm²
11. 28 cm 40 cm²
12. 18 cm 20 cm²
13. 12 cm 8 cm²
14. 40 cm 100 cm²
15. 32 cm 64 cm²



Find the perimeter and area of each figure. Each figure is in centimeters (cm). Not to scale.

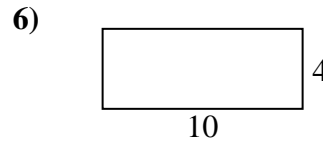
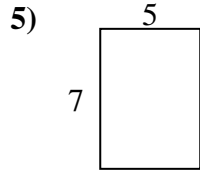
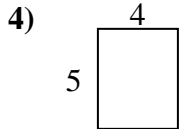
Answers



1. _____

2. _____

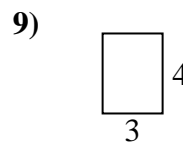
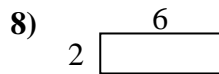
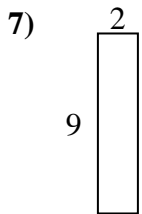
3. _____



4. _____

5. _____

6. _____

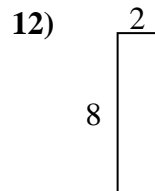
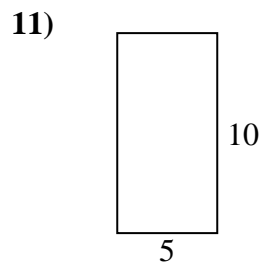
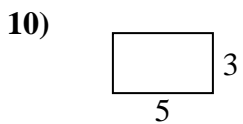


7. _____

8. _____

9. _____

10. _____



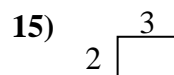
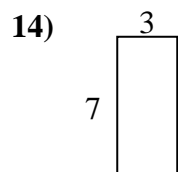
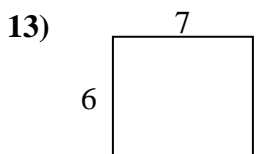
11. _____

12. _____

13. _____

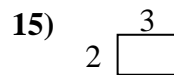
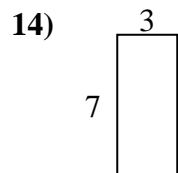
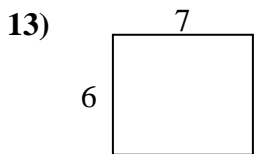
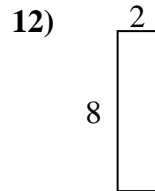
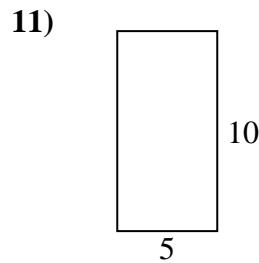
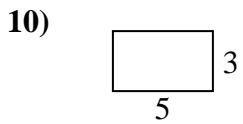
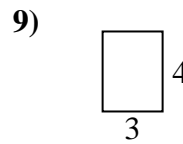
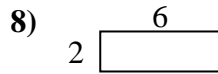
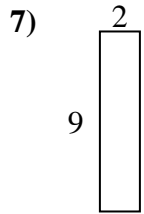
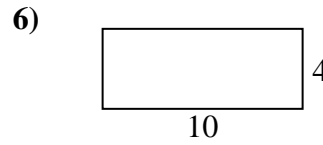
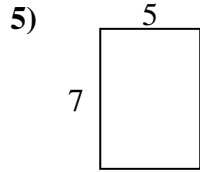
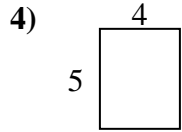
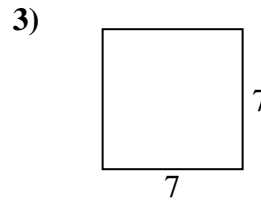
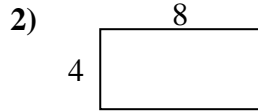
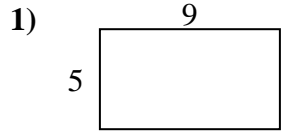
14. _____

15. _____





Find the perimeter and area of each figure. Each figure is in centimeters (cm). Not to scale.



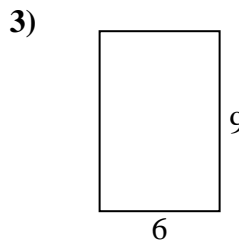

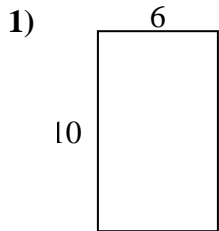
Answers

1. 28 cm 45 cm²
2. 24 cm 32 cm²
3. 28 cm 49 cm²
4. 18 cm 20 cm²
5. 24 cm 35 cm²
6. 28 cm 40 cm²
7. 22 cm 18 cm²
8. 16 cm 12 cm²
9. 14 cm 12 cm²
10. 16 cm 15 cm²
11. 30 cm 50 cm²
12. 20 cm 16 cm²
13. 26 cm 42 cm²
14. 20 cm 21 cm²
15. 10 cm 6 cm²

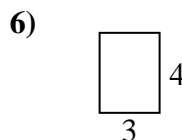
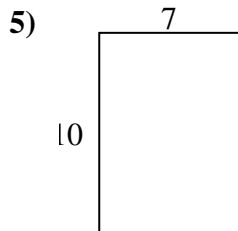
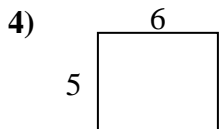


Find the perimeter and area of each figure. Each figure is in centimeters (cm). Not to scale.

Answers



1. _____



2. _____

3. _____

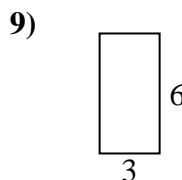
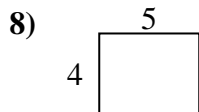
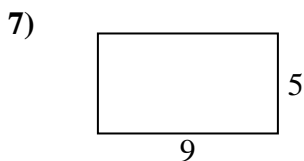
4. _____

5. _____

6. _____

7. _____

8. _____

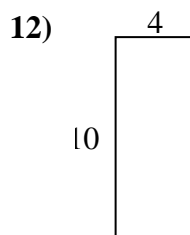
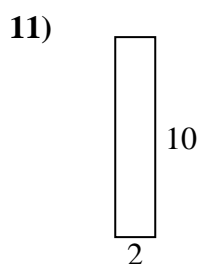
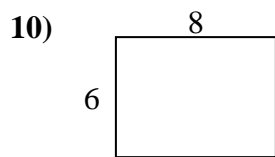


9. _____

10. _____

11. _____

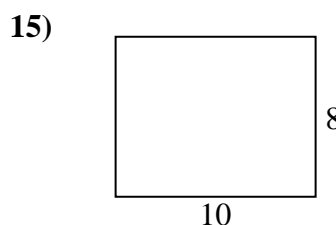
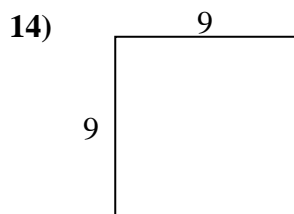
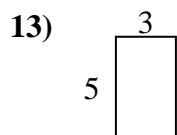
12. _____



13. _____

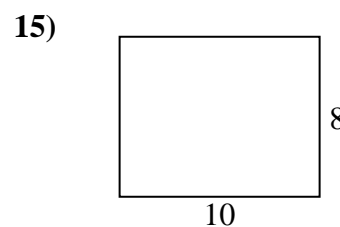
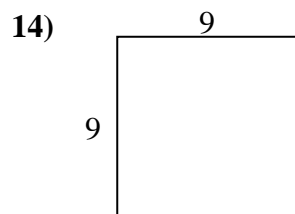
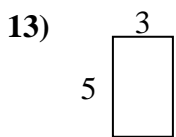
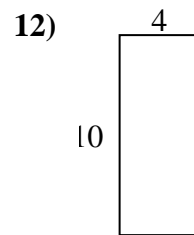
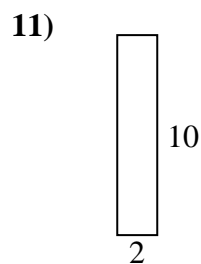
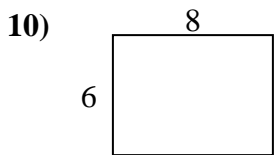
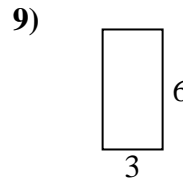
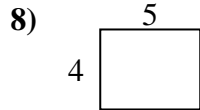
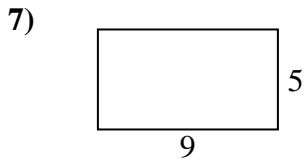
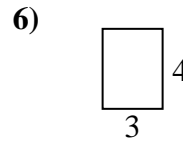
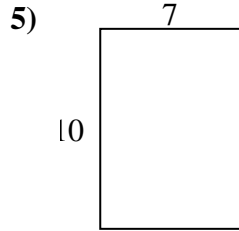
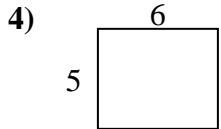
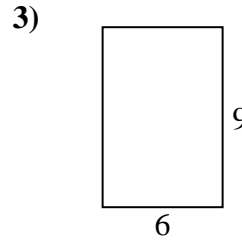
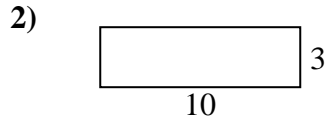
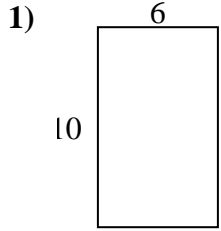
14. _____

15. _____





Find the perimeter and area of each figure. Each figure is in centimeters (cm). Not to scale.



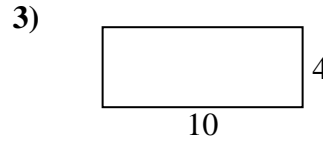

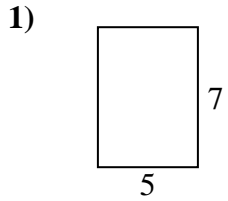
Answers

1. 32 cm 60 cm²
2. 26 cm 30 cm²
3. 30 cm 54 cm²
4. 22 cm 30 cm²
5. 34 cm 70 cm²
6. 14 cm 12 cm²
7. 28 cm 45 cm²
8. 18 cm 20 cm²
9. 18 cm 18 cm²
10. 28 cm 48 cm²
11. 24 cm 20 cm²
12. 28 cm 40 cm²
13. 16 cm 15 cm²
14. 36 cm 81 cm²
15. 36 cm 80 cm²

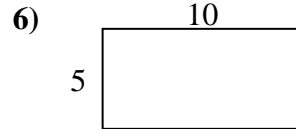
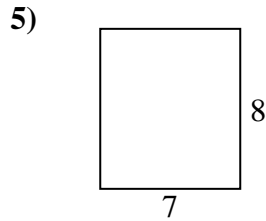
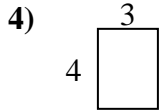


Find the perimeter and area of each figure. Each figure is in centimeters (cm). Not to scale.

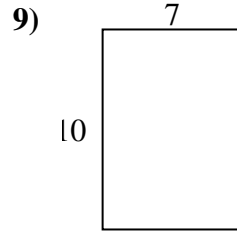
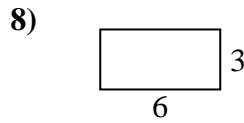
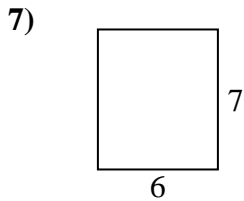
Answers



1. _____



2. _____



3. _____

4. _____

5. _____

6. _____

7. _____

8. _____

9. _____

10. _____

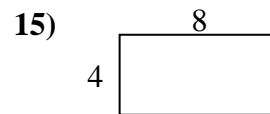
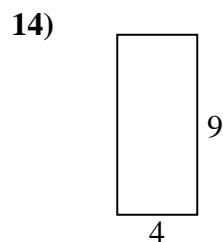
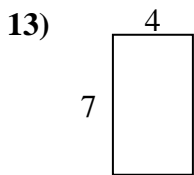
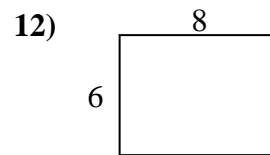
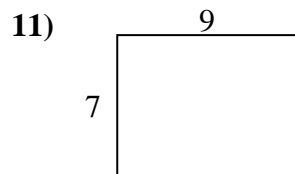
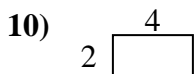
11. _____

12. _____

13. _____

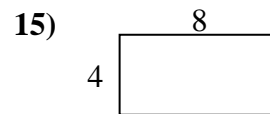
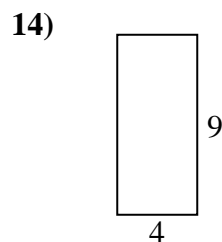
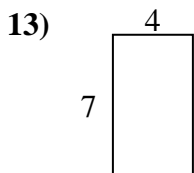
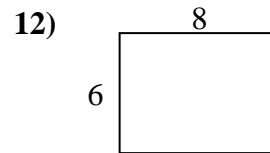
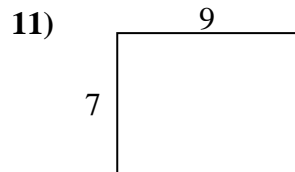
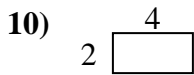
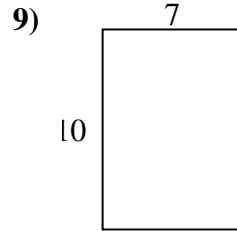
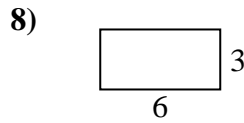
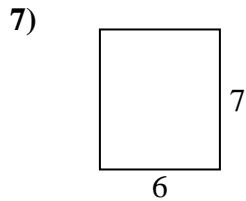
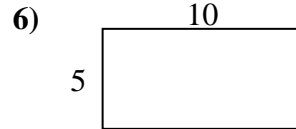
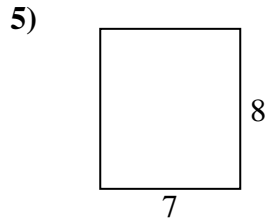
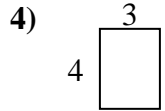
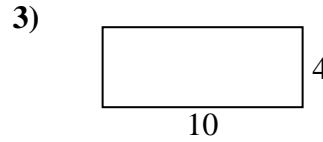

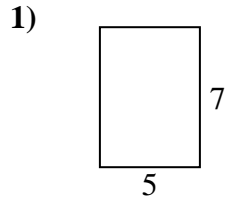
14. _____

15. _____





Find the perimeter and area of each figure. Each figure is in centimeters (cm). Not to scale.



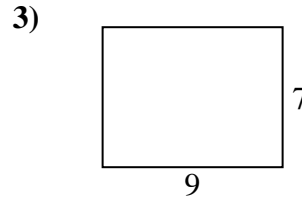
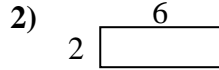
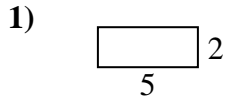
Answers

1. 24 cm 35 cm²
2. 24 cm 20 cm²
3. 28 cm 40 cm²
4. 14 cm 12 cm²
5. 30 cm 56 cm²
6. 30 cm 50 cm²
7. 26 cm 42 cm²
8. 18 cm 18 cm²
9. 34 cm 70 cm²
10. 12 cm 8 cm²
11. 32 cm 63 cm²
12. 28 cm 48 cm²
13. 22 cm 28 cm²
14. 26 cm 36 cm²
15. 24 cm 32 cm²



Find the perimeter and area of each figure. Each figure is in centimeters (cm). Not to scale.

Answers

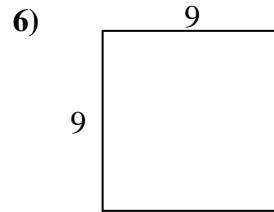
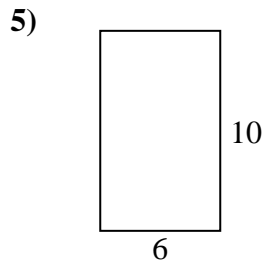
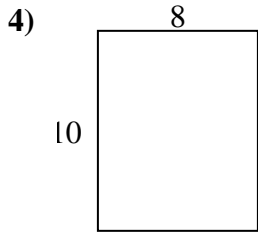


1. _____

2. _____

3. _____

4. _____

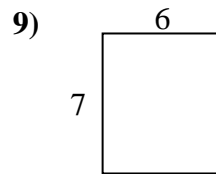
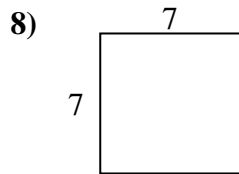
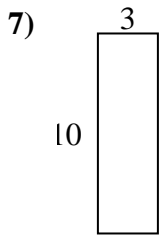


5. _____

6. _____

7. _____

8. _____

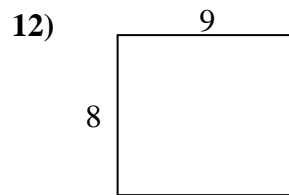
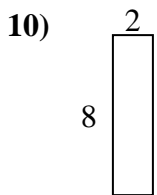


9. _____

10. _____

11. _____

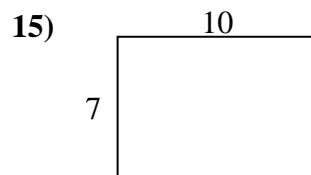
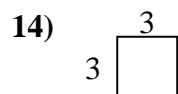
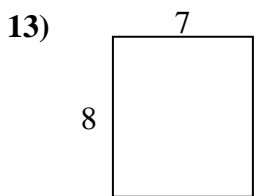
12. _____



13. _____

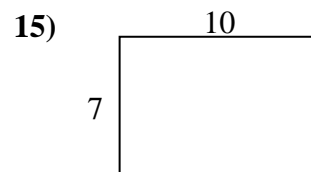
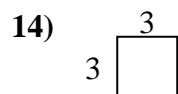
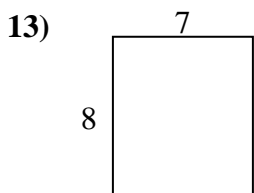
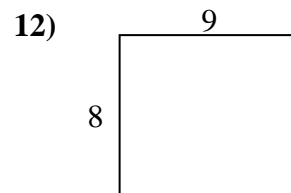
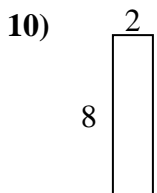
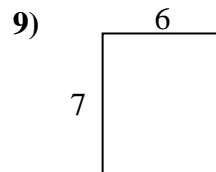
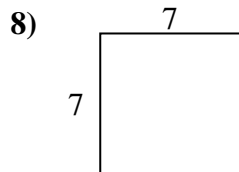
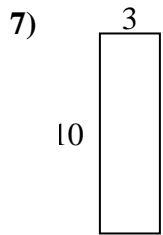
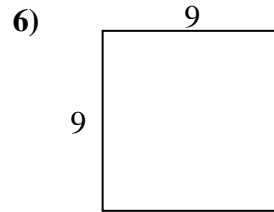
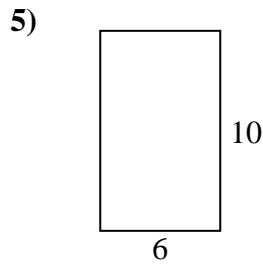
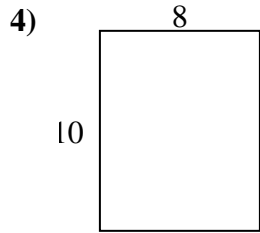
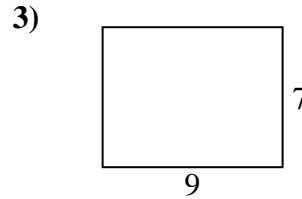
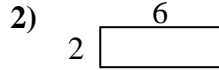
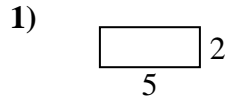
14. _____

15. _____





Find the perimeter and area of each figure. Each figure is in centimeters (cm). Not to scale.



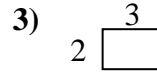
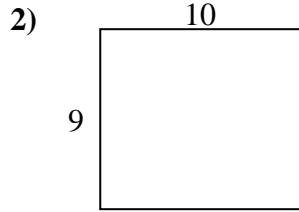
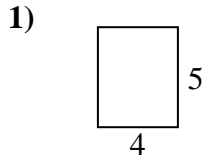
Answers

1. 14 cm 10 cm²
2. 16 cm 12 cm²
3. 32 cm 63 cm²
4. 36 cm 80 cm²
5. 32 cm 60 cm²
6. 36 cm 81 cm²
7. 26 cm 30 cm²
8. 28 cm 49 cm²
9. 26 cm 42 cm²
10. 20 cm 16 cm²
11. 18 cm 18 cm²
12. 34 cm 72 cm²
13. 30 cm 56 cm²
14. 12 cm 9 cm²
15. 34 cm 70 cm²

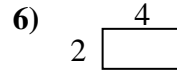
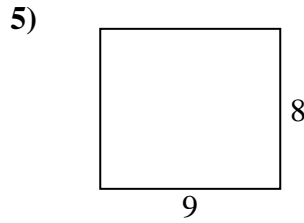
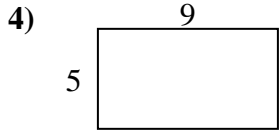


Find the perimeter and area of each figure. Each figure is in centimeters (cm). Not to scale.

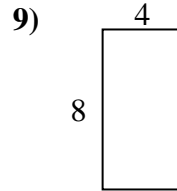
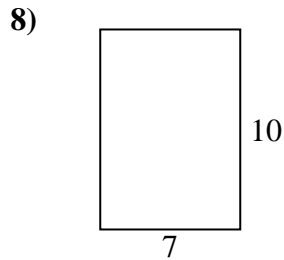
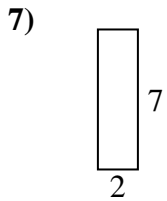
Answers



1. _____



2. _____



3. _____

4. _____

5. _____

6. _____

7. _____

8. _____

9. _____

10. _____

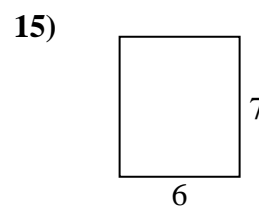
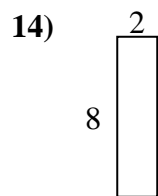
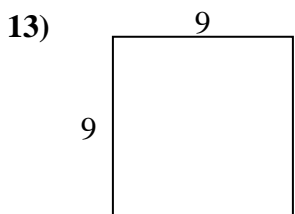
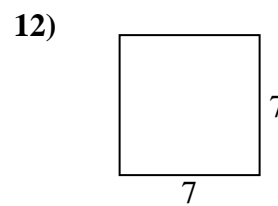
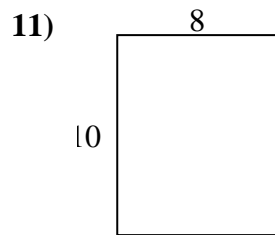
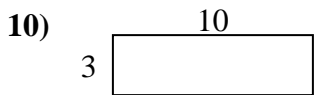
11. _____

12. _____

13. _____

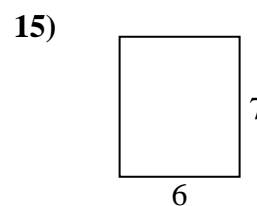
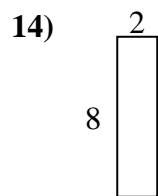
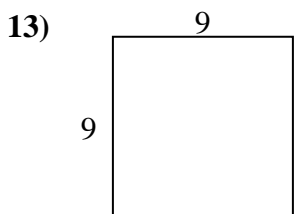
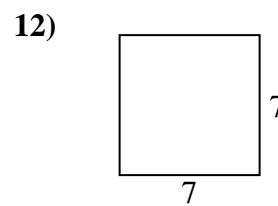
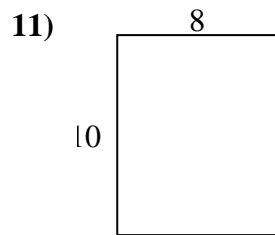
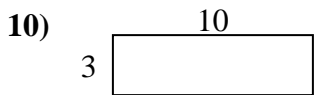
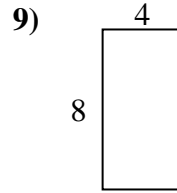
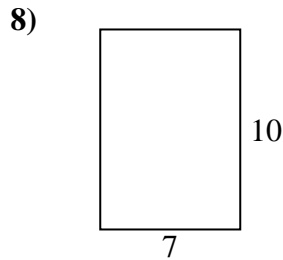
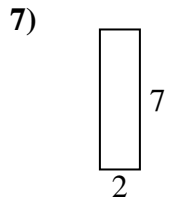
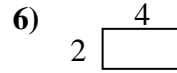
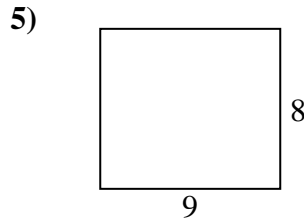
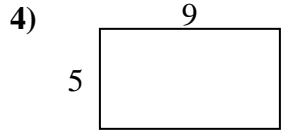
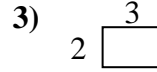
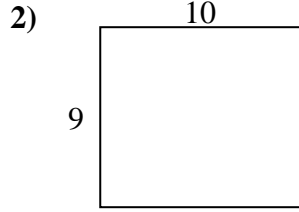
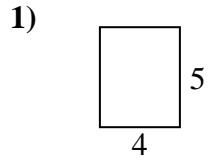
14. _____

15. _____





Find the perimeter and area of each figure. Each figure is in centimeters (cm). Not to scale.



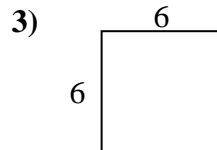
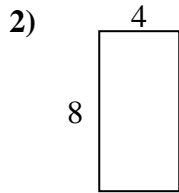
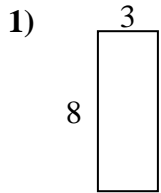
Answers

1. 18 cm 20 cm²
2. 38 cm 90 cm²
3. 10 cm 6 cm²
4. 28 cm 45 cm²
5. 34 cm 72 cm²
6. 12 cm 8 cm²
7. 18 cm 14 cm²
8. 34 cm 70 cm²
9. 24 cm 32 cm²
10. 26 cm 30 cm²
11. 36 cm 80 cm²
12. 28 cm 49 cm²
13. 36 cm 81 cm²
14. 20 cm 16 cm²
15. 26 cm 42 cm²

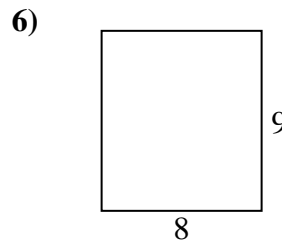
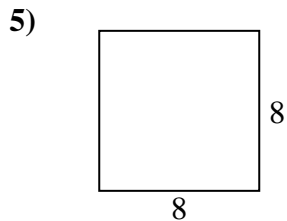
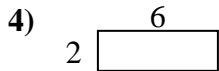


Find the perimeter and area of each figure. Each figure is in centimeters (cm). Not to scale.

Answers



1. _____



2. _____

3. _____

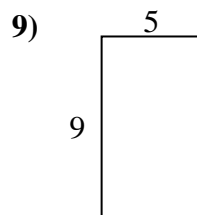
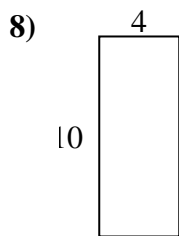
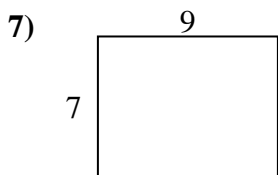
4. _____

5. _____

6. _____

7. _____

8. _____

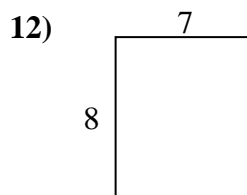
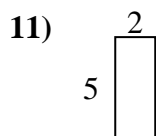
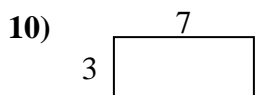


9. _____

10. _____

11. _____

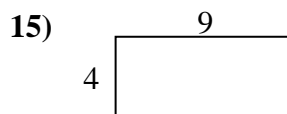
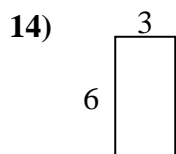
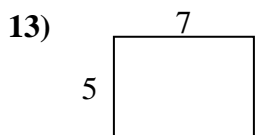
12. _____



13. _____

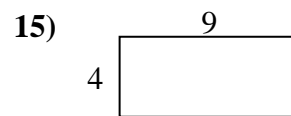
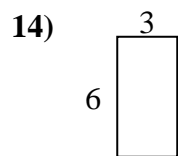
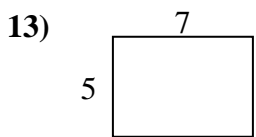
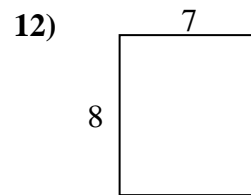
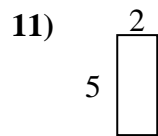
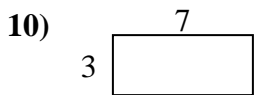
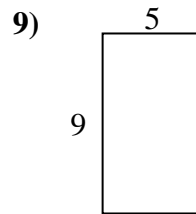
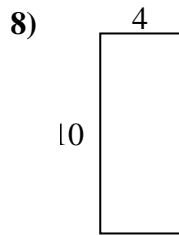
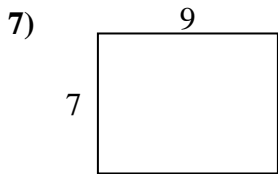
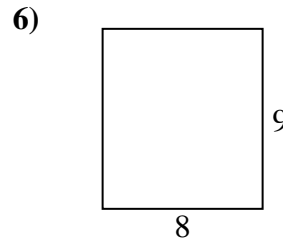
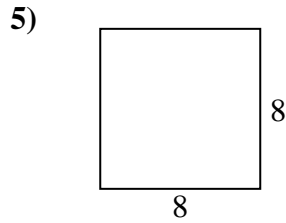
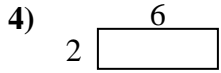
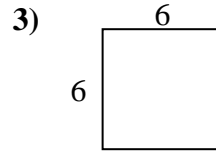
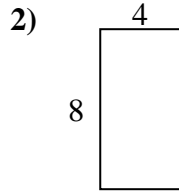
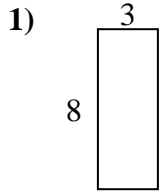
14. _____

15. _____





Find the perimeter and area of each figure. Each figure is in centimeters (cm). Not to scale.



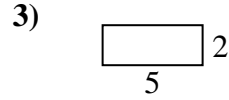
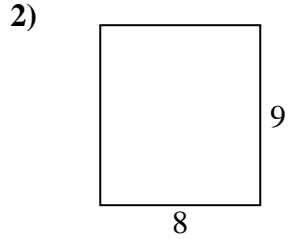
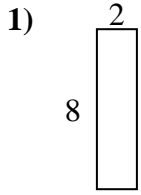
Answers

1. 22 cm 24 cm²
2. 24 cm 32 cm²
3. 24 cm 36 cm²
4. 16 cm 12 cm²
5. 32 cm 64 cm²
6. 34 cm 72 cm²
7. 32 cm 63 cm²
8. 28 cm 40 cm²
9. 28 cm 45 cm²
10. 20 cm 21 cm²
11. 14 cm 10 cm²
12. 30 cm 56 cm²
13. 24 cm 35 cm²
14. 18 cm 18 cm²
15. 26 cm 36 cm²

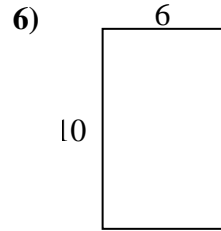
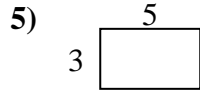
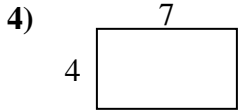


Find the perimeter and area of each figure. Each figure is in centimeters (cm). Not to scale.

Answers



1. _____



2. _____

3. _____

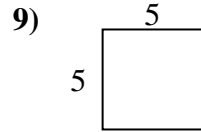
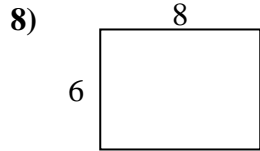
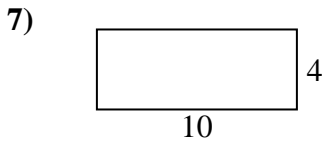
4. _____

5. _____

6. _____

7. _____

8. _____

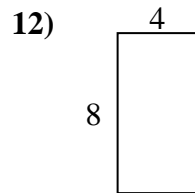
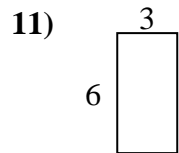
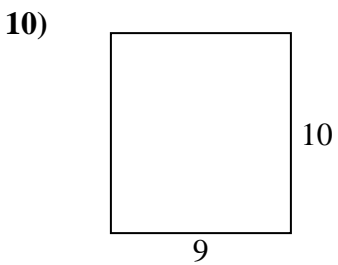


9. _____

10. _____

11. _____

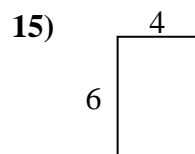
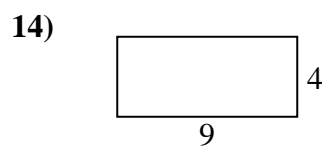
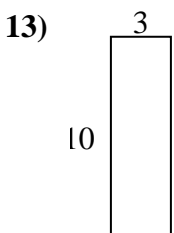
12. _____



13. _____

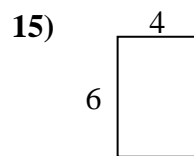
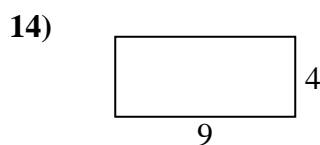
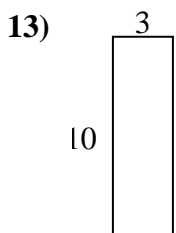
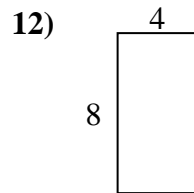
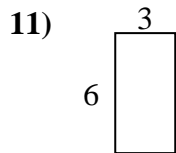
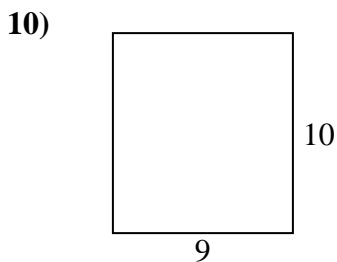
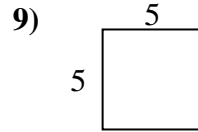
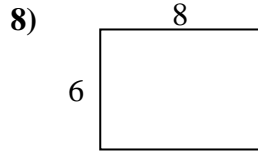
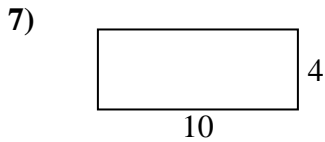
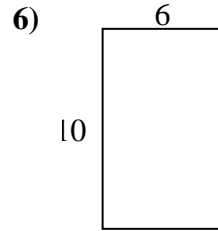
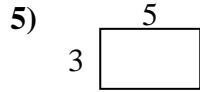
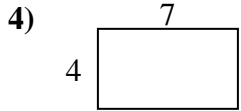
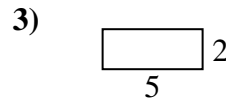
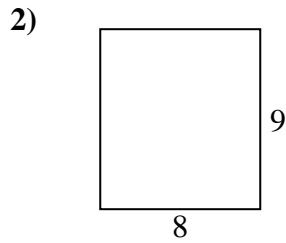
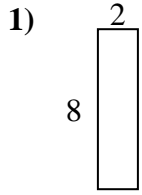
14. _____

15. _____





Find the perimeter and area of each figure. Each figure is in centimeters (cm). Not to scale.



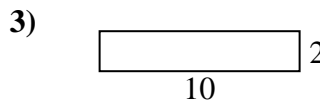
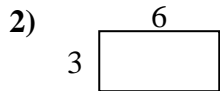
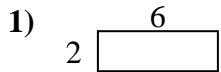
Answers

1. 20 cm 16 cm²
2. 34 cm 72 cm²
3. 14 cm 10 cm²
4. 22 cm 28 cm²
5. 16 cm 15 cm²
6. 32 cm 60 cm²
7. 28 cm 40 cm²
8. 28 cm 48 cm²
9. 20 cm 25 cm²
10. 38 cm 90 cm²
11. 18 cm 18 cm²
12. 24 cm 32 cm²
13. 26 cm 30 cm²
14. 26 cm 36 cm²
15. 20 cm 24 cm²

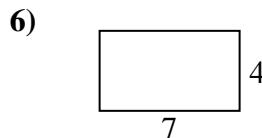
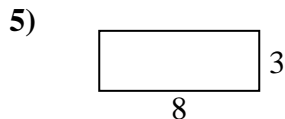
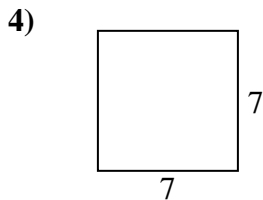


Find the perimeter and area of each figure. Each figure is in centimeters (cm). Not to scale.

Answers



1. _____



2. _____

3. _____

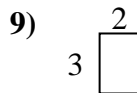
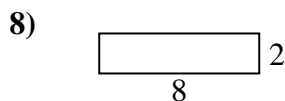
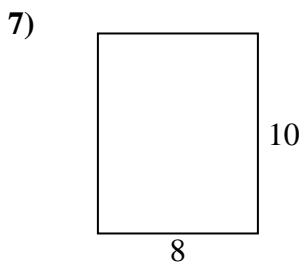
4. _____

5. _____

6. _____

7. _____

8. _____

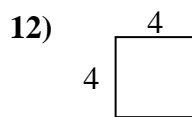
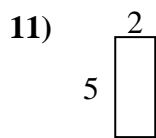
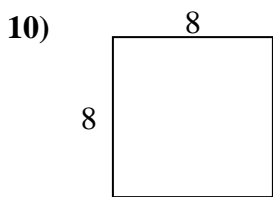


9. _____

10. _____

11. _____

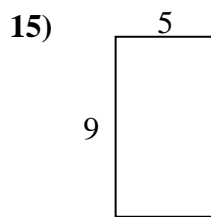
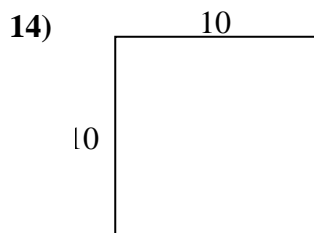
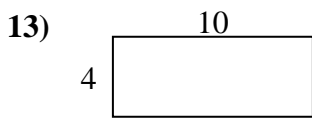
12. _____



13. _____

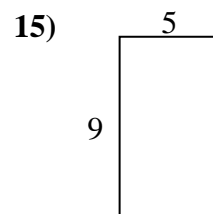
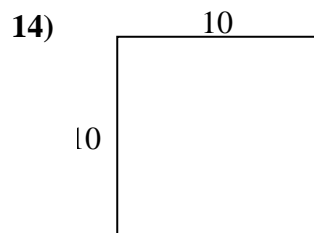
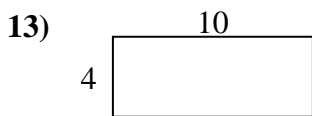
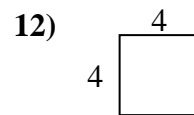
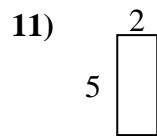
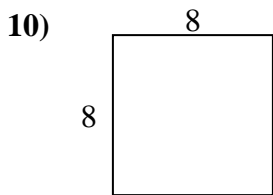
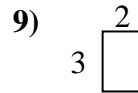
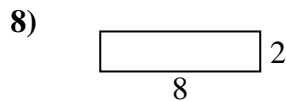
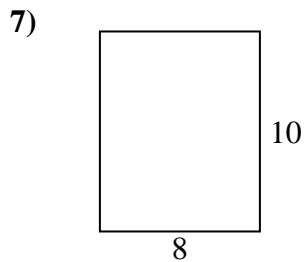
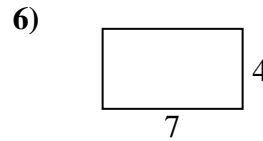
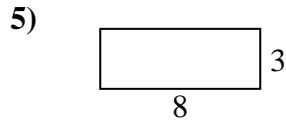
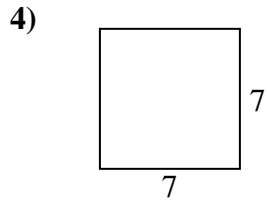
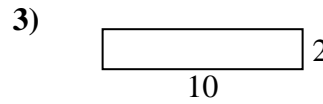
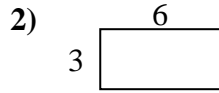
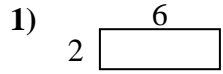
14. _____

15. _____





Find the perimeter and area of each figure. Each figure is in centimeters (cm). Not to scale.



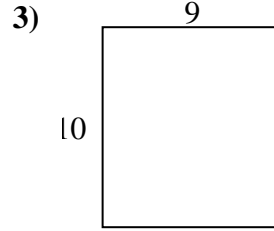
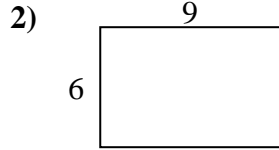
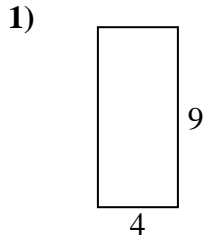
Answers

1. 16 cm 12 cm²
2. 18 cm 18 cm²
3. 24 cm 20 cm²
4. 28 cm 49 cm²
5. 22 cm 24 cm²
6. 22 cm 28 cm²
7. 36 cm 80 cm²
8. 20 cm 16 cm²
9. 10 cm 6 cm²
10. 32 cm 64 cm²
11. 14 cm 10 cm²
12. 16 cm 16 cm²
13. 28 cm 40 cm²
14. 40 cm 100 cm²
15. 28 cm 45 cm²

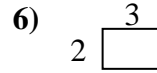
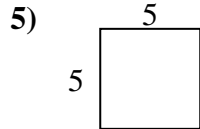
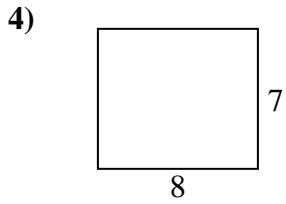


Find the perimeter and area of each figure. Each figure is in centimeters (cm). Not to scale.

Answers



1. _____



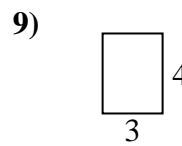
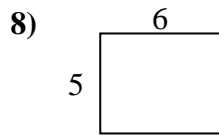
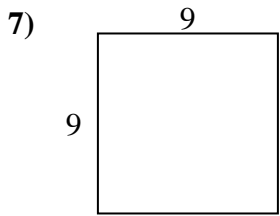
2. _____

3. _____

4. _____

5. _____

6. _____



7. _____

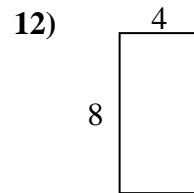
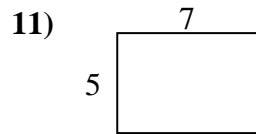
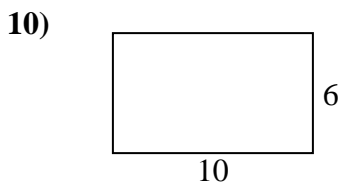
8. _____

9. _____

10. _____

11. _____

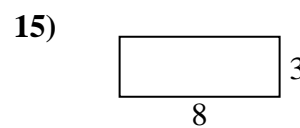
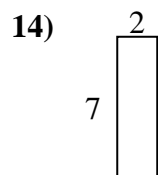
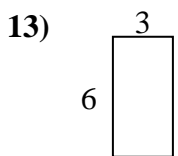
12. _____



13. _____

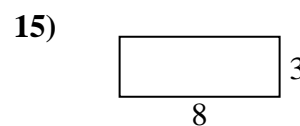
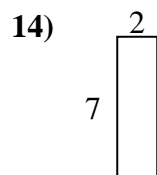
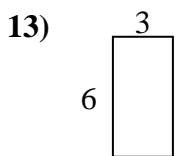
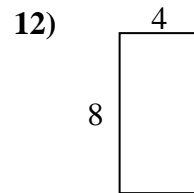
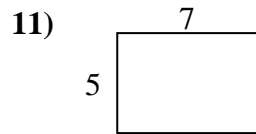
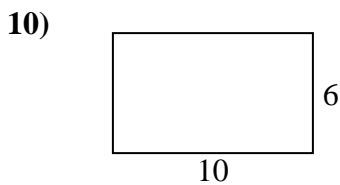
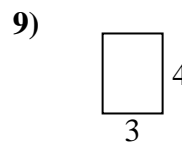
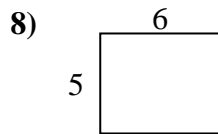
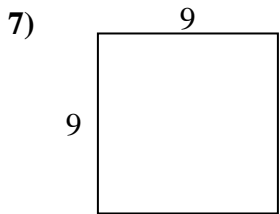
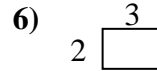
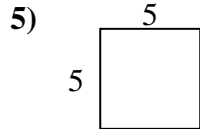
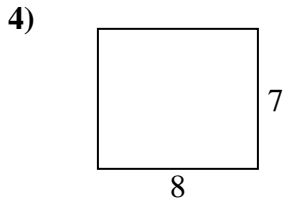
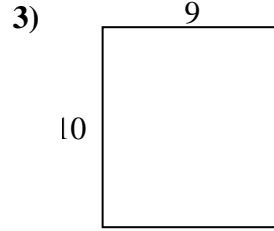
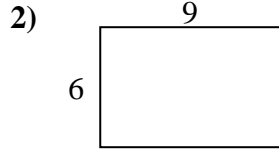
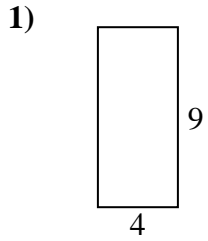
14. _____

15. _____





Find the perimeter and area of each figure. Each figure is in centimeters (cm). Not to scale.



Answers

1. 26 cm 36 cm²
2. 30 cm 54 cm²
3. 38 cm 90 cm²
4. 30 cm 56 cm²
5. 20 cm 25 cm²
6. 10 cm 6 cm²
7. 36 cm 81 cm²
8. 22 cm 30 cm²
9. 14 cm 12 cm²
10. 32 cm 60 cm²
11. 24 cm 35 cm²
12. 24 cm 32 cm²
13. 18 cm 18 cm²
14. 18 cm 14 cm²
15. 22 cm 24 cm²