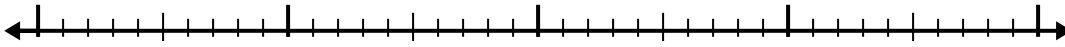





Use the number line to solve each problem.

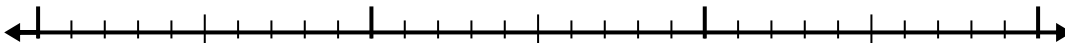
1) $7.8 + 2.9 =$



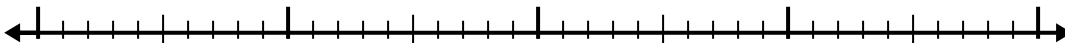
2) $6.6 + 3.8 =$



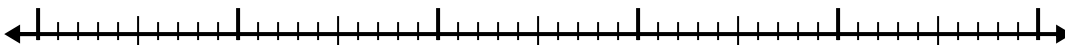
3) $2 + 1.5 =$




4) $5.8 + 1.6 =$



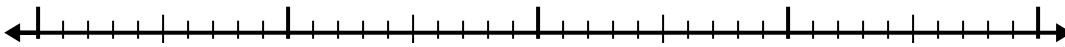
5) $8.1 + 3.2 =$



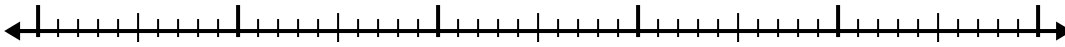
6) $7.7 + 3.5 =$



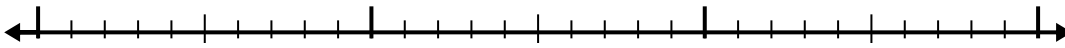
7) $2.2 + 2.8 =$



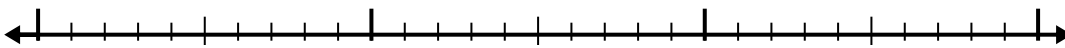
8) $5.4 + 3.5 =$



9) $7.6 + 1.1 =$



10) $4.5 + 1.5 =$



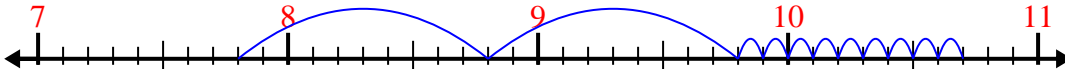
Answers

1. _____
2. _____
3. _____
4. _____
5. _____
6. _____
7. _____
8. _____
9. _____
10. _____

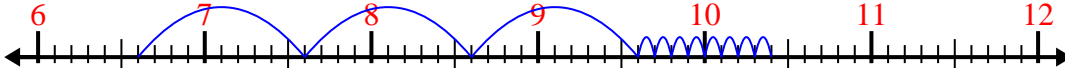


Use the number line to solve each problem.

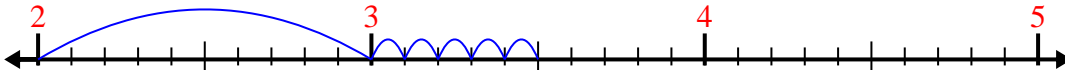
1) $7.8 + 2.9 =$



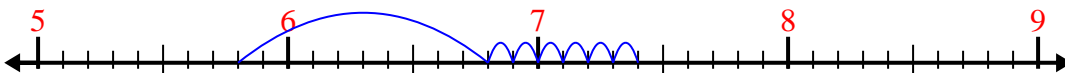
2) $6.6 + 3.8 =$



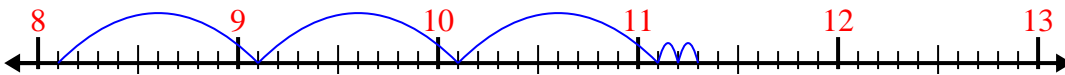
3) $2 + 1.5 =$



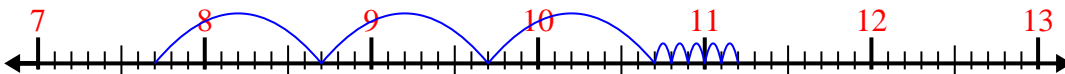
4) $5.8 + 1.6 =$



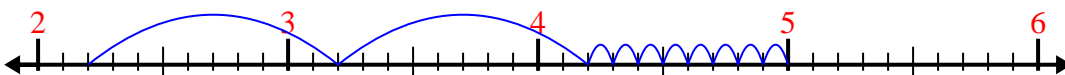
5) $8.1 + 3.2 =$



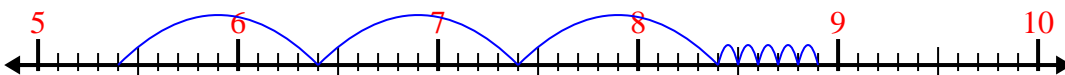
6) $7.7 + 3.5 =$



7) $2.2 + 2.8 =$




8) $5.4 + 3.5 =$



9) $7.6 + 1.1 =$



10) $4.5 + 1.5 =$



Answers

1. 10.7

2. 10.4

3. 3.5

4. 7.4

5. 11.3

6. 11.2

7. 5.0

8. 8.9

9. 8.7

10. 6.0