



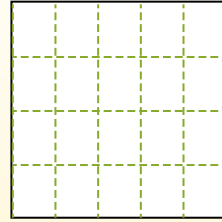
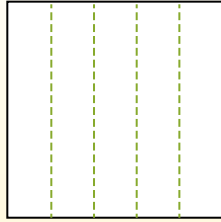

Partition the shape as described and then count to find the number of boxes.

Rows go left to right.


Columns go up and down.

This has 4 rows and 5 columns.


There are 20 boxes total.



1) 2 rows
4 columns




2) 4 rows
4 columns




3) 5 rows
5 columns



4) 3 rows
4 columns




5) 2 rows
5 columns



6) 4 rows
2 columns



7) 5 rows
2 columns



8) 3 rows
2 columns



9) 4 rows
3 columns



Answers

- 1. _____
- 2. _____
- 3. _____
- 4. _____
- 5. _____
- 6. _____
- 7. _____
- 8. _____
- 9. _____



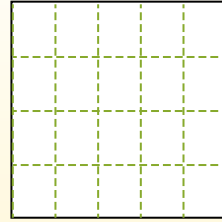
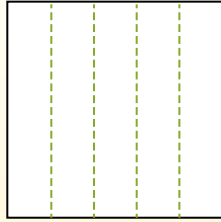

Partition the shape as described and then count to find the number of boxes.

Rows go left to right.

Columns go up and down.

This has 4 rows and 5 columns.

There are 20 boxes total.



Answers

1. 8

2. 16

3. 25

4. 12

5. 10

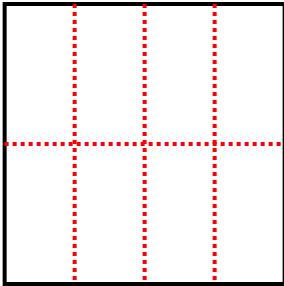
6. 8

7. 10

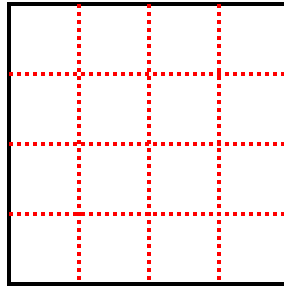
8. 6

9. 12

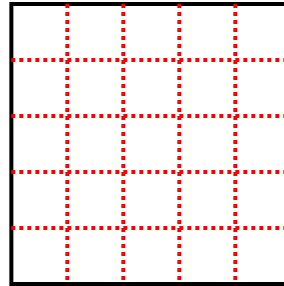
1) 2 rows
4 columns



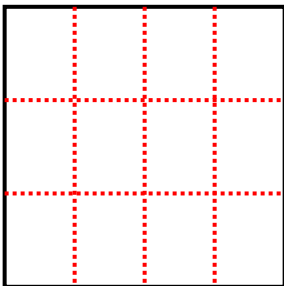
2) 4 rows
4 columns



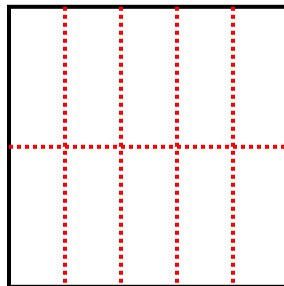
3) 5 rows
5 columns



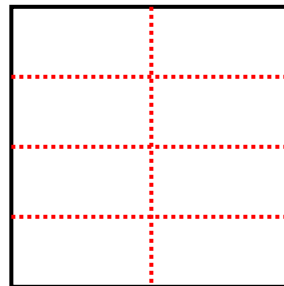
4) 3 rows
4 columns



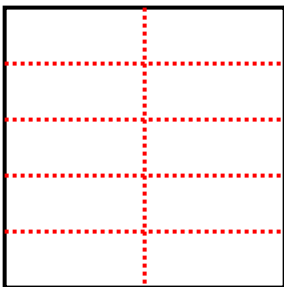
5) 2 rows
5 columns



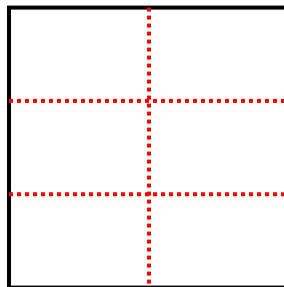
6) 4 rows
2 columns



7) 5 rows
2 columns



8) 3 rows
2 columns



9) 4 rows
3 columns

