




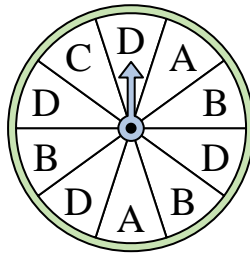
Solve each problem.

Answers

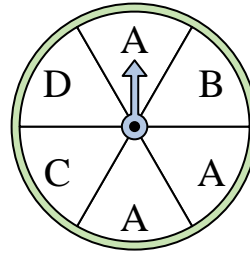
- 1) Which number is the spinner most likely to land on?




- 2) Which letter is the spinner least likely to land on?



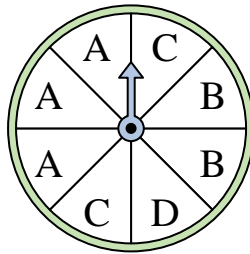
- 3) Which letter is the spinner most likely to land on?




- 4) Which number is the spinner most likely to land on?



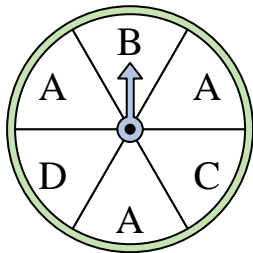
- 5) Which two letters is the spinner equally likely to land on?



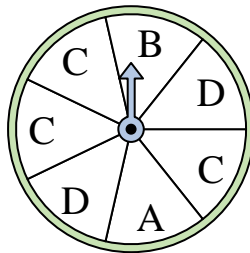
- 6) Which number is the spinner least likely to land on?




- 7) Which letter is the spinner most likely to land on?



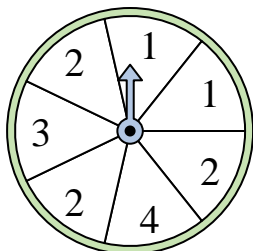
- 8) Which two letters is the spinner equally likely to land on?



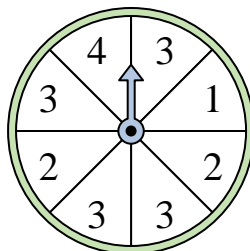
- 9) Which number is the spinner most likely to land on?



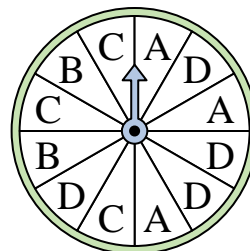
- 10) Which two numbers is the spinner equally likely to land on?



- 11) Which number is the spinner most likely to land on?



- 12) Which letter is the spinner least likely to land on?




1. \_\_\_\_\_
2. \_\_\_\_\_
3. \_\_\_\_\_
4. \_\_\_\_\_
5. \_\_\_\_\_
6. \_\_\_\_\_
7. \_\_\_\_\_
8. \_\_\_\_\_
9. \_\_\_\_\_
10. \_\_\_\_\_
11. \_\_\_\_\_
12. \_\_\_\_\_

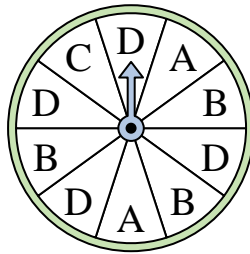


Solve each problem.

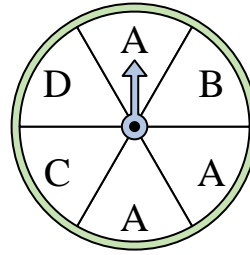
- 1) Which number is the spinner most likely to land on?




- 2) Which letter is the spinner least likely to land on?



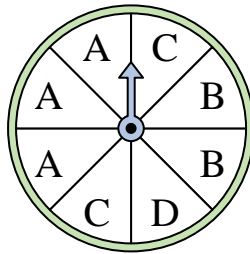
- 3) Which letter is the spinner most likely to land on?




- 4) Which number is the spinner most likely to land on?



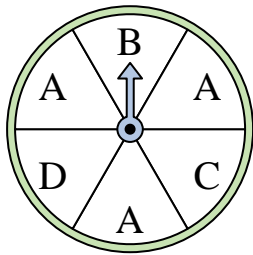
- 5) Which two letters is the spinner equally likely to land on?



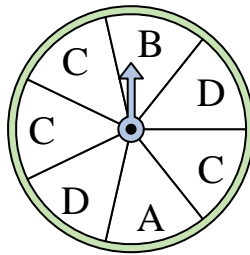
- 6) Which number is the spinner least likely to land on?




- 7) Which letter is the spinner most likely to land on?



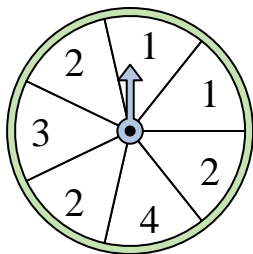
- 8) Which two letters is the spinner equally likely to land on?



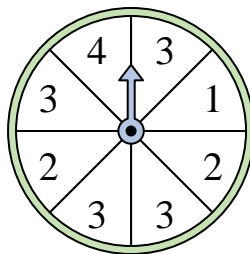
- 9) Which number is the spinner most likely to land on?



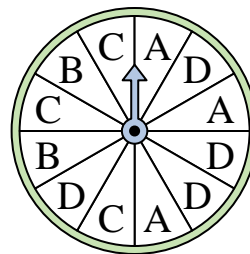
- 10) Which two numbers is the spinner equally likely to land on?



- 11) Which number is the spinner most likely to land on?



- 12) Which letter is the spinner least likely to land on?



Answers

1. **3**

2. **C**

3. **A**

4. **1**

5. **B & C**

6. **2**

7. **A**

8. **A & B**

9. **1**

10. **3 & 4**

11. **3**

12. **B**