

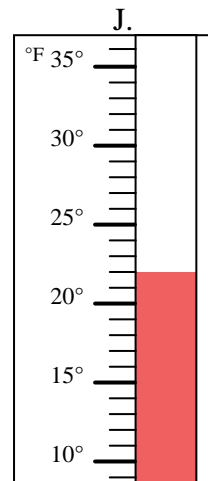
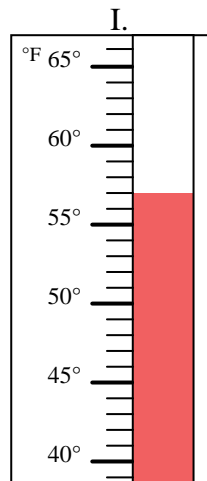
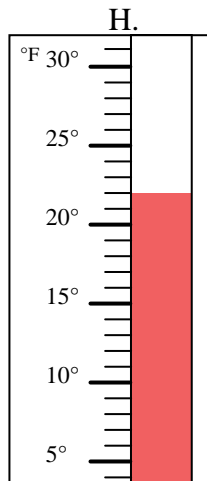
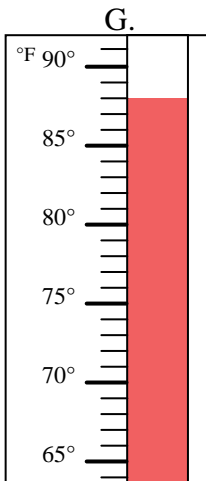
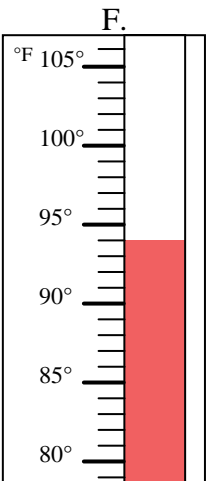
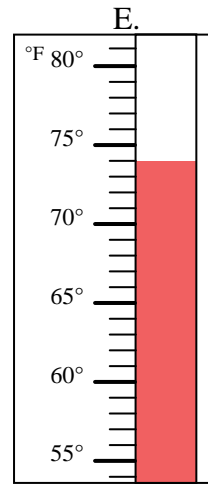
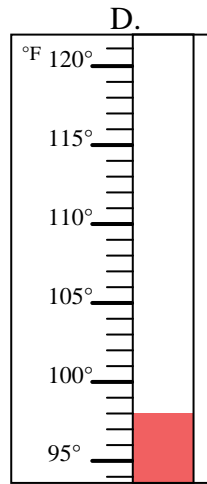
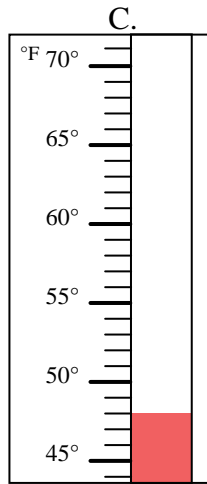
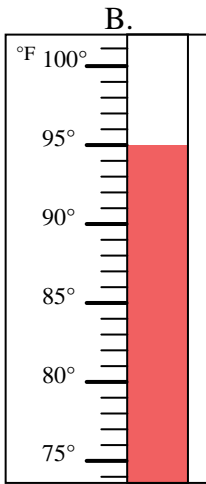
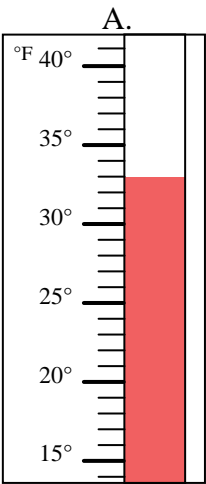


Determine which letter best answers each question.

Answers

- 1) Which thermometer best represents the temperature 88°? _____
- 2) Which thermometer best represents the temperature 98°? _____
- 3) Which thermometer best represents the temperature 48°? _____
- 4) Which thermometer best represents the temperature 22°? _____
- 5) Which thermometer best represents the temperature 57°? _____
- 6) Which thermometer best represents the temperature 22°? _____
- 7) Which thermometer best represents the temperature 33°? _____
- 8) Which thermometer best represents the temperature 74°? _____
- 9) Which thermometer best represents the temperature 95°? _____
- 10) Which thermometer best represents the temperature 94°? _____

1. _____
2. _____
3. _____
4. _____
5. _____
6. _____
7. _____
8. _____
9. _____
10. _____





Determine which letter best answers each question.

- 1) Which thermometer best represents the temperature 88°? G
- 2) Which thermometer best represents the temperature 98°? D
- 3) Which thermometer best represents the temperature 48°? C
- 4) Which thermometer best represents the temperature 22°? H
- 5) Which thermometer best represents the temperature 57°? I
- 6) Which thermometer best represents the temperature 22°? J
- 7) Which thermometer best represents the temperature 33°? A
- 8) Which thermometer best represents the temperature 74°? E
- 9) Which thermometer best represents the temperature 95°? B
- 10) Which thermometer best represents the temperature 94°? F

Answers

1. G
2. D
3. C
4. H
5. I
6. J
7. A
8. E
9. B
10. F

